

# Chapter 5 Bipolar Amplifiers

- 5.1 General Considerations
- 5.2 Operating Point Analysis and Design
- 5.3 Bipolar Amplifier Topologies
- 5.4 Summary and Additional Examples

## General Concepts

- Input and Output Impedances
- Biasing
- DC and Small-Signal Analysis

## Operating Point Analysis

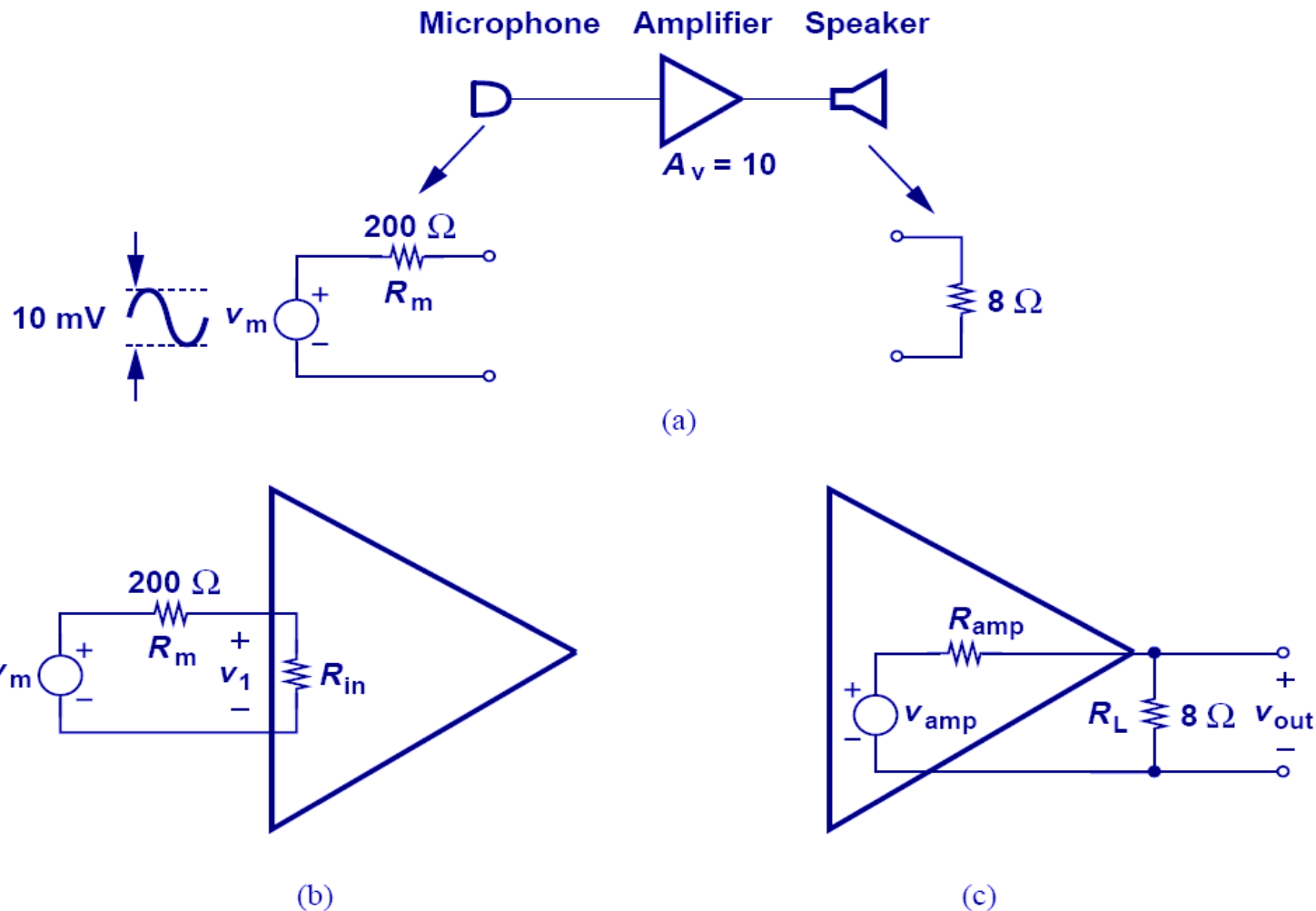
- Simple Biasing
- Emitter Degeneration
- Self-Biasing
- Biasing of PNP Devices

## Amplifier Topologies

- Common-Emitter Stage
- Common-Base Stage
- Emitter Follower

# Voltage Amplifier

- In an ideal voltage amplifier, the input impedance is infinite and the output impedance zero.
- But in reality, input or output impedances depart from their ideal values.



## Example 5.1

An amplifier with a voltage gain of 10 senses a signal generated by a microphone and applies the amplified output to a speaker [Fig. 5.1(a)]. Assume the microphone can be modeled with a voltage source having a 10-mV peak-to-peak signal and a series resistance of  $200\ \Omega$ . Also assume the speaker can be represented by an  $8\text{-}\Omega$  resistor.

(a) Determine the signal level sensed by the amplifier if the circuit has an input impedance of  $2\text{ k}\ \Omega$  or  $500\ \Omega$ .

(b) Determine the signal level delivered to the speaker if the circuit has an output impedance of  $10\ \Omega$  or  $2\ \Omega$ .

### Solution

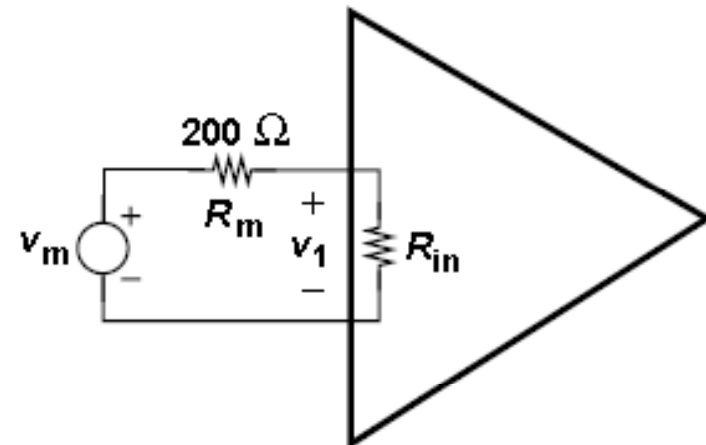
(a) Figure 5.1(b) shows the interface between the microphone and the amplifier. The voltage sensed by the amplifier is therefore given by

$$v_1 = \frac{R_{in}}{R_{in} + R_m} v_m.$$

For  $R_{in} = 2\text{ k}\ \Omega$ ,

$$v_1 = 0.91 v_m$$

only 9% less than the microphone signal level.



## Example 5.1 (cnt'd)

On the other hand, for  $R_{in} = 500 \Omega$ ,

$$v_I = 0.71 v_m$$

i.e., nearly 30% loss. It is therefore desirable to maximize the input impedance in this case.

(b) Drawing the interface between the amplifier and the speaker as in Fig. 5.1(c), we have

$$v_{out} = \frac{R_L}{R_L + R_{amp}} v_{amp}$$

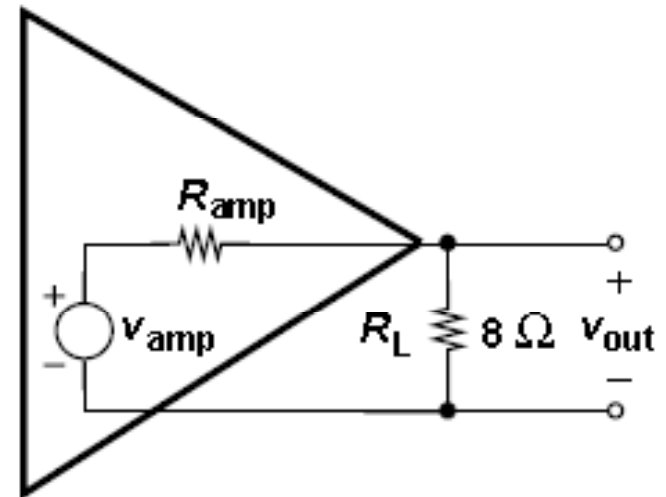
For  $R_{amp} = 10 \Omega$ ,

$$v_{out} = 0.44 v_{amp}$$

a substantial attenuation. For  $R_{amp} = 2 \Omega$ ,

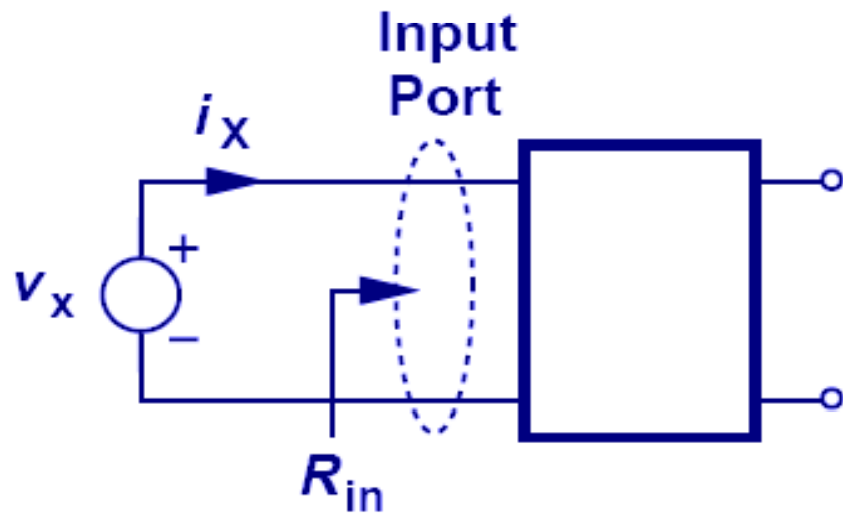
$$v_{out} = 0.8 v_{amp}$$

Thus, the output impedance of the amplifier must be minimized.

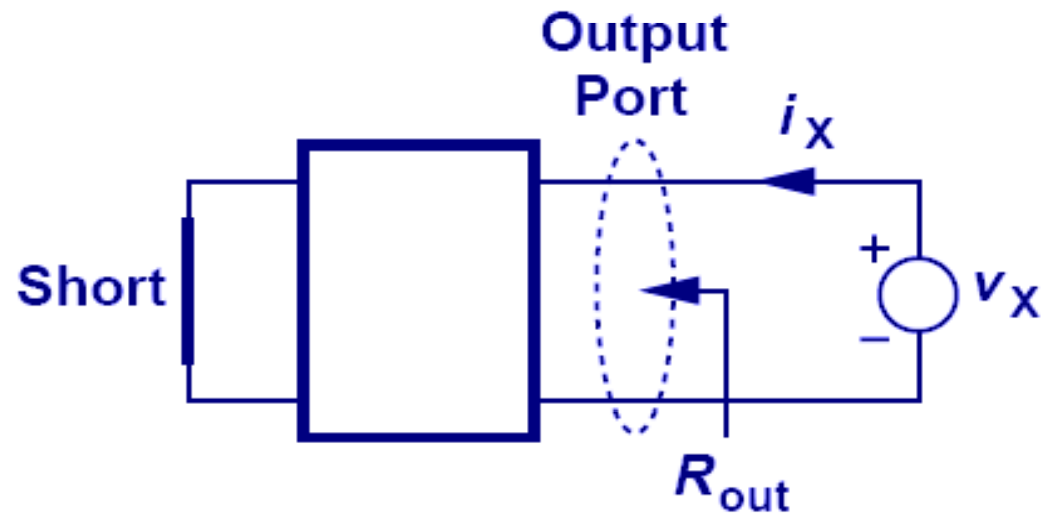


# Input/Output Impedances

- The figures below show the techniques of measuring input and output impedances.
- When calculating input/output impedance, small-signal analysis is assumed.



(a)



(b)

$$R_x = \frac{V_x}{i_x}$$

voltage source is replaced by a short, and current source by an open

## Example 5.2

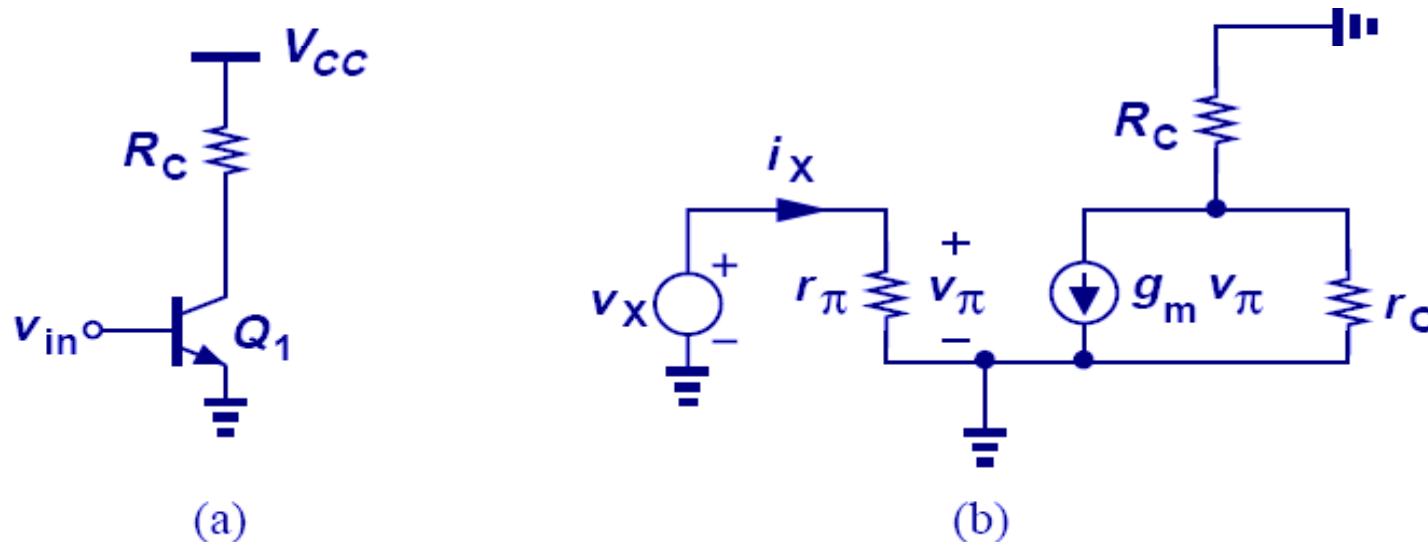
Assuming that the transistor operates in the forward active region, determine the input impedance of the circuit shown in Fig. 5.3(a).

### Solution

Constructing the small-signal equivalent circuit depicted in Fig. 5.3(b), we note that the input impedance is simply given by

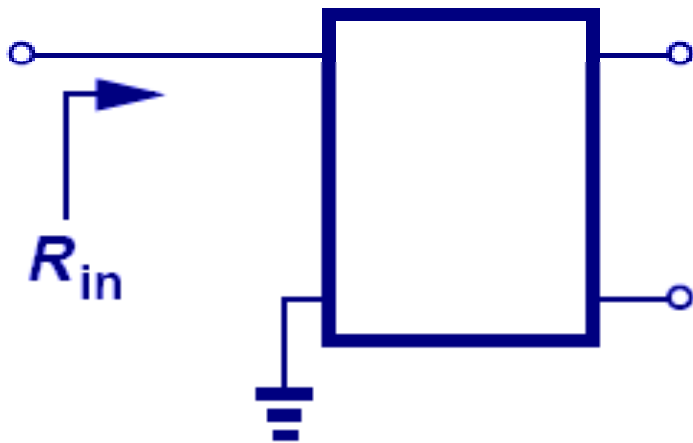
$$\frac{v_x}{i_x} = r_\pi.$$

Since  $r_\pi = \beta/g_m = \beta V_T/I_C$ , we conclude that a higher  $\beta$  or lower  $I_C$  yield a higher input impedance.

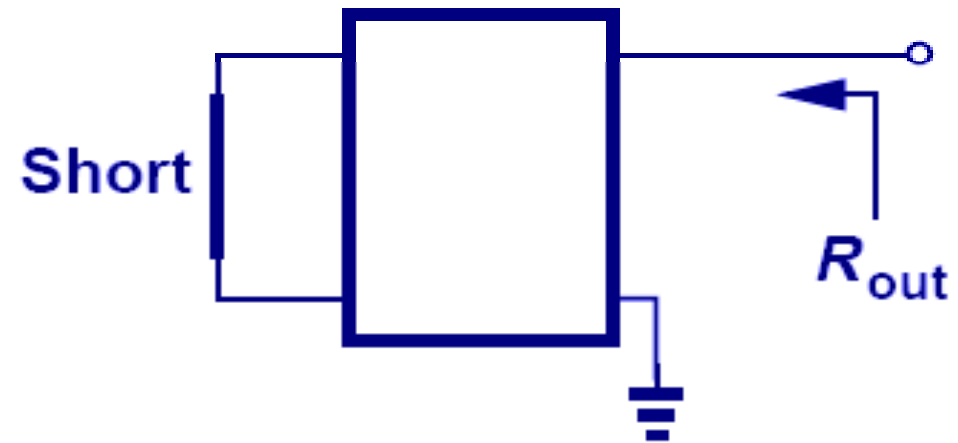


# Impedance at a Node

- When calculating I/O impedances at a port, we usually ground one terminal while applying the test source to the other terminal of interest.



(a)



(b)

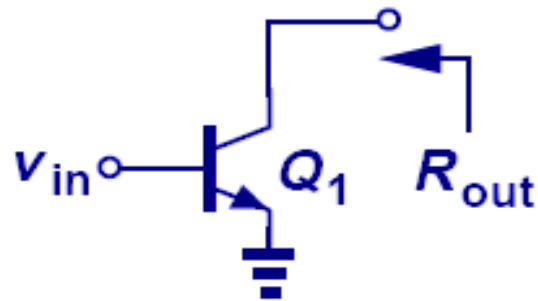
## Example 5.3: Impedance at Collector

Calculate the impedance seen looking into the collector of  $Q_1$  in Fig. 5.5(a).

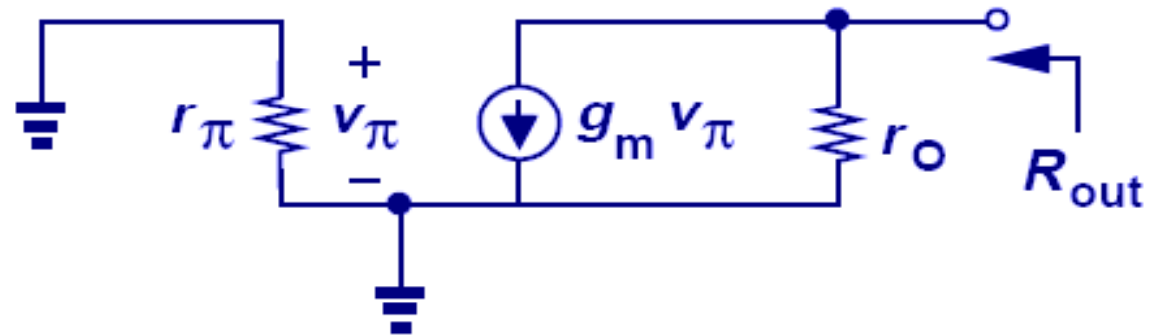
### Solution

Setting the input voltage to zero and using the small-signal model in Fig. 5.5(b), we note that  $v_\pi = 0$ ,  $g_m v_\pi = 0$ , and hence  $R_{out} = r_O$ .

- With Early effect, the impedance seen at the collector is equal to the intrinsic output impedance of the transistor (if emitter is grounded).



(a)



(b)



## Example 5.4: Impedance at Emitter

Calculate the impedance seen at the emitter of  $Q_1$  in Fig. 5.6(a). Neglect the Early effect for simplicity..

### Solution

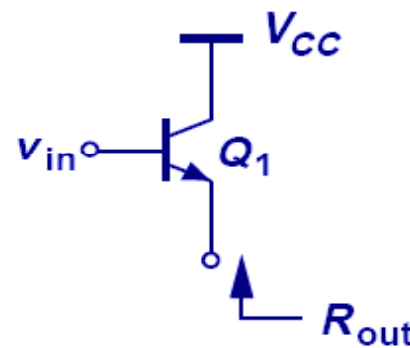
Setting the input voltage to zero and replacing  $V_{CC}$  with ac ground, we arrive at the small-signal circuit shown in Fig. 5.6(b). Interestingly  $v_\pi = -v_X$ , and

$$g_m v_\pi + \frac{v_\pi}{r_\pi} = -i_X.$$

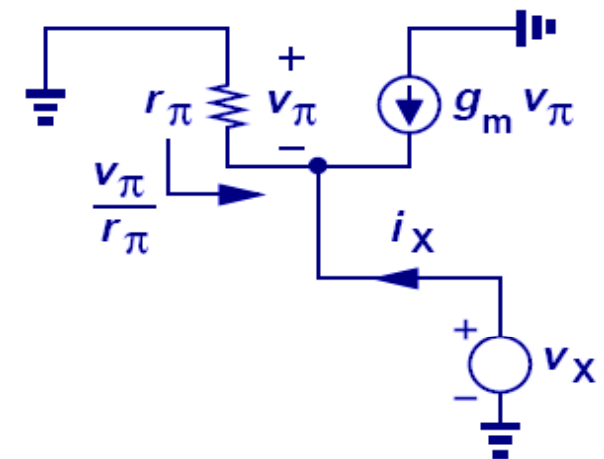
That is,

$$\frac{v_X}{i_X} = \frac{1}{g_m + \frac{1}{r_\pi}}.$$

Since  $r_\pi = \beta/g_m \gg 1/g_m$ , we have  $R_{out} \approx 1/g_m$ .



(a)

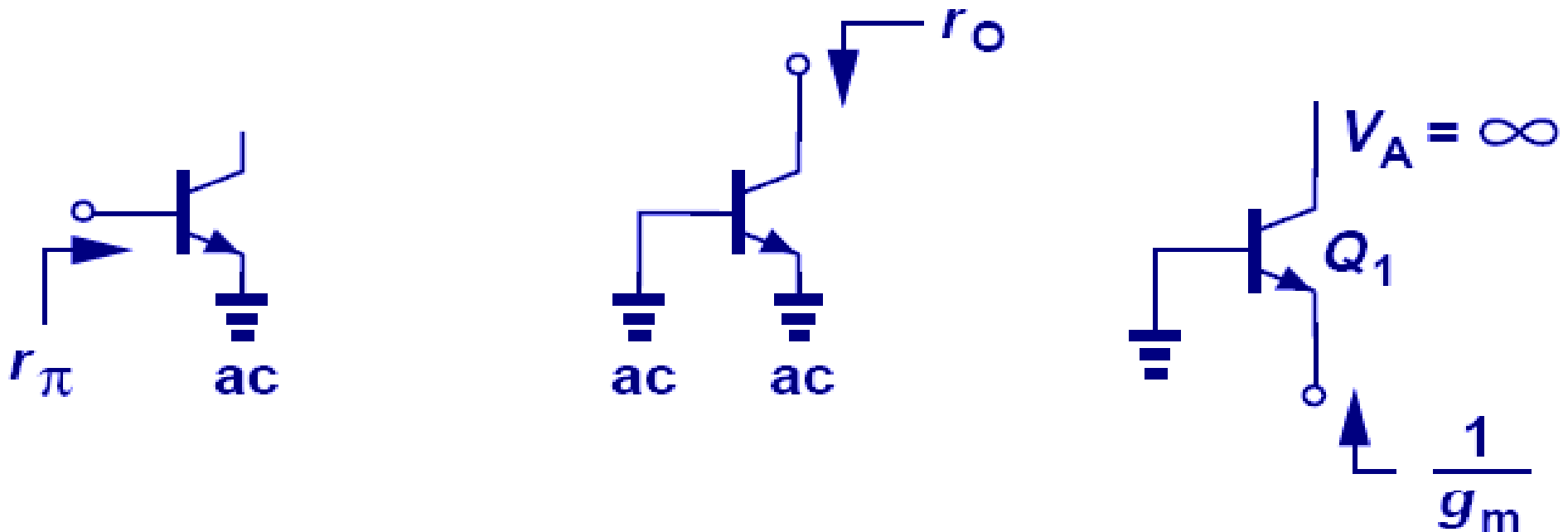


(b)

- The impedance seen at the emitter of a transistor is approximately equal to one over its transconductance,  $1/g_m$  (if the base is grounded).

# Three Master Rules of BJT Impedances

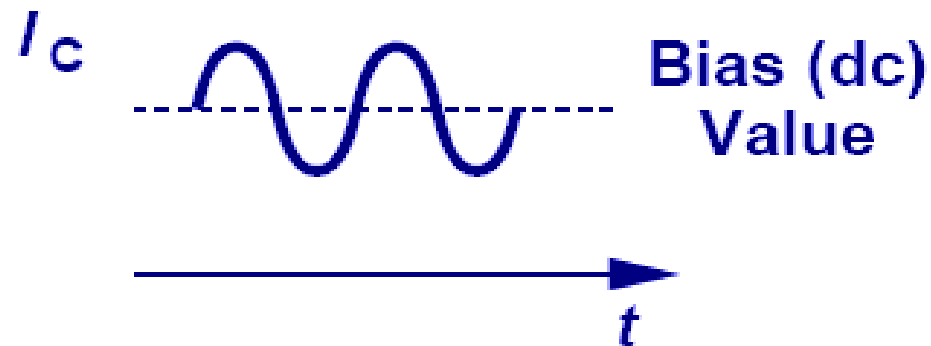
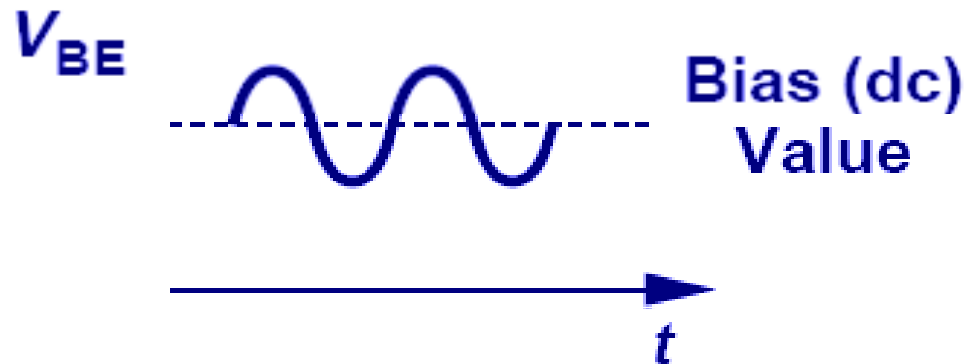
- Rule # 1: looking into the base, the impedance is  $r_{\pi}$  if emitter is (ac) grounded.
- Rule # 2: looking into the collector, the impedance is  $r_o$  if emitter is (ac) grounded.
- Rule # 3: looking into the emitter, the impedance is  $1/g_m$  if base is (ac) grounded and Early effect is neglected.



# Biasing of BJT

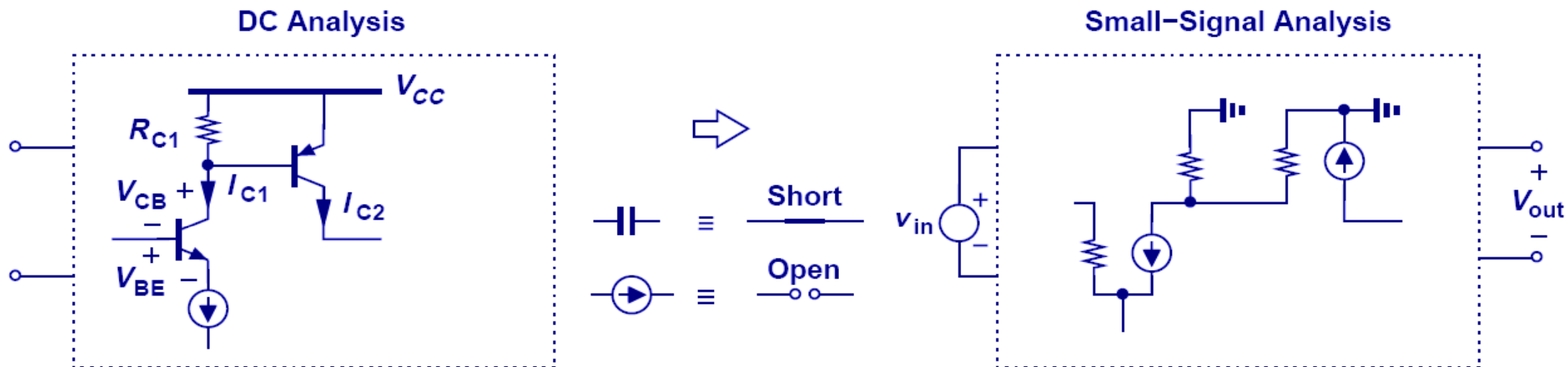
➤ Transistors and circuits must be biased because

- (1) transistors must operate in the active region; the base-emitter and base-collector junctions are forward- and reverse-biased, respectively.
- (2) their small-signal parameters depend on the bias conditions;  $g_m$ ,  $r_{\pi}$ ,  $r_o$  depends on  $I_C$ .



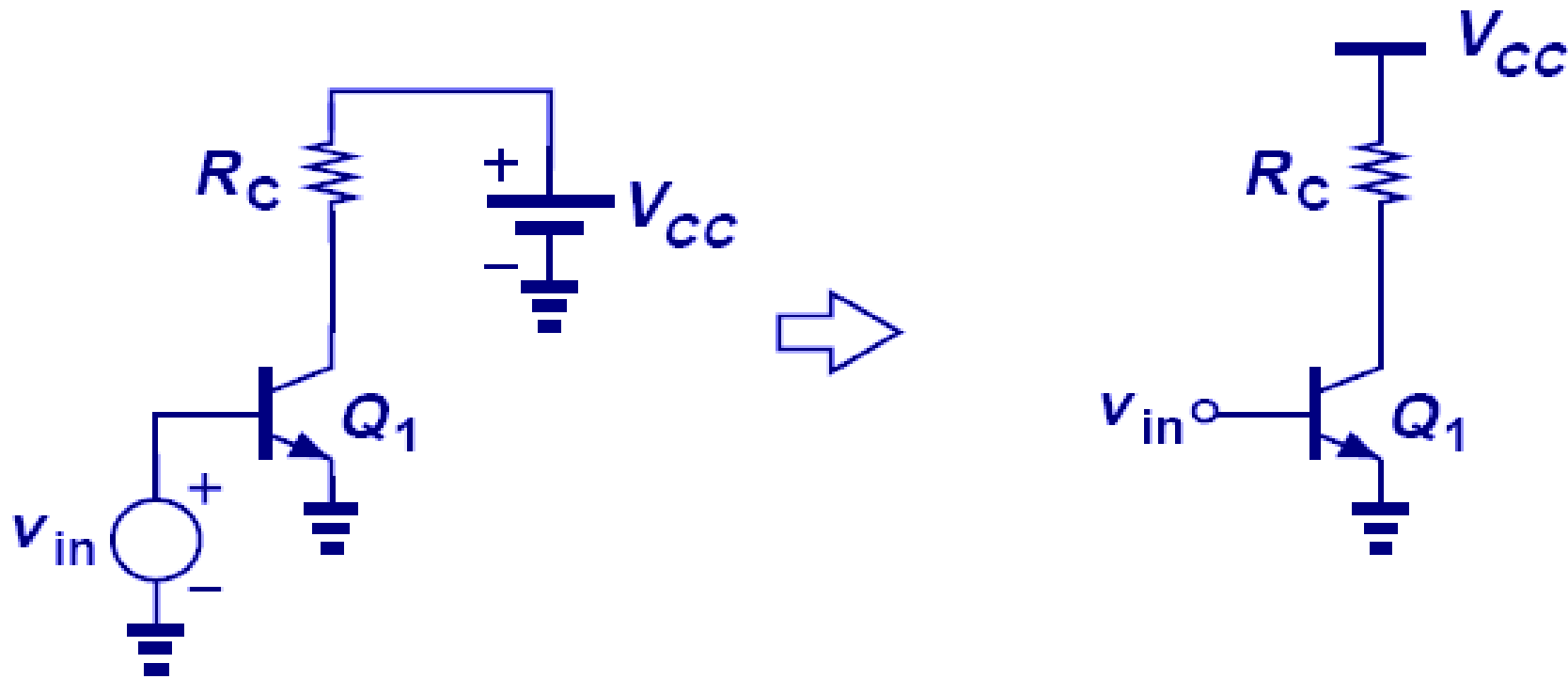
# DC Analysis vs. Small-Signal Analysis

- First, **DC analysis** is performed to determine **operating (quiescent) point** and obtain small-signal parameters.
- Second, sources are set to zero and small-signal model is used to perform **small-signal analysis**.
- A rule of thumb, we consider **10%** variation in the collector current as the upper bound for small-signal operation.



# Notation Simplification

- Hereafter, the battery that supplies power to the circuit is replaced by a horizontal bar labeled  $V_{CC}$ , and input signal is simplified as one node called  $V_{in}$ . The subscript  $CC$  indicates supply voltage feeding the collector.



## Example 5.5: bad biasing

A student familiar with bipolar devices constructs the circuit shown in Fig. 5.11 and attempts to amplify the signal produced by a microphone. If  $I_S = 6 \times 10^{-16}$  A and the peak value of the microphone signal is 20 mV, determine the peak value of the output signal.

### Solution

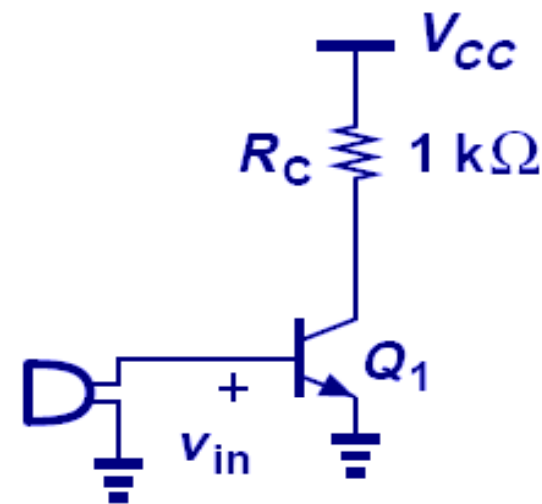
Unfortunately, the student has forgotten to bias the transistor. (The microphone does not produce a dc output). If  $V_{in}$  ( $= V_{BE}$ ) reaches 20 mV, then

$$\Delta I_C = I_S \exp \frac{\Delta V_{BE}}{V_T} = 1.29 \times 10^{-15} \text{ A.}$$

This change in the collector current yields a change in the output voltage equal to

$$R_C \Delta I_C = 1.29 \times 10^{-12} \text{ V.}$$

The circuit generates virtually no output because the bias current (in the absence of the microphone signal) is zero and so is the transconductance.



## Example 5.6: still bad biasing

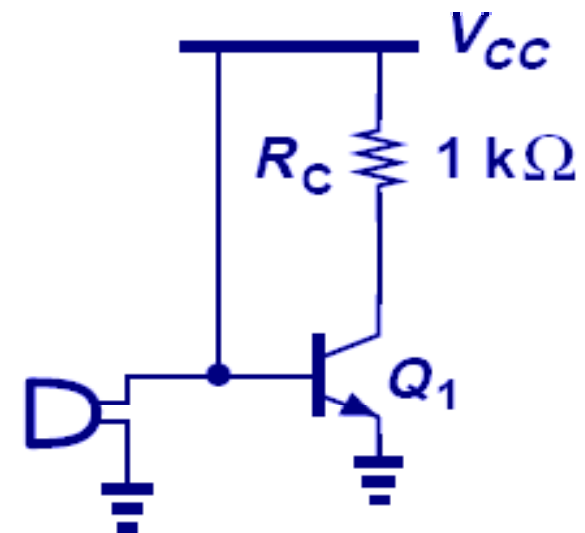
Having realized the bias problem, the student in Example 5.5 modifies the circuit as shown in Fig. 5.12, connecting the base to  $V_{CC}$  to allow dc biasing for the base-emitter junction. Explain why the student needs to learn more about biasing.

### Solution

The fundamental issue here is that the signal generated by the microphone is *shorted* to  $V_{CC}$ . Acting as an ideal voltage source,  $V_{CC}$  maintains the base voltage at a *constant* value, prohibiting any change introduced by the microphone. Since  $V_{BE}$  remains constant, so does  $V_{out}$ , leading to no amplification.

Another important issue relates to the value of  $V_{BE}$ : with  $V_{BE} = V_{CC} = 2.5\text{V}$ , enormous currents flow into the transistor.

check the working region of the transistor



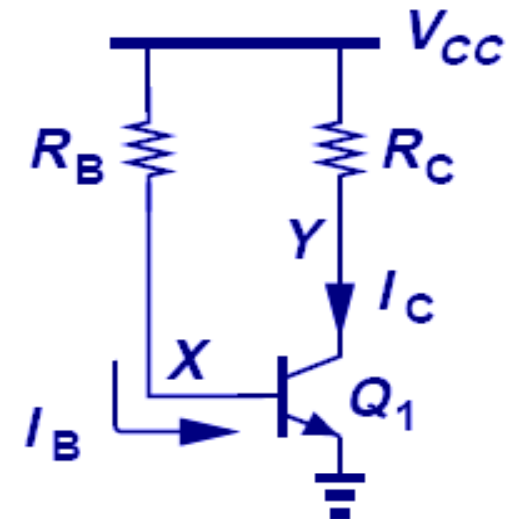
# Simple Biasing with Base Resistor

- Base is tied to  $V_{CC}$  through a relatively large resistor,  $R_B$ , so as to forward-bias the base-emitter junction.
- Assuming a constant value for  $V_{BE}$ , about 700 to 800 mV, one can solve for both  $I_B$  and  $I_C$  and determine the terminal voltages of the transistor.

$$R_B I_B + V_{BE} = V_{CC} \quad \Rightarrow \quad I_B = \frac{V_{CC} - V_{BE}}{R_B}.$$

$$I_C = \beta \frac{V_{CC} - V_{BE}}{R_B},$$

$$V_{CE} = V_{CC} - R_C I_C = V_{CC} - \beta \frac{V_{CC} - V_{BE}}{R_B} R_C.$$



- To avoid saturation completely, the collector voltage must remain above the base voltage:

$$V_{CC} - \beta \frac{V_{CC} - V_{BE}}{R_B} R_C > V_{BE}.$$

- However, bias point is sensitive to  $\beta$  variations, rarely used in practice.



## Example 5.7

For the circuit shown in Fig. 5.14, determine the collector bias current. Assume  $\beta = 100$  and  $I_S = 10^{-17}$  A. Verify that  $Q_1$  operates in the forward active region.

### Solution

Since  $I_S$  is relatively small, we surmise that the base-emitter voltage required to carry typical current level is relatively large. Thus, we use  $V_{BE} = 800$  mV as an initial guess and write Eq. (5.14) as

$$I_B = \frac{V_{CC} - V_{BE}}{R_B} \approx 17 \mu\text{A}.$$

It follows that  $I_C = 1.7$  mA.

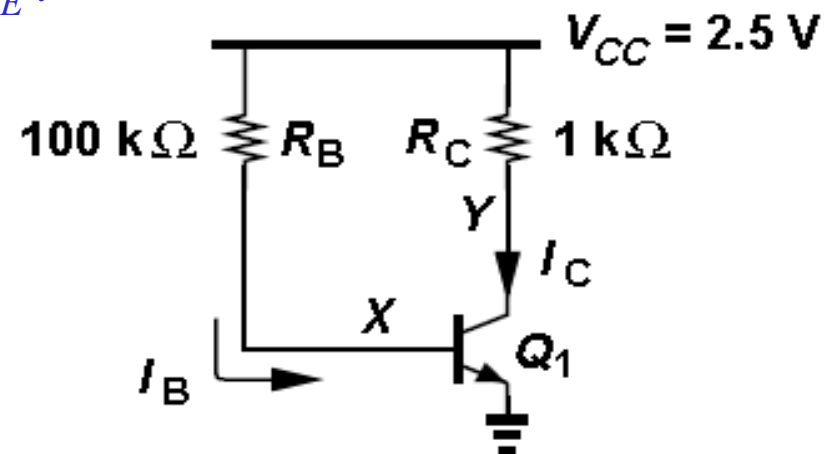
With this result for  $I_C$ , we calculate a new value for  $V_{BE}$ :

$$V_{BE} = V_T \ln \frac{I_C}{I_S} = 852 \text{ mV},$$

and iterate to obtain more accurate results. That is,

$$I_B = \frac{V_{CC} - V_{BE}}{R_B} = 16.5 \mu\text{A}$$

and hence  $I_C = 1.65$  mA



## Example 5.7 (cnt'd)

Since the new value of  $I_C$  is quite close to initial guess, we consider  $I_C = 1.65$  mA accurate enough and iterate no more.

We have

$$V_{CE} = V_{CC} - R_C I_C = 0.85\text{V},$$

a value nearly equal to  $V_{BE}$ . The transistor therefore operates near the edge of active and saturation modes.

➤ The simple biasing is rarely used in practice due to:

First, the  $V_{BE}$  “uncertainty” becomes more severe at low  $V_{CC}$  because  $V_{CC} - V_{BE}$  determines the base current. Thus, in low-voltage design, the bias is more sensitive to  $V_{BE}$  variations among transistors or with temperature.

Second,  $I_C$  heavily depends on  $\beta$ , that may change considerably. In the above example, if  $\beta$  increases from 100 to 120, then  $I_C$  rises to 1.98 mA and  $V_{CE}$  falls to 0.52, driving the transistor toward heavy saturation.

# Improved Biasing: Resistive Divider

- Using resistor divider to set  $V_{BE}$ , it is possible to produce an  $I_C$  that is relatively independent of  $\beta$  if base current is small.
- $R_1$  and  $R_2$  act as a voltage divider, providing a  $V_{BE}$  equal to

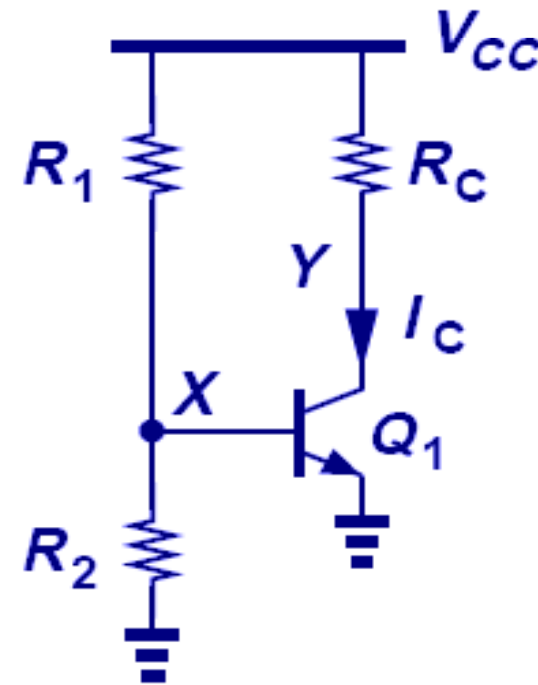
$$V_X = \frac{R_2}{R_1 + R_2} V_{CC},$$

Thus

$$I_C = I_S \exp\left(\frac{R_2}{R_1 + R_2} \cdot \frac{V_{CC}}{V_T}\right),$$

independent of  $\beta$ .

- Nonetheless, the design must ensure that the base current remains negligible.



## Example 5.8

Determine the collector current of  $Q_1$  in Fig. 5.16 if  $I_S = 10^{-17}$  A and  $\beta = 100$ . Verify that the base current is negligible and the transistor operates in the active mode.

### Solution

Neglecting the base current of  $Q_1$ , we have

$$V_X = \frac{R_2}{R_1 + R_2} V_{CC} = 800 \text{ mV}.$$

It follows that

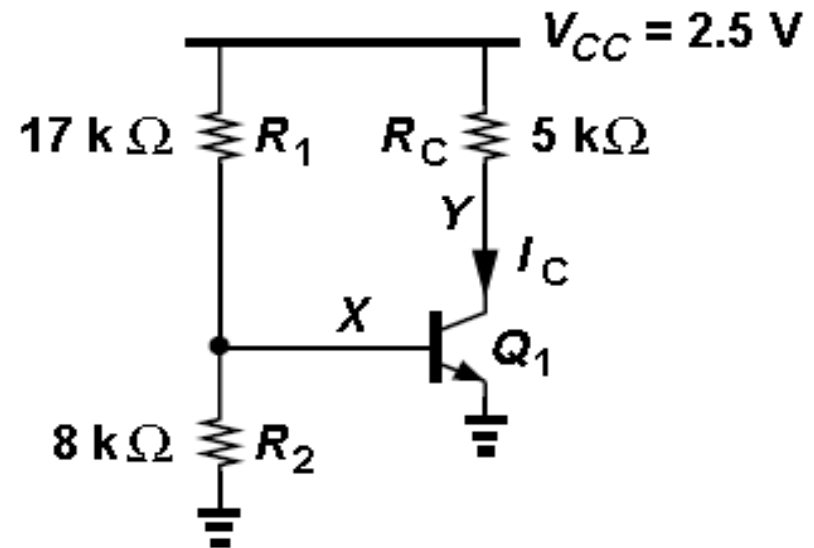
$$I_C = I_S \exp \frac{V_{BE}}{V_T} = 231 \mu\text{A}$$

and  $I_B = 2.31 \mu\text{A}$ .

Is the base current negligible? With which quantity should this value be compared?

Provided by the resistive divider,  $I_B$  must be negligible with respect to the current flowing through  $R_1$  and  $R_2$ :  $I_B \ll V_{CC}/(R_1 + R_2)$

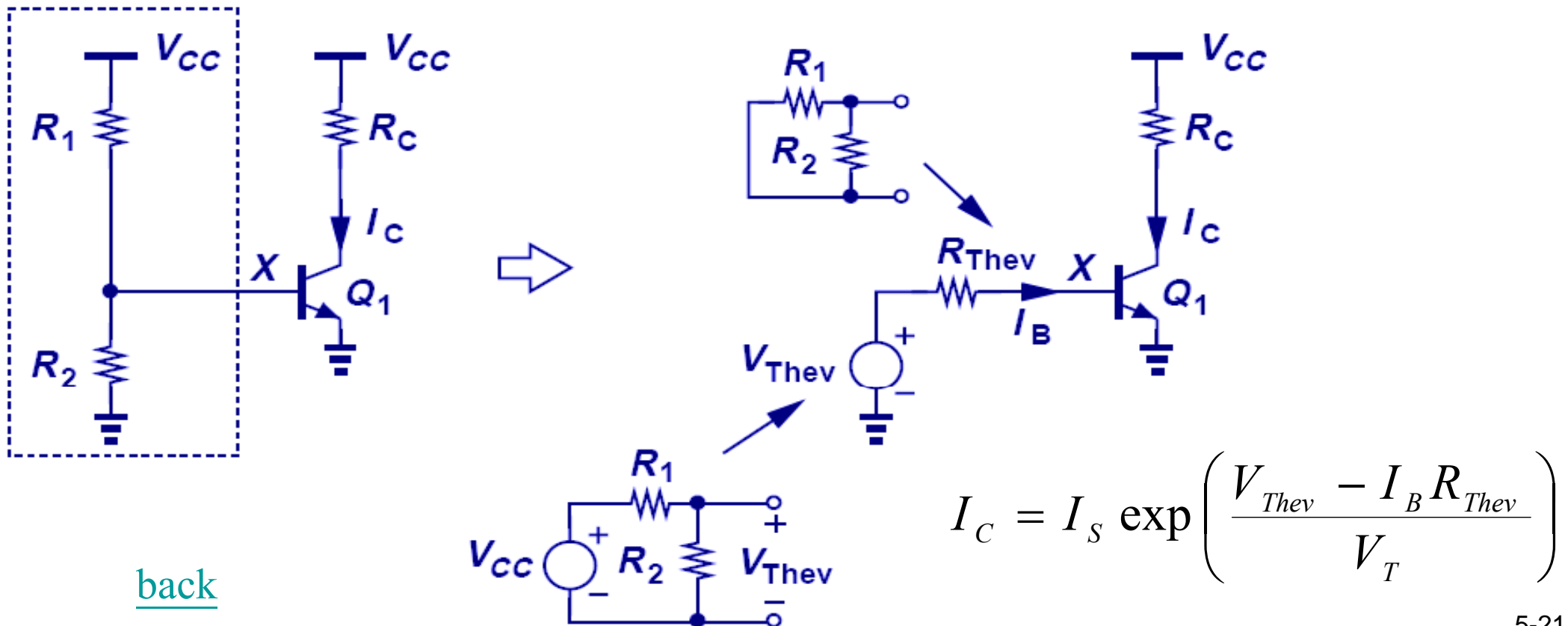
This condition indeed holds in this example because  $V_{CC}/(R_1 + R_2) = 100 \mu\text{A} \approx 43 I_B$ . We also note that  $V_{CE} = 1.345$  V, and hence  $Q_1$  operates in the active region.



# Accounting for Base Current

- With proper ratio of  $R_1$  and  $R_2$ ,  $I_C$  can be insensitive to  $\beta$ ; however, its exponential dependence on resistor deviations makes it less useful.
- If  $I_B$  is *not* negligible, replace the voltage divider with a Thevenin equivalent.

$$V_{Thev} = \frac{R_2}{R_1 + R_2} V_{CC} \cdot \quad R_{Thev} = R_1 \parallel R_2 \cdot \quad V_X = V_{Thev} - I_B R_{Thev}$$



[back](#)

## Example 5.9

Calculate the collector current of  $Q_1$  in Fig. 5.18(a). Assume  $\beta = 100$  and  $I_S = 10^{-17}$  A.

### Solution

Constructing the equivalent circuit shown in Fig. 5.18(b), we note that

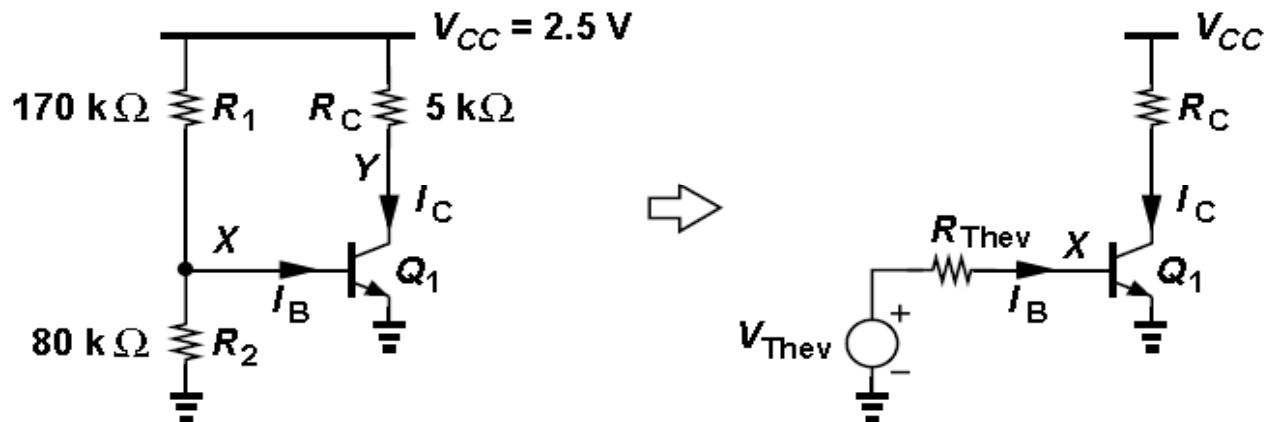
$$V_{Thev} = \frac{R_2}{R_1 + R_2} V_{CC} = 800 \text{ mV} \quad \text{and} \quad R_{Thev} = R_1 \parallel R_2 = 54.4 \text{ k}\Omega.$$

We begin the iteration with an initial guess  $V_{BE} = 750$  mV (because we know that the voltage drop across  $R_{Thev}$  makes  $V_{BE}$  less than  $V_{Thev}$ ), thereby arriving at the base current:


$$I_B = \frac{V_{Thev} - V_{BE}}{R_{Thev}} = 0.919 \mu\text{A}.$$

Thus,  $I_C = \beta I_B = 91.9 \mu\text{A}$  and

$$V_{BE} = V_T \ln \frac{I_C}{I_S} = 776 \text{ mV}.$$



It follows that  $I_B = 0.441 \mu\text{A}$  and hence  $I_C = 44.1 \mu\text{A}$ , still a large fluctuation with respect to the first value from above. Continuing the iteration, we obtain  $V_{BE} = 757$  mV,  $I_B = 0.79 \mu\text{A}$  and  $I_C = 79.0 \mu\text{A}$ . After many iterations,  $V_{BE} \approx 766$  mV and  $I_C = 63 \mu\text{A}$ .


- 
- Proper choice of  $R_1$  and  $R_2$  makes the bias relatively insensitive to  $\beta$
  - The exponential dependence of  $I_C$  upon the voltage,  $V_X$ , generated by the resistive divider still leads to substantial bias variations.
  - For example, if  $R_2$  is 1% higher than its nominal value, so is  $V_X$ , thus multiplying the collector current by  $\exp(0.01 V_{BE}/V_T) \approx 1.36$  (for  $V_{BE} = 800$  mV).
  - In other words, a 1% error in one resistor value introduces a 36% error in the collector current.
  - The circuit is therefore still of little practical value.

# Emitter Degeneration Biasing

- Resistor  $R_E$  appears in series with the emitter, thereby lowering the sensitivity to  $V_{BE}$ , i.e.,  $R_E$  helps to absorb the error in  $V_X$  so  $V_{BE}$  stays relatively constant.
- This bias technique is less sensitive to  $\beta$  ( $I_1 \gg I_B$ ) and  $V_{BE}$  variations.

$$V_X = V_{CC} R_2 / (R_1 + R_2)$$

$$V_P = V_X - V_{BE}$$



$$I_E = \frac{V_P}{R_E}$$

$$= \frac{1}{R_E} \left( V_{CC} \frac{R_2}{R_1 + R_2} - V_{BE} \right)$$

$$\approx I_C,$$

- (1)  $I_1 \gg I_B$  to lower sensitivity to  $\beta$ , and
- (2)  $V_{RE}$  must be large enough (100 mV to several hundred mV) to suppress the effect of uncertainties in  $V_X$  and  $V_{BE}$ .



## Example 5.10

Calculate the bias currents in the circuit of Fig. 5.20 and verify that  $Q_1$  operates in the forward active region. Assume  $\beta = 100$  and  $I_S = 5 \times 10^{-17}$  A. How much does the collector current change if  $R_2$  is 1% higher than its nominal value?

### Solution

We neglect the base current and write

$$V_X = V_{CC} \frac{R_2}{R_1 + R_2} = 900 \text{ mV}.$$

Using  $V_{BE} = 800$  mV as an initial guess, we have

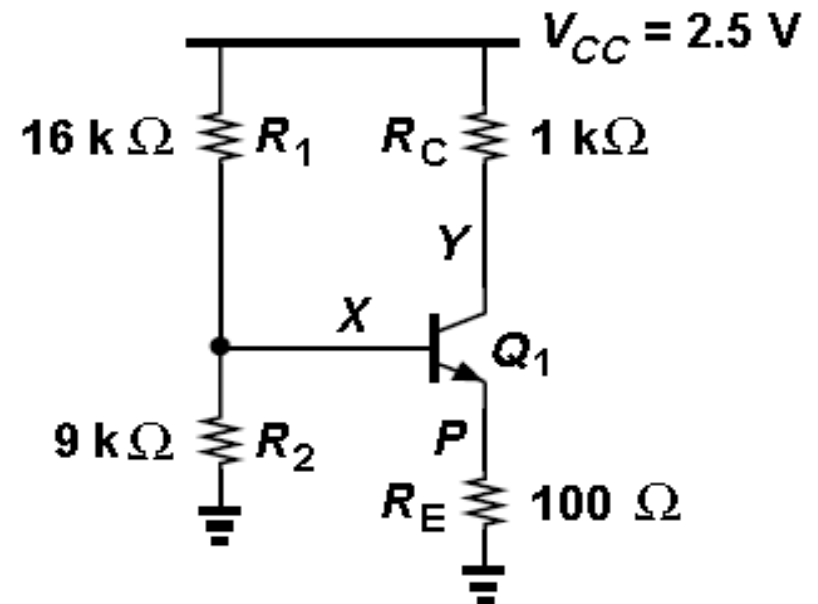
$$V_P = V_X - V_{BE} = 100 \text{ mV}.$$

and hence  $I_C \approx I_E \approx 1$  mA.

With this result, we must reexamine the assumption of  $V_{BE} = 800$  mV. Since

$$V_{BE} = V_T \ln \frac{I_C}{I_S} = 796 \text{ mV},$$

we conclude that the initial guess is reasonable. Furthermore, Eq. (5.57) suggests that a 4-mV error in  $V_{BE}$  leads to a 4% error in  $V_P$  and hence  $I_E$ , indicating a good approximation.



## Example 5.10 (cnt'd)

Let us now determine if  $Q_1$  operates in the active mode. The collector voltage is given by

$$V_Y = V_{CC} - I_C R_C = 1.5 \text{ V}.$$


With the base voltage at 0.9 V, the device is indeed in the active region.

Is the assumption of negligible base current valid? With  $I_C \approx 1 \text{ mA}$ ,  $I_B \approx 10 \text{ }\mu\text{A}$  whereas the current flowing through  $R_1$  and  $R_2$  is equal to  $100 \text{ }\mu\text{A}$ . The assumption is therefore reasonable. For greater accuracy, an iterative procedure similar to that in Example 5.9 can be followed.

If  $R_2$  is 1% higher than its nominal value, then (5.54) indicates that  $V_X$  rises to approximately 909 mV. We may assume that the 9-mV change directly appears across  $R_E$ , raising the emitter current by  $9\text{mV}/100\Omega = 90 \text{ }\mu\text{A}$ . From Eq. (5.56), we note that this assumption is equivalent to considering  $V_{BE}$  constant, which is reasonable because the emitter and collector currents have changed by only 9%.

# Design Procedure

1. Choose an  $I_C$  to provide the necessary small signal parameters,  $g_m$ ,  $r_\pi$ , etc.
2. Considering the variations of  $R_1$ ,  $R_2$ , and  $V_{BE}$ , choose a value for  $V_{RE} \approx I_C R_E$ .
3. With  $V_{RE}$  chosen, and  $V_{BE} = V_T \ln(I_C/I_S)$  calculated,  $V_X = V_{BE} + V_{RE}$  can be determined.
4. Select  $R_1$  and  $R_2$  to provide  $V_X$ .
5. Determined by small-signal gain requirements, the value of  $R_C$  is bounded by a maximum that places  $Q_1$  at the edge of saturation.



## Example 5.11

Design the circuit of Fig. 5.21 so as to provide a transconductance of  $1/52\Omega$  for  $Q_1$ . Assume  $V_{CC} = 2.5$  V,  $\beta = 100$ , and  $I_S = 5 \times 10^{-17}$  A. What is the maximum tolerable value of  $R_C$ ?

### Solution

A  $g_m$  of  $(52\Omega)^{-1}$  translates to a collector current of 0.5 mA and a  $V_{BE}$  of 778 mV. Assuming  $R_E I_C = 200$  mV, we obtain  $R_E = 400 \Omega$ . To establish  $V_x = V_{BE} + R_E I_C = 978$  mV, we must have

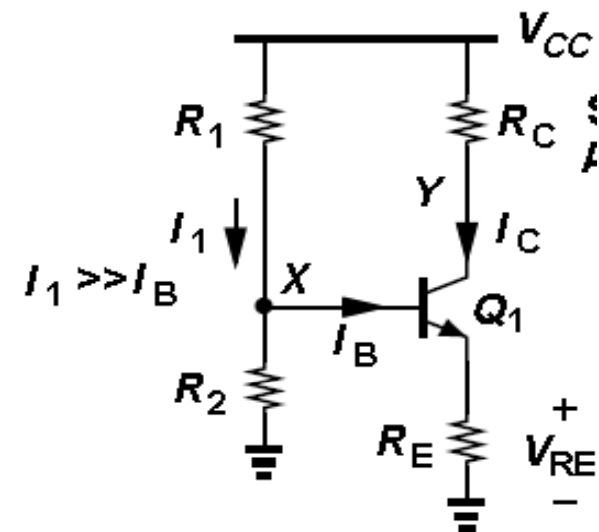
$$\frac{R_2}{R_1 + R_2} V_{CC} = V_{BE} + R_E I_C,$$

where the base current is neglected. For the base current  $I_B = 5 \mu\text{A}$  to be negligible,

$$\frac{V_{CC}}{R_1 + R_2} \gg I_B$$

e.g., by a factor of 10. Thus,  $R_1 + R_2 = 50$  k $\Omega$ , which in conjunction with (5.63) yields

$R_1 = 30.45$  k $\Omega$ , and  $R_2 = 19.55$  k $\Omega$ .



## Example 5.11 (cnt'd)

How large can  $R_C$  be? Since the collector voltage is equal to  $V_{CC} - R_C I_C$ , we pose the following constraint to ensure active mode operation:

$$V_{CC} - R_C I_C > V_X;$$

that is,

$$R_C I_C < 1.522\text{V}.$$

Consequently,

$$R_C < 3.044\text{k}\Omega.$$

If  $R_C$  exceeds this value, the collector voltage falls below the base voltage. As mentioned in Chapter 4, the transistor can tolerate soft saturation, i.e., up to about 400 mV of base-collector forward bias. Thus, in low-voltage applications, we may allow  $V_Y \approx V_X - 400$  mV and hence a greater value for  $R_C$ .

## Design Trade-Offs

- Specifically, an overly conservative design faces the following issues:
  - (1) if we wish  $I_1$  to be much much greater than  $I_B$ , then  $R_1 + R_2$  and hence  $R_1$  and  $R_2$  are quite small, leading to a low *input impedance*;
  - (2) if we choose a very large  $V_{RE}$ , then  $V_X (= V_{BE} + V_{RE})$  must be high, thereby limiting the minimum value of the collector voltage to avoid saturation.

## Example 5.12

Repeat Example 5.11 but assuming  $V_{RE} = 500$  mV and  $I_I \geq 100 I_B$ .

### Solution

The collector current and base-emitter voltage remain unchanged. The value of  $R_E$  is now given by  $500\text{mV}/0.5\text{mA} = 1$  k $\Omega$ . Also,  $V_X = V_{BE} + I_C R_E = 1.278$  V and (5.63) still holds.

We rewrite (5.64) as

$$\frac{V_{CC}}{R_1 + R_2} \geq 100 I_B,$$

obtaining  $R_1 + R_2 = 5$  k $\Omega$ . It follows that  $R_1 = 1.45$  k $\Omega$ , and  $R_2 = 3.55$  k $\Omega$ .

Since the base voltage has risen to 1.278 V, the collector voltage must exceed this value to avoid saturation, leading to

$$R_C < \frac{V_{CC} - V_X}{I_C} < 1.044\text{k}\Omega.$$

As seen in Section 5.3.1, the reduction in  $R_C$  translates to a lower voltage gain. Also, the much smaller values of  $R_1$  and  $R_2$  here than in Example 5.11 introduce a low input impedance, loading the preceding stage. We compute the exact input impedance of this circuit in Section 5.3.1.

# Self-Biasing Technique

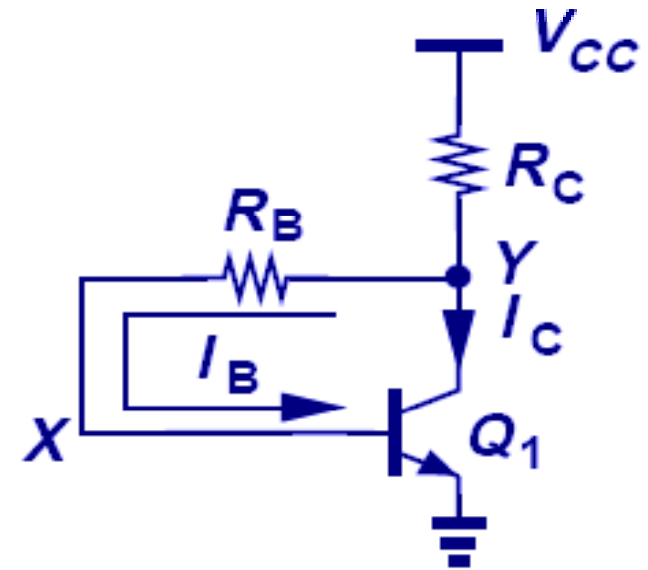
- This bias technique utilizes the collector voltage to provide the necessary  $V_x$  and  $I_B$ .
- One important characteristic of this technique is that collector has a higher potential than the base, thus guaranteeing active operation of the transistor.  $V_x = V_Y - I_B R_B$ .

- Assuming  $I_B \ll I_C$ , yield  $V_Y = V_{CC} - I_C R_C$

- Also

$$V_Y = R_B I_B + V_{BE} = \frac{R_B I_C}{\beta} + V_{BE}.$$

- Gives 
$$I_C = \frac{V_{CC} - V_{BE}}{R_C + \frac{R_B}{\beta}}.$$



- As usual, we begin with an initial guess for  $V_{BE}$ , compute  $I_C$ , and utilize  $V_{BE} = V_T \ln(I_C/I_S)$  to improve the accuracy of our calculations.



## Example 5.13

Determine the collector current and voltage of  $Q_1$  in Fig. 5.22 if  $R_C = 1 \text{ k}\Omega$ ,  $R_B = 10 \text{ k}\Omega$ ,  $V_{CC} = 2.5 \text{ V}$ ,  $I_S = 5 \times 10^{-17} \text{ A}$ , and  $\beta = 100$ . Repeat the calculations for  $R_C = 2 \text{ k}\Omega$ .

### Solution

Assuming  $V_{BE} = 0.8 \text{ V}$ , we have from (5.78):

$$I_C = 1.545 \text{ mA}$$

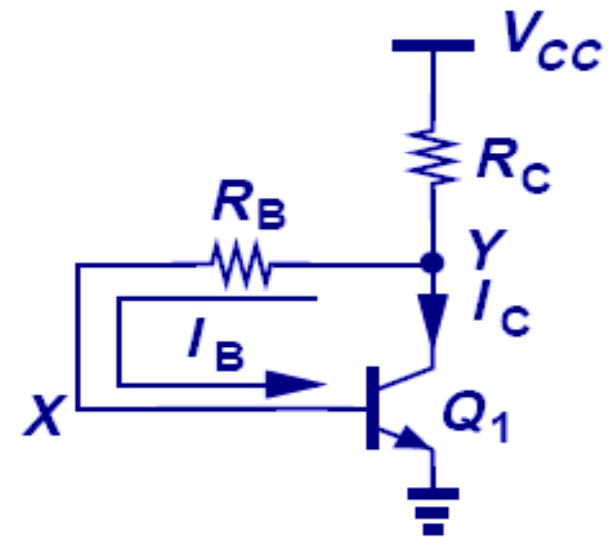
$$I_C = \frac{V_{CC} - V_{BE}}{R_C + \frac{R_B}{\beta}}$$

and hence  $V_{BE} = V_T \ln(I_C/I_S) = 807.6 \text{ mV}$ , concluding that the initial guess for  $V_{BE}$  and the value of  $I_C$  given by it are reasonably accurate. We also note that  $R_B I_B = 154.5 \text{ mV}$  and  $V_Y = R_B I_B + V_{BE} \approx 0.955 \text{ V}$ .

If  $R_C = 2 \text{ k}\Omega$ , then with  $V_{BE} = 0.8 \text{ V}$ , Eq. (5.78) gives

$$I_C = 0.810 \text{ mA}$$

To check the validity of the initial guess, we write  $V_{BE} = V_T \ln(I_C/I_S) = 791 \text{ mV}$ . Compared with  $V_{CC} - V_{BE}$  in the numerator of (5.78), the 9-mV error is negligible and the value of  $I_C$  in (5.80) is acceptable. Since  $R_B I_B = 81 \text{ mV}$ ,  $V_Y \approx 0.881 \text{ V}$ .



# Self-Biasing Design Guidelines

➤ Two important guidelines for the self-biased stage:

(1)  $V_{CC} - V_{BE}$  must be much greater than the uncertainties in the value of  $V_{BE}$ ;

(2)  $R_C$  must be much greater than  $R_B/\beta$  to lower sensitivity to  $\beta$ .

➤ In fact, if  $R_C \gg R_B/\beta$ , then 
$$I_C \approx \frac{V_{CC} - V_{BE}}{R_C},$$

## ➤ Design Procedure

With the required value of  $I_C$  known from small-signal considerations, choose  $R_C = 10 R_B/\beta$  and rewrite (5.78) as

$$I_C = \frac{V_{CC} - V_{BE}}{1.1R_C},$$

That is,

$$R_C = \frac{V_{CC} - V_{BE}}{1.1I_C} \quad R_B = \frac{\beta R_C}{10}.$$

The choice of  $R_B$  also depends on small-signal requirements and may deviate from this value, but it must remain substantially lower than  $\beta R_C$ .

## Example 5.14

Design the self-biased stage of Fig. 5.22 for  $g_m = 1/13\Omega$  and  $V_{CC} = 1.8$  V. Assume  $I_S = 5 \times 10^{-16}$  A and  $\beta = 100$ .

### Solution

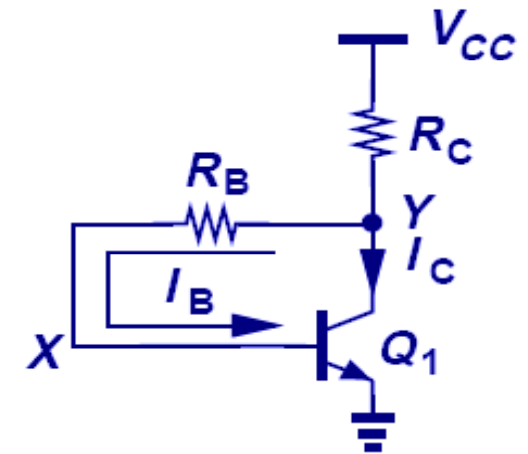
Since  $g_m = I_C/V_T = 1/13\Omega$ , we have  $I_C = 2$  mA,  $V_{BE} = 754$  mV, and

$$R_C \approx \frac{V_{CC} - V_{BE}}{1.1I_C} \approx 475\Omega.$$

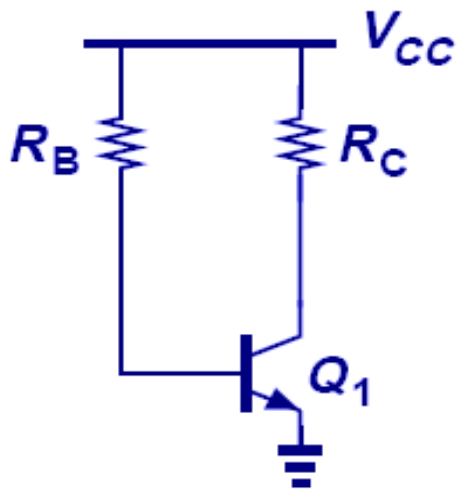
Also,

$$R_B = \frac{\beta R_C}{10} = 4.75\text{k}\Omega.$$

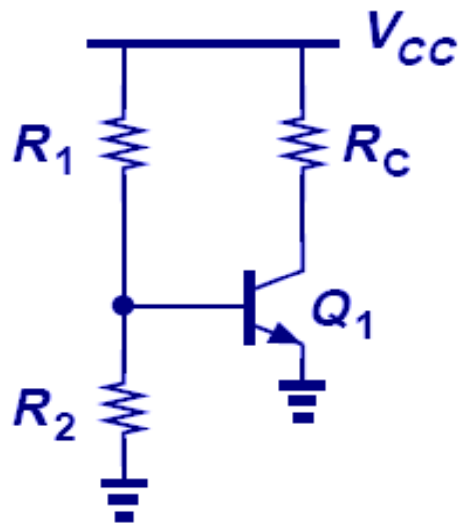
Note that  $R_B I_B = 95$  mV, yielding a collector voltage of  $754 + 95 = 849$  mV.



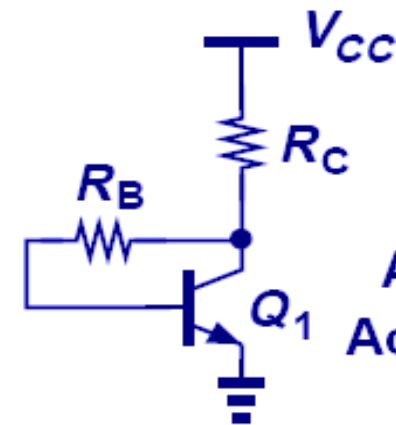
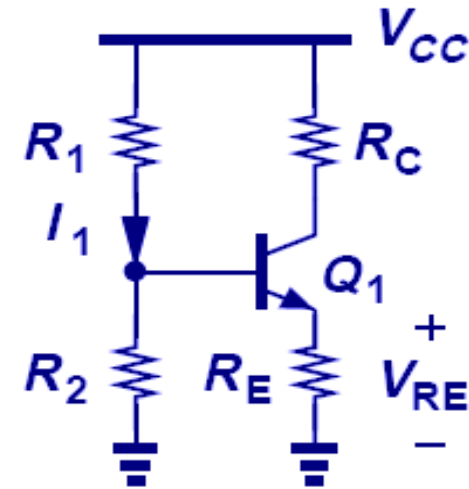
# Summary of Biasing Techniques



Sensitive  
to  $\beta$



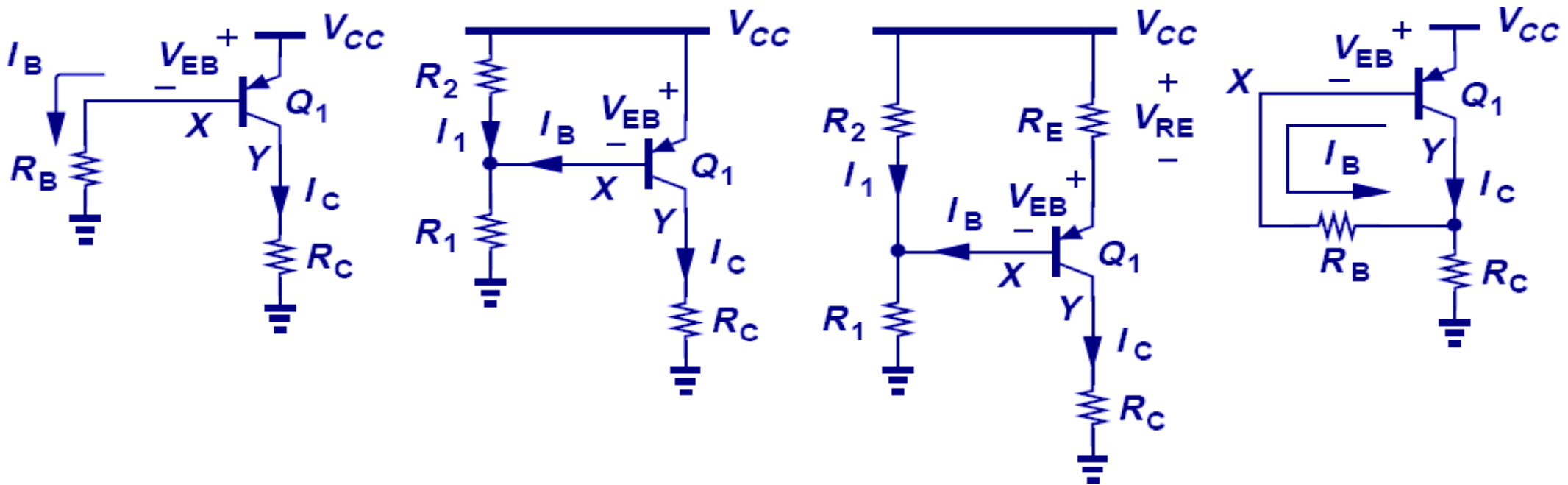
Sensitive  
to Resistor Error



Always in  
Active Mode

# PNP Biasing Techniques

- Same principles that apply to NPN biasing also apply to PNP biasing with only polarity modifications.





## Example 5.15 (cnt'd)

If  $R_C$  is increased,  $V_Y$  rises, thus approaching  $V_X (= V_{CC} - V_{EB})$  and bringing  $Q_I$  closer to saturation. The transistor enters saturation at  $V_Y = V_X$ , i.e.,

$$I_C R_{C,max} = V_{CC} - V_{EB}$$

and hence

$$R_{C,max} = \frac{V_{CC} - V_{EB}}{I_C} = \frac{R_B}{\beta}.$$

From another perspective, since  $V_X = I_B R_B$  and  $V_Y = I_C R_C$ , we have  $I_B R_B = I_C R_{C,max}$  as the condition for edge of saturation, obtaining  $R_B = \beta R_{C,max}$ .

## Example 5.16

Determine the collector current and voltage of  $Q_1$  in the circuit of Fig. 5.25(a).

### Solution

As a general case, we assume  $I_B$  is significant and construct the Thevenin equivalent of the voltage divider as depicted in Fig. 5.25(b):

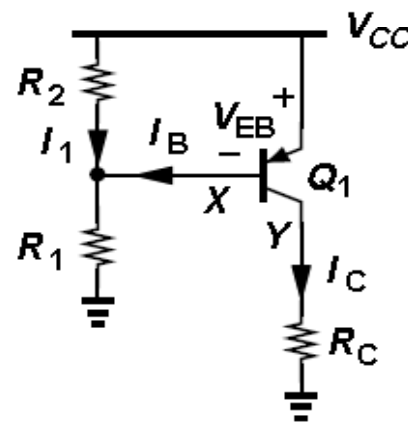
$$V_{Thev} = \frac{R_1}{R_1 + R_2} V_{CC} \quad R_{Thev} = R_1 \parallel R_2.$$

Adding the voltage drop across  $R_{Thev}$  and  $V_{EB}$  to  $V_{Thev}$  yields

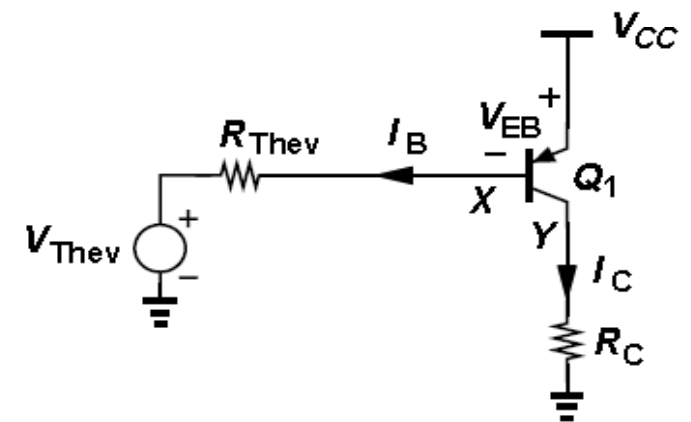
$$V_{Thev} + I_B R_{Thev} + V_{EB} = V_{CC};$$

that is,

$$I_B = \frac{V_{CC} - V_{Thev} - V_{EB}}{R_{Thev}} = \frac{\frac{R_2}{R_1 + R_2} V_{CC} - V_{EB}}{R_{Thev}}.$$



(a)



(b)



## Example 5.16 (cnt'd)

It follows that

$$I_C = \beta \frac{\frac{R_2}{R_1 + R_2} V_{CC} - V_{EB}}{R_{Thev}}.$$

As in Example 5.9, some iteration between  $I_C$  and  $V_{EB}$  may be necessary.

Equation (5.100) indicates that if  $I_B$  is significant, then the transistor bias heavily depends on  $\beta$ . On the other hand, if  $I_B \ll I_1$ , we equate the voltage drop across  $R_2$  to  $V_{EB}$ , thereby obtaining the collector current:

$$\frac{R_2}{R_1 + R_2} V_{CC} = V_{EB}$$
$$I_C = I_S \exp\left(\frac{R_2}{R_1 + R_2} \frac{V_{CC}}{V_T}\right).$$

Note that this result is identical to Eq. (5.30).

## Example 5.17

Assuming a negligible base current, calculate the collector current and voltage of  $Q_1$  in the circuit of Fig. 5.26. What is the maximum allowable value of  $R_C$  for  $Q_1$  to operate in the forward active region?

### Solution

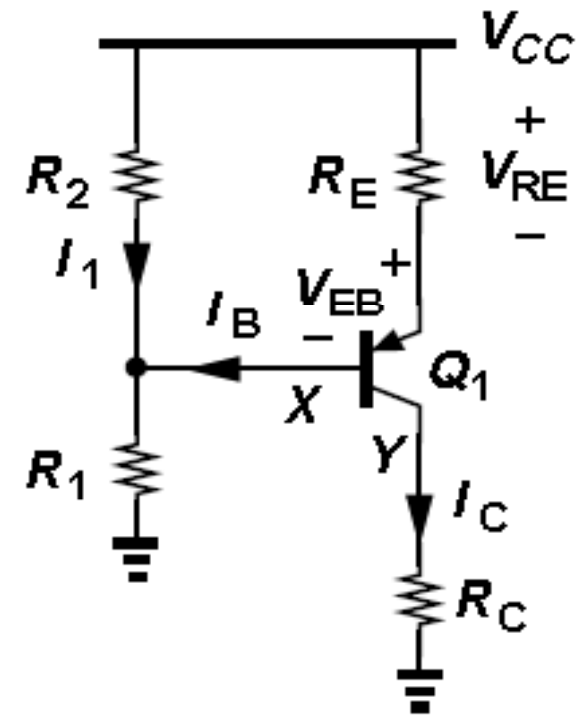
With  $I_B \ll I_1$ , we have  $V_X = V_{CC}R_1/(R_1+R_2)$ . Adding to  $V_X$  the emitter-base voltage and the drop across  $R_E$ , we obtain

$$V_X + V_{EB} + R_E I_E = V_{CC}$$

and hence

$$I_E = \frac{1}{R_E} \left( \frac{R_2}{R_1 + R_2} V_{CC} - V_{EB} \right).$$

Using  $I_C \approx I_E$ , we can compute a new value for  $V_{EB}$  and iterate if necessary. Also, with  $I_B = I_C/\beta$ , we can verify the assumption  $I_B \ll I_1$ .



## Example 5.17 (cnt'd)

In arriving at (5.104), we have written a KVL from  $V_{CC}$  to ground, Eq. (5.103). But a more straightforward approach is to recognize that the voltage drop across  $R_2$  is equal to  $V_{EB} + I_E R_E$ , i.e.,

$$V_{CC} \frac{R_2}{R_1 + R_2} = V_{EB} + I_E R_E, \quad (105)$$

which yields the same result as in (5.104).

The maximum allowable value of  $R_C$  is obtained by equating the base and collector voltages:

$$V_{CC} \frac{R_1}{R_1 + R_2} = R_{C,max} I_C \quad (106)$$

$$\approx \frac{R_{C,max}}{R_E} \left( \frac{R_2}{R_1 + R_2} V_{CC} - V_{EB} \right). \quad (107)$$

It follows that

$$R_{C,max} = R_E V_{CC} \frac{R_1}{R_1 + R_2} \cdot \frac{1}{\frac{R_2}{R_1 + R_2} V_{CC} - V_{EB}}. \quad (108)$$

## Example 5.18

Determine the collector current and voltage of  $Q_1$  in the self-biased circuit of Fig. 5.27.

### Solution

We must write a KVL from  $V_{CC}$  through the emitter-base junction of  $Q_1$ ,  $R_B$ , and  $R_C$  to ground. Since  $\beta \gg 1$  and hence  $I_B \ll I_C$ ,  $R_C$  carries a current approximately equal to  $I_C$ , creating  $V_Y = I_C R_C$ . Moreover,  $V_X = I_B R_B + V_Y = I_B R_B + I_C R_C$ , yielding

$$V_{CC} = V_{EB} + V_X \quad (109)$$

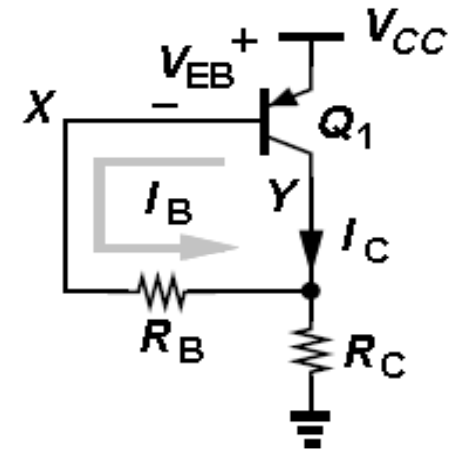
$$= V_{EB} + R_B I_B + I_C R_C \quad (110)$$

$$= V_{EB} + \left( \frac{R_B}{\beta} + R_C \right) I_C. \quad (111)$$

Thus,

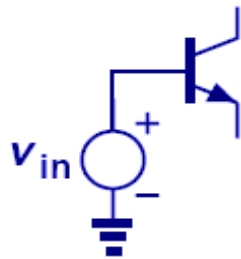
$$I_C = \frac{V_{CC} - V_{EB}}{\frac{R_B}{\beta} + R_C}, \quad (112)$$

a result similar to Eq. (5.78). As usual, we begin with a guess for  $V_{EB}$ , compute  $I_C$ , and determine a new value for  $V_{EB}$ , etc. Note that, since the base is *higher* than the collector voltage,  $Q_1$  always remains in the active mode.

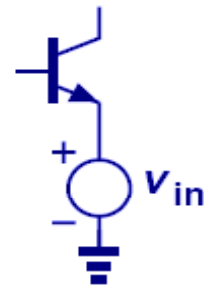


# Possible Bipolar Amplifier Topologies

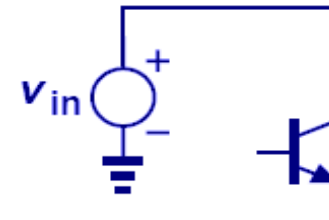
- Three possible ways to apply an input to an amplifier and three possible ways to sense its output.
- However, in reality only three of six input/output combinations are useful.



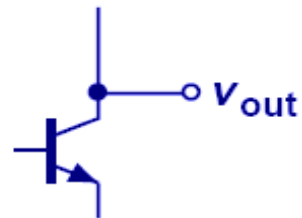
(a)



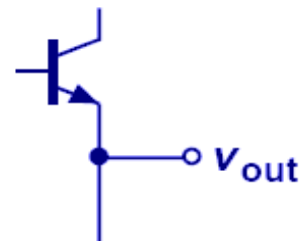
(b)



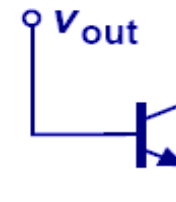
(c)



(d)



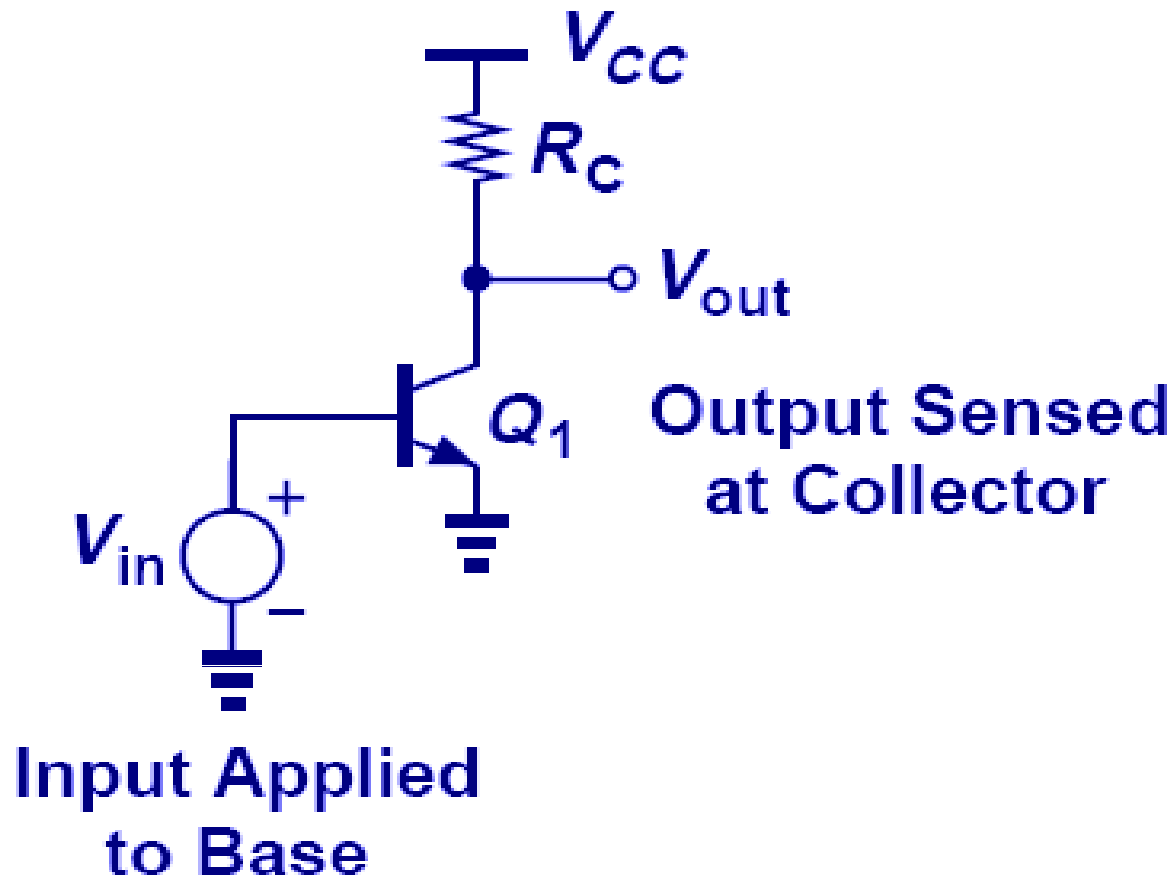
(e)



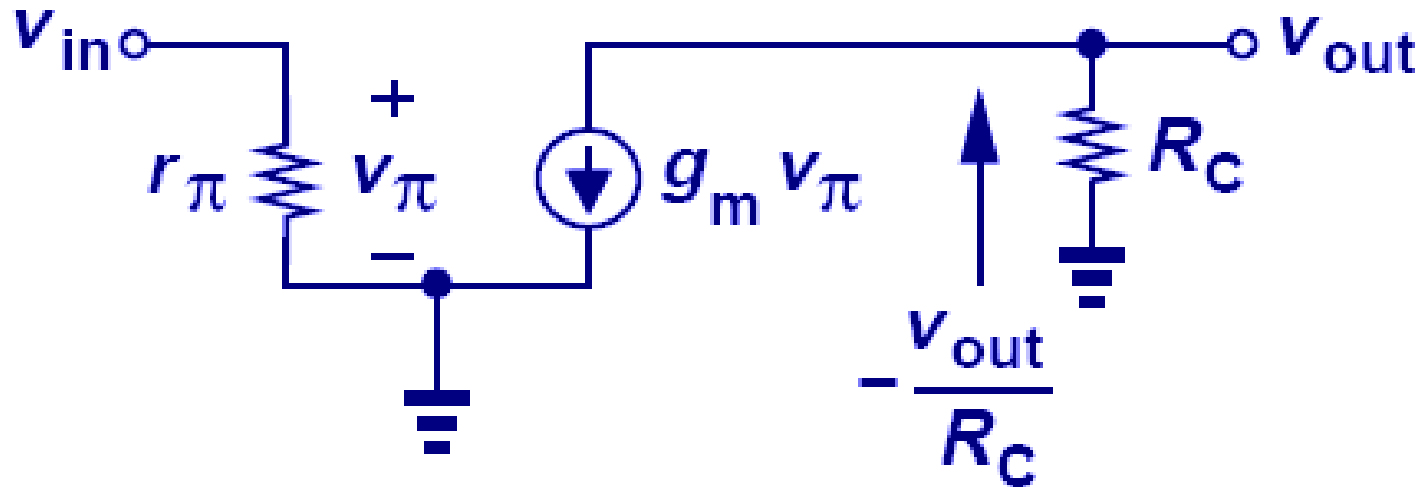
(f)

# Common-Emitter Topology

- Input is applied to the base and the output is sensed at the collector.
- The emitter terminal is grounded and hence appears *in common* to the input and output ports.



# Small Signal of CE Amplifier



$$A_v = \frac{v_{out}}{v_{in}}$$

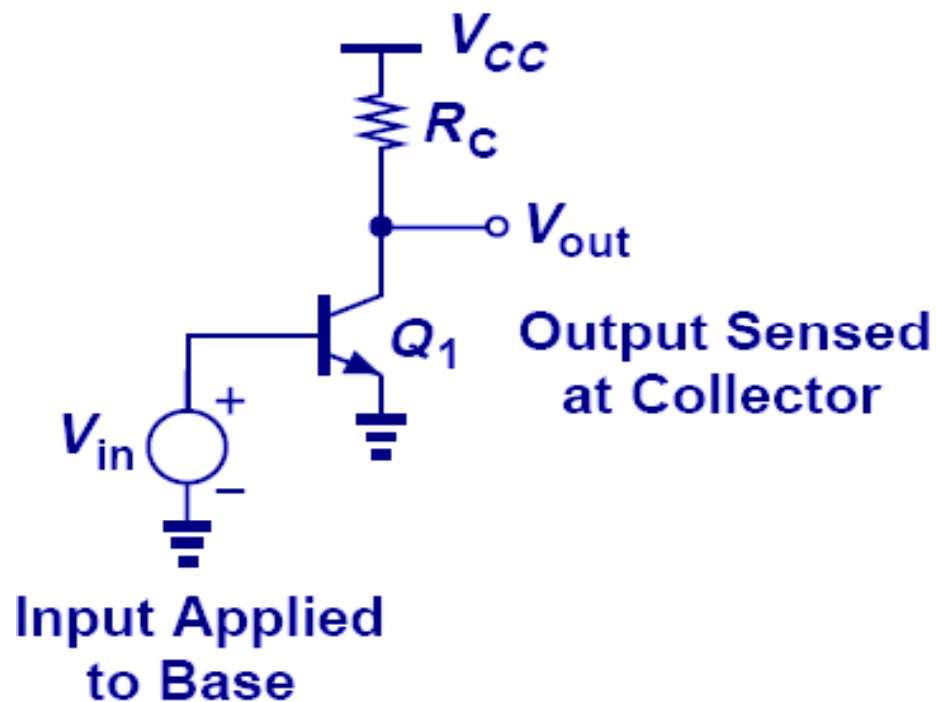
$$-\frac{v_{out}}{R_C} = g_m v_{\pi} = g_m v_{in}$$

$$A_v = -g_m R_C$$

- Neglect the Early effect now
- The small-signal gain,  $A_v$ , is negative because raising the base voltage and hence the collector current lowers  $v_{out}$ .
- $A_v$  is proportional to  $g_m$  (i.e., the collector bias current) and the collector resistor,  $R_C$ .

## Limitation on CE Voltage Gain

- Since  $g_m$  can be written as  $I_C/V_T$ , the CE voltage gain can be written as the ratio of  $V_{RC}$  and  $V_T$ .
- $V_{RC}$  is the potential difference between  $V_{CC}$  and  $V_{CE}$ , and  $V_{CE}$  cannot go below  $V_{BE}$  in order for the transistor to be in active region.



$$|A_v| = \frac{I_C R_C}{V_T}$$

$$|A_v| = \frac{V_{RC}}{V_T}$$

$$|A_v| < \frac{V_{CC} - V_{BE}}{V_T}$$



## Example 5.19

Design a CE core with  $V_{CC} = 1.8$  V and a power budget,  $P$ , of 1 mW while achieving maximum voltage gain.

### Solution

Since  $P = I_C V_{CC} = 1$  mW, we have  $I_C = 0.556$  mA. The value of  $R_C$  that places  $Q_I$  at the edge of saturation is given by

$$V_{CC} - R_C I_C = V_{BE}, \quad (119)$$

which, along with  $V_{BE} \approx 800$  mV, yields

$$R_C \leq \frac{V_{CC} - V_{BE}}{I_C} = 1.8 \text{ k}\Omega \quad (120) \quad (121)$$

The voltage gain is therefore equal to

$$A_v = -g_m R_C = -38.5. \quad (122)(123)$$

$$A_v < (1.8 - 0.8)/26\text{m} = 38.5$$

Under this condition, an input signal drives the transistor into saturation. As illustrated in Fig. 5.31(a), a 2-mV<sub>pp</sub> input results in a 77-mV<sub>pp</sub> output, forward-biasing the base-collector junction for half of each cycle. Nevertheless, so long as  $Q_I$  remains in soft saturation ( $V_{BC} > 400$  mV), the circuit amplifies properly.

## Example 5.19 (cnt'd)

A more aggressive design may allow  $Q_1$  to operate in soft saturation, e.g.,  $V_{CE} \approx 400$  mV and hence

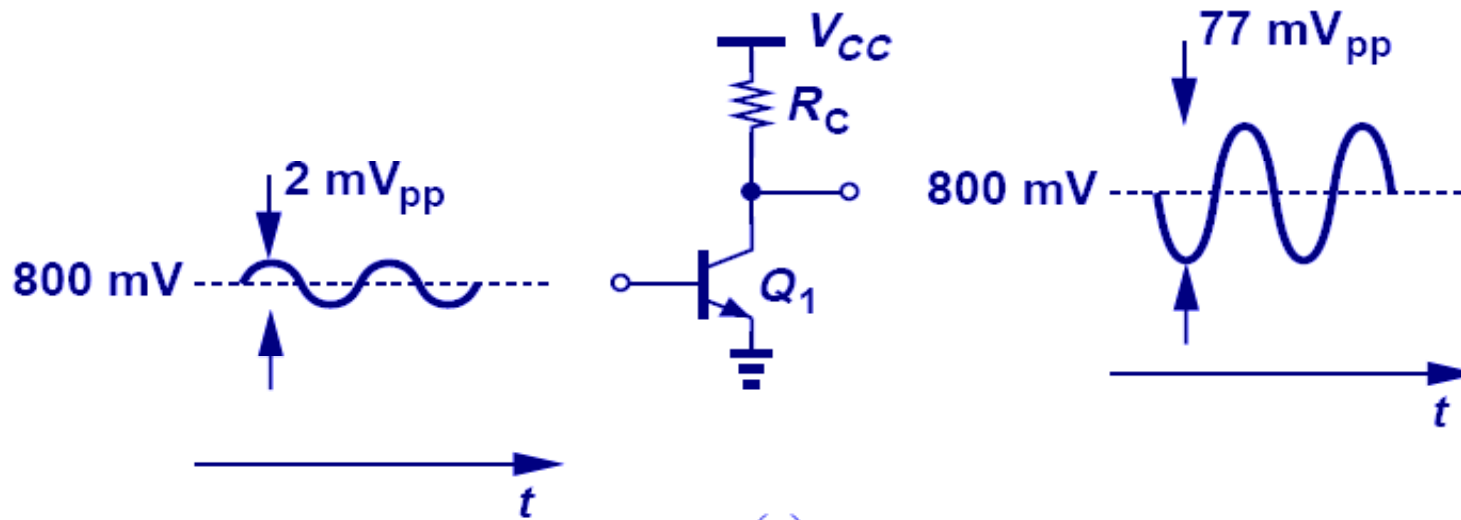
$$R_C \leq \frac{V_{CC} - 400\text{mV}}{I_C} = 2.52 \text{ k}\Omega \quad (124)(125)$$

In this case, the maximum voltage gain is given by

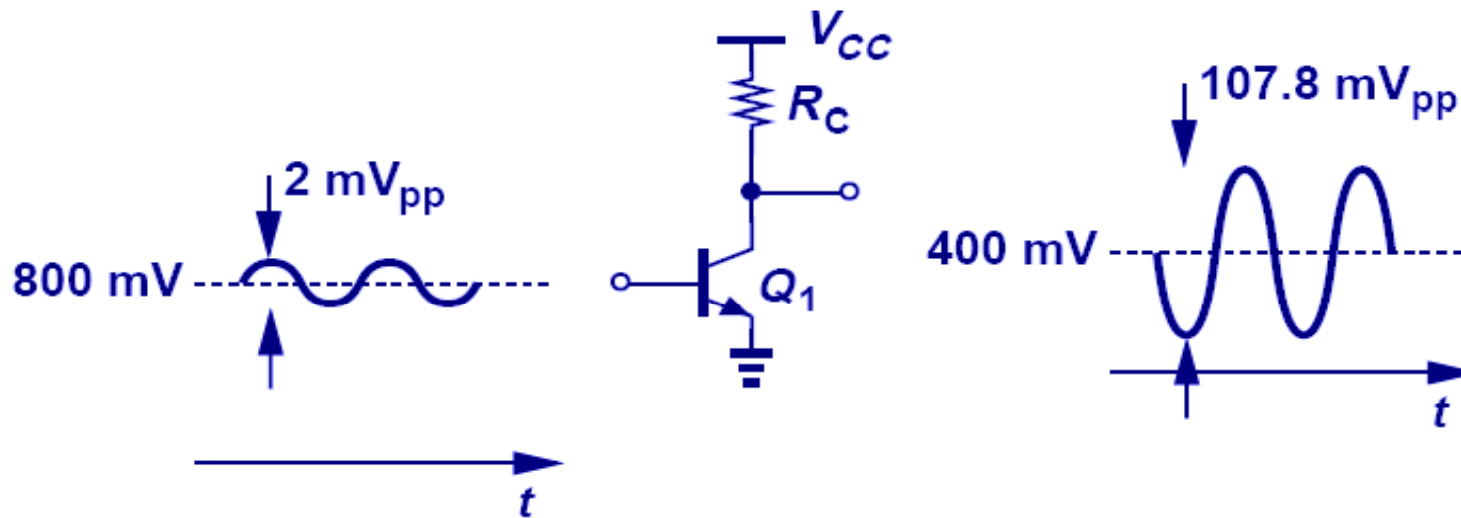
$$A_v = -53.9. \quad (126)$$

Of course, the circuit can now tolerate only very small voltage swings at the output. For example, a 2-mV<sub>pp</sub> input signal gives rise to a 107.8-mV<sub>pp</sub> output, driving  $Q_1$  into heavy saturation [Fig. 5.31(b)]. We say the circuit suffers from a trade-off between voltage gain and voltage “*headroom*.”

# Tradeoff between Voltage Gain and Headroom



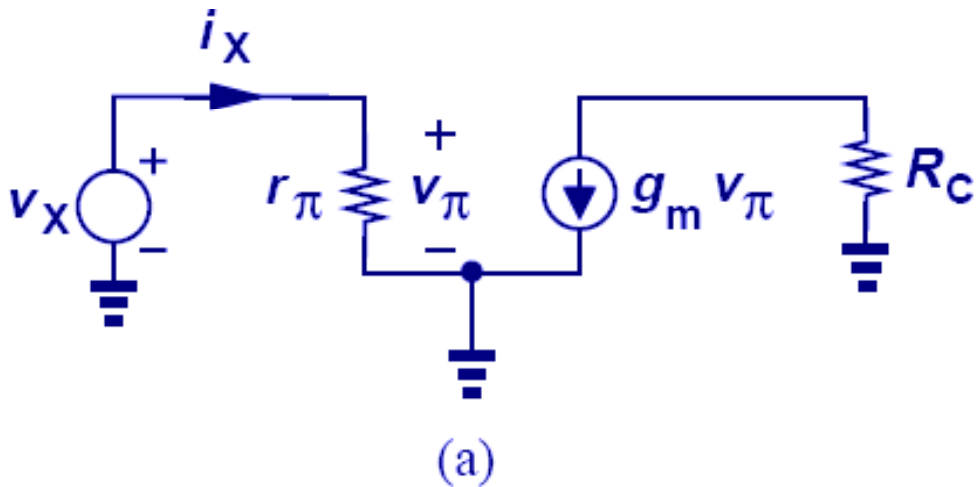
(a)



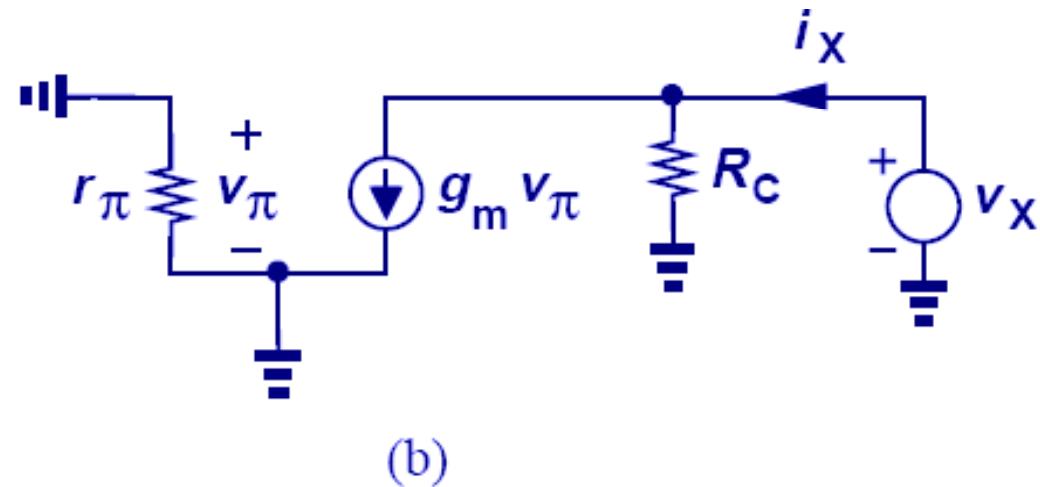
(b)

# I/O Impedances of CE Stage

- When measuring output impedance, the input port has to be grounded so that  $V_{in} = 0$ .



$$R_{in} = \frac{v_X}{i_X} = r_\pi = \frac{\beta}{g_m} = \frac{\beta V_T}{I_C}$$



$$R_{out} = \frac{v_X}{i_X} = R_C$$

## Example 5.20

A CE stage must achieve an input impedance of  $R_{in}$  and an output impedance of  $R_{out}$ . What is the voltage gain of the circuit?

### Solution

Since  $R_{in} = r_{\pi} = \beta/g_m$  and  $R_{out} = R_C$ , we have

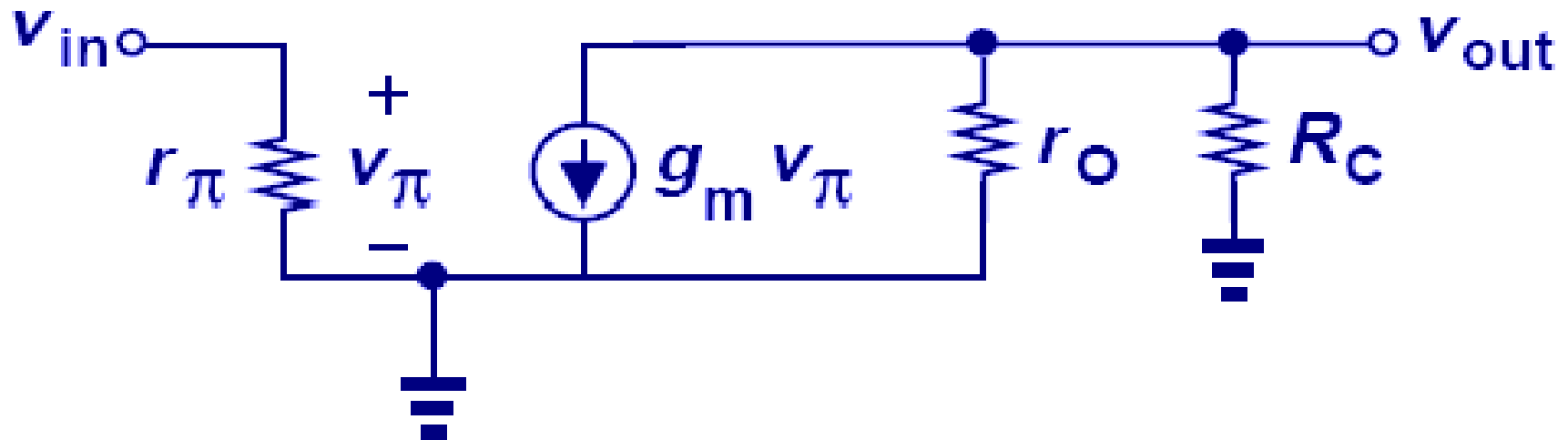
$$A_v = -g_m R_C \quad (131)$$

$$= -\beta \frac{R_{out}}{R_{in}}. \quad (132)$$

Interestingly, if the I/O impedances are specified, then the voltage gain is automatically set. We will develop other circuits in this book that avoid this “coupling” of design specifications.

## Inclusion of Early Effect

- Early effect will lower the gain of the CE amplifier, as  $r_o$  appears in parallel with  $R_C$ .
- The output impedance decreases.



$$A_v = -g_m (R_C \parallel r_o)$$

$$R_{out} = R_C \parallel r_o$$

## Example 5.21

The circuit of Fig. 5.29 is biased with a collector current of 1 mA and  $R_C = 1 \text{ k}\Omega$ . If  $\beta = 100$  and  $V_A = 10 \text{ V}$ , determine the small-signal voltage gain and the I/O impedances.

### Solution

We have

$$g_m = \frac{I_C}{V_T} = (26\Omega)^{-1}$$

and

$$r_o = \frac{V_A}{I_C} = 10\text{k}\Omega.$$

Thus,

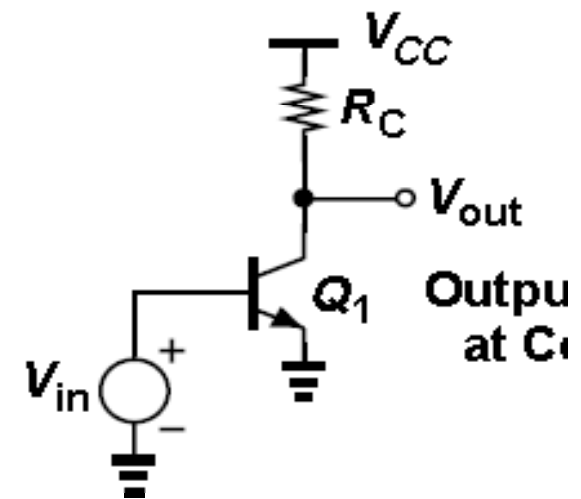
$$A_v = -g_m (R_C \parallel r_o) \approx 35.$$

(As a comparison, if  $V_A = \infty$ , then  $A_v \approx 38$ .) For the I/O impedances, we write

$$R_{in} = r_\pi = \frac{\beta}{g_m} = 2.6\text{k}\Omega$$

and

$$R_{out} = R_C \parallel r_o = 0.91\text{k}\Omega.$$



# Intrinsic Gain

- As  $R_C$  goes to infinity, the voltage gain reaches the product of  $g_m$  and  $r_O$ , which represents the maximum voltage gain the amplifier can have.
- The intrinsic gain is independent of the bias current.
- $V_A$  falls in the vicinity of 5 V, yielding a gain of nearly 200 (actually about 50).
- In this book, we assume  $g_m r_O \gg 1$  (and hence  $r_O \gg 1/g_m$ ) for all transistors.

$$A_v = -g_m r_O$$

$$|A_v| = \frac{V_A}{V_T}$$

$$g_m = I_C / V_T$$

$$r_O = V_A / I_C$$



# Current Gain

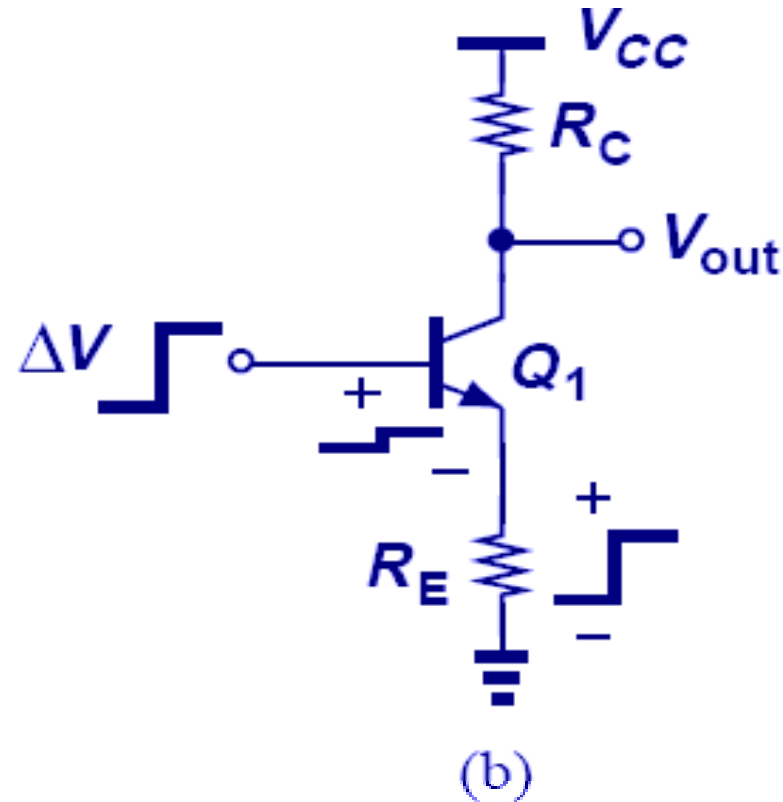
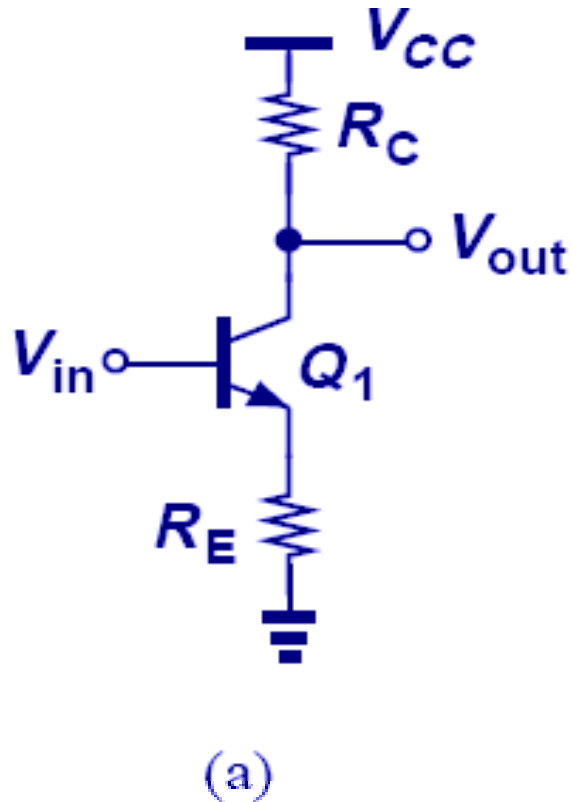
- Another parameter of the amplifier is the current gain, which is defined as the ratio of current delivered to the load to the current flowing into the input.
- For a CE stage, it is equal to  $\beta$ .

$$A_I = \frac{i_{out}}{i_{in}}$$

$$A_I|_{CE} = \beta$$

# CE with Emitter Degeneration

- By inserting a resistor in series with the emitter, we “*degenerate*” the CE stage.
- This topology will decrease the *gain* of the amplifier but improve other aspects, such as *linearity*, and *input impedance*.



# Small-Signal Model

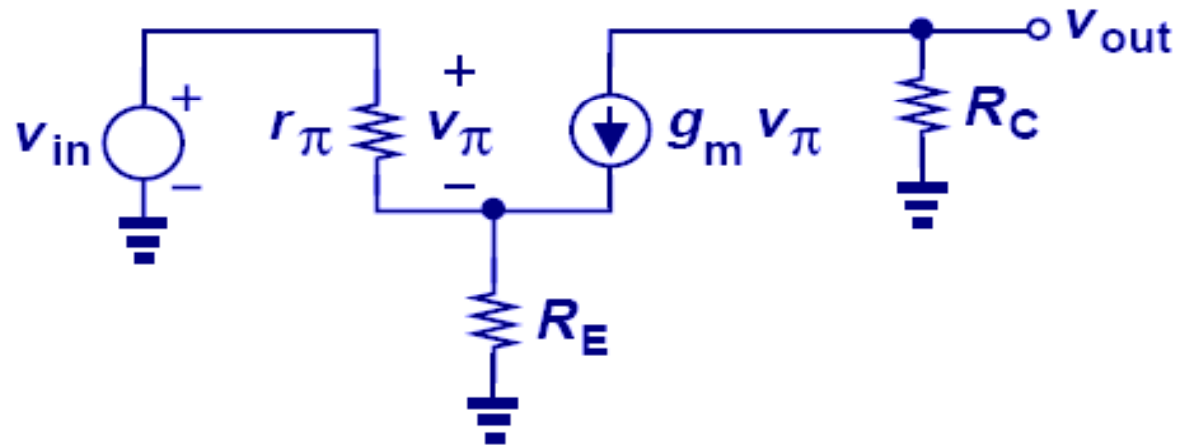
- the gain falls by a factor of  $1 + g_m R_E$
- Interestingly, this gain is equal to the total load resistance to ground divided by  $1/g_m$  plus the total resistance placed in series with the emitter.

$$g_m v_\pi = -\frac{v_{out}}{R_C}, \quad v_\pi = -\frac{v_{out}}{g_m R_C}.$$

$$v_{RE} = \left( \frac{v_\pi}{r_\pi} + g_m v_\pi \right) R_E.$$

$$v_{in} = v_\pi + v_{RE} = v_\pi \left[ 1 + \left( \frac{1}{r_\pi} + g_m \right) R_E \right].$$

$$\frac{v_{out}}{v_{in}} = -\frac{g_m R_C}{1 + \left( \frac{1}{r_\pi} + g_m \right) R_E}.$$



$$A_v = -\frac{g_m R_C}{1 + g_m R_E}$$

$$A_v = -\frac{R_C}{\frac{1}{g_m} + R_E}$$

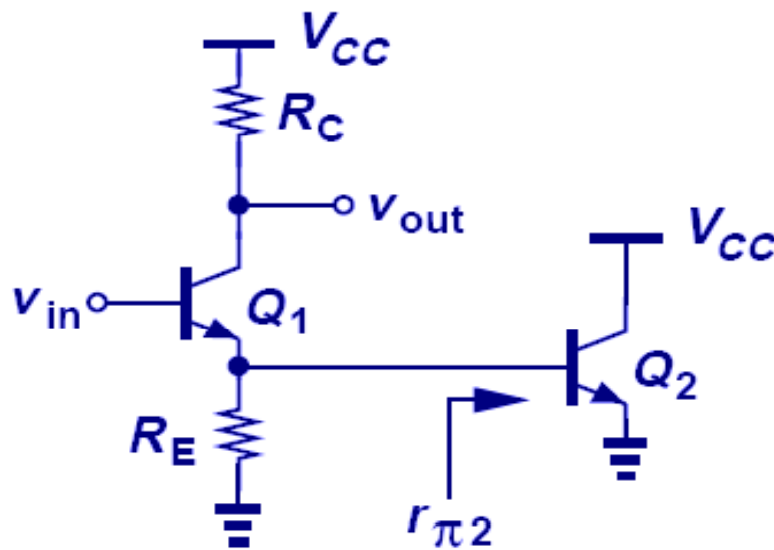
## Example 5.22

Determine the voltage gain of the stage shown in Fig. 5.37(a).

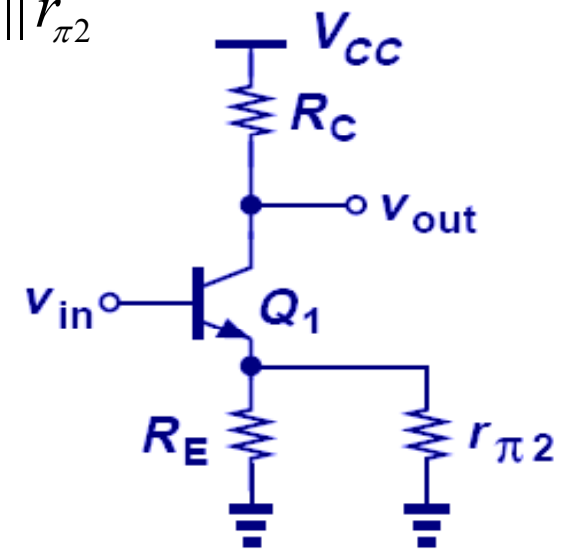
### Solution

We identify the circuit as a CE stage because the input is applied to the base of  $Q_1$  and the output is sensed at its collector. This transistor is degenerated by two devices:  $R_E$  and the base-emitter junction of  $Q_2$ . The latter exhibits an impedance of  $r_{\pi 2}$ , leading to the simplified model depicted in Fig. 5.37(b). The total resistance placed in series with the emitter is therefore equal to  $R_E \parallel r_{\pi 2}$ , yielding

$$A_v = -\frac{R_C}{\frac{1}{g_{m1}} + R_E \parallel r_{\pi 2}}$$



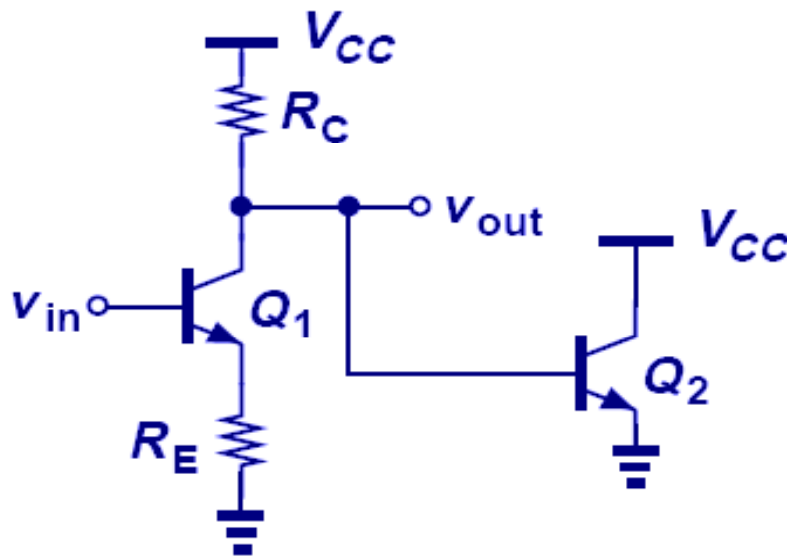
(a)



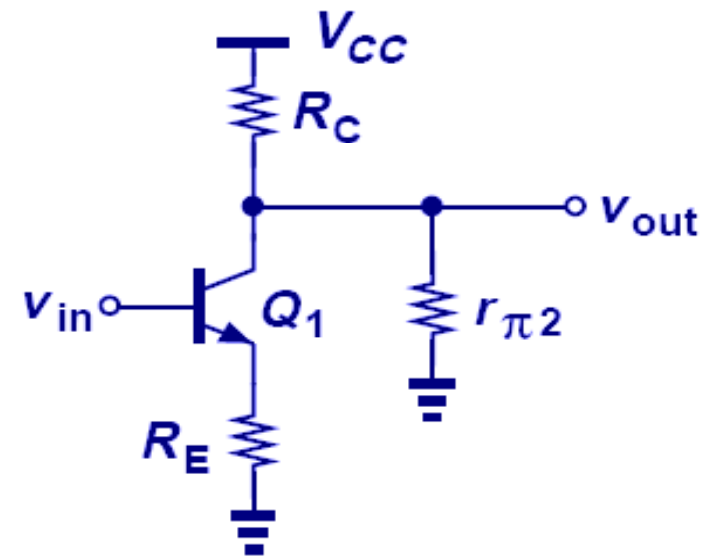
(b)

## Emitter Degeneration Example II

- In this example, the input impedance of  $Q_2$  can be combined in parallel with  $R_C$  to yield an equivalent collector impedance to ground.



(a)

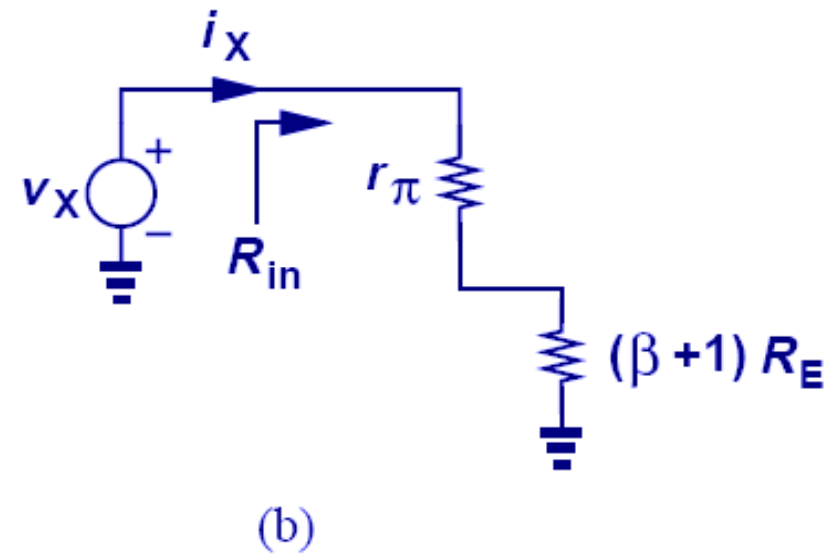
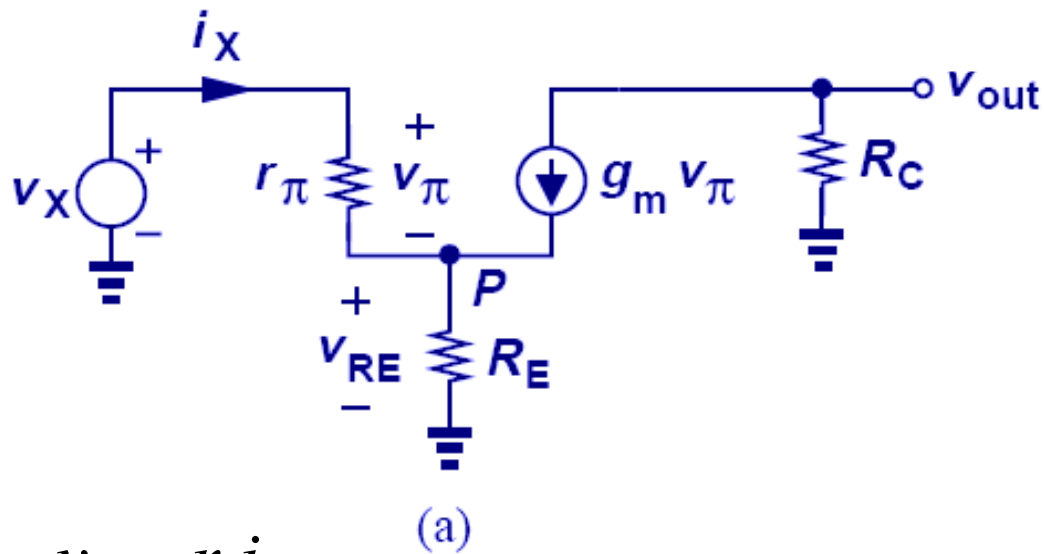


(b)

$$A_v = - \frac{R_C \parallel r_{\pi 2}}{\frac{1}{g_{m1}} + R_E}$$

# Input Impedance of Degenerated CE Stage

- With emitter degeneration, the input impedance is increased from  $r_\pi$  to  $r_\pi + (\beta+1)R_E$ ; a desirable effect.
- Any impedance tied between the emitter and ground is multiplied by  $(\beta + 1)$  when “seen from the base.”



$$v_\pi = r_\pi i_X$$

$$i_X + g_m r_\pi i_X = (1 + \beta) i_X$$

$$v_{RE} = R_E (1 + \beta) i_X$$

$$v_X = v_\pi + v_{RE}$$

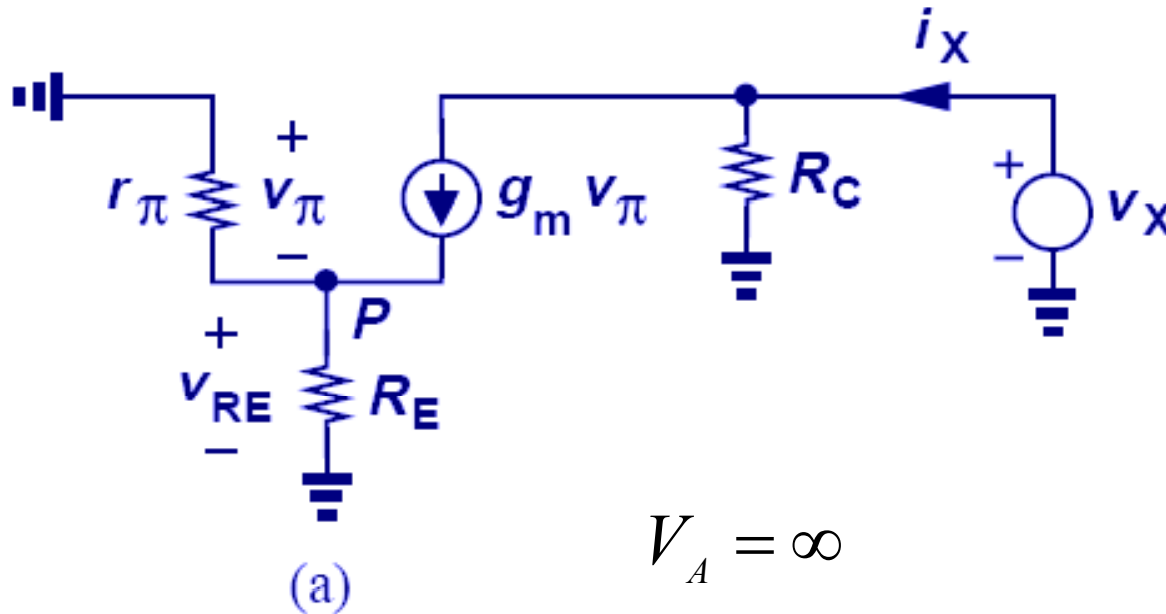
$$V_A = \infty$$

$$v_X = r_\pi i_X + R_E (1 + \beta) i_X$$

$$R_{in} = \frac{v_X}{i_X} = r_\pi + (\beta + 1) R_E$$

# Output Impedance of Degenerated CE Stage

- Emitter degeneration does not alter the output impedance in this case. (More on this later.)



$$V_A = \infty$$

$$v_{in} = 0 = v_{\pi} + \left( \frac{v_{\pi}}{r_{\pi}} + g_m v_{\pi} \right) R_E \Rightarrow v_{\pi} = 0$$

$$R_{out} = \frac{v_X}{i_X} = R_C$$

## Example 5.24

A CE stage is biased at a collector current of 1 mA. If the circuit provides a voltage gain of 20 with no emitter degeneration and 10 with degeneration, determine  $R_C$ ,  $R_E$ , and the I/O impedances. Assume  $\beta = 100$ .

### Solution

For  $A_v = 20$  in the absence of degeneration, we require  $g_m R_C = 20$ , which, together with  $g_m = I_C/V_T = (26\Omega)^{-1}$ , yields  $R_C = 520 \Omega$ .

Since degeneration lowers the gain by a factor of two,  $1 + g_m R_E = 2$ , i.e.,  $R_E = 1/g_m = 26\Omega$

The input impedance is given by

$$R_{in} = r_\pi + (\beta + 1)R_E = \frac{\beta}{g_m} + (\beta + 1)R_E \approx 2r_\pi$$

because  $\beta \gg 1$  and  $R_E = 1/g_m$  in this example. Thus,  $R_{in} = 5200 \Omega$ . Finally,

$$R_{out} = R_C = 520 \Omega$$



# Capacitor at Emitter

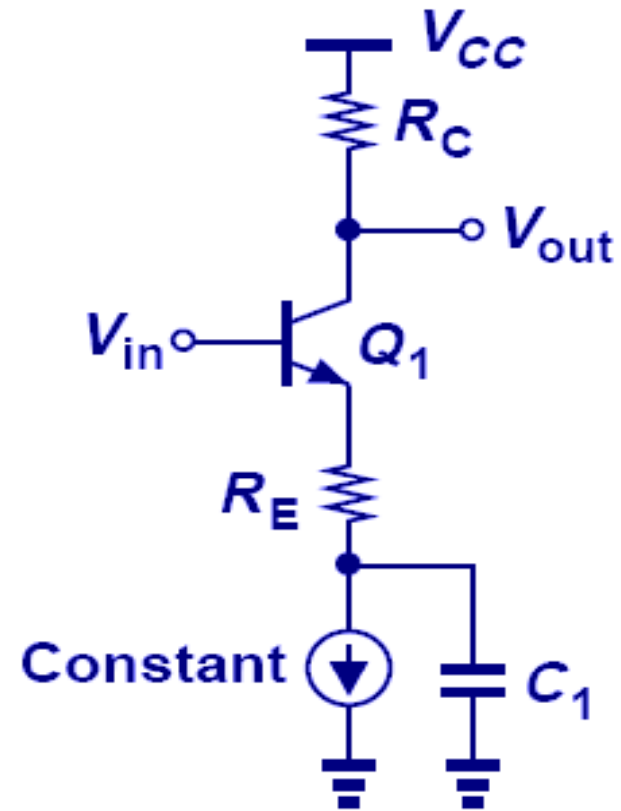
- At DC the capacitor is open and the current source biases the amplifier.
- For ac signals, the capacitor is short and the amplifier is degenerated by  $R_E$ .

## Example 5.25

Compute the voltage gain and I/O impedances of the circuit depicted in Fig. 5.41. Assume a very large value for  $C_1$ .

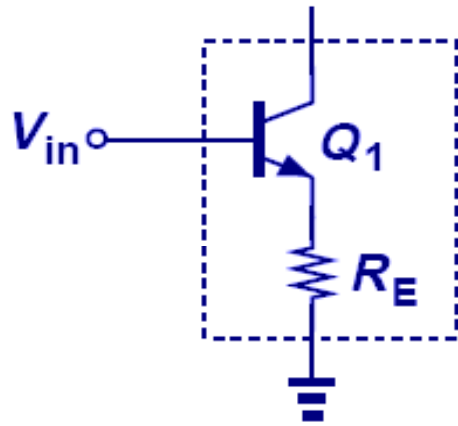
### Solution

If  $C_1$  is very large, it acts as a short circuit for the signal frequencies of interest. Also, the constant current source is replaced with an open circuit in the small-signal equivalent circuit. Thus, the stage reduces to that in Fig. 5.35(a) and Eqs. (5.157), (5.162), (5.165) apply.

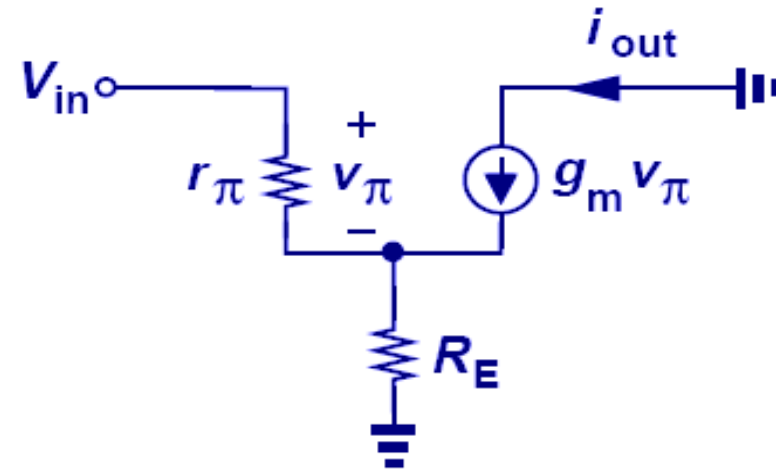


# Design CE Stage with Degeneration as a Black Box

- If  $g_m R_E$  is much greater than unity,  $G_m$  is more linear.



(a)



(b)

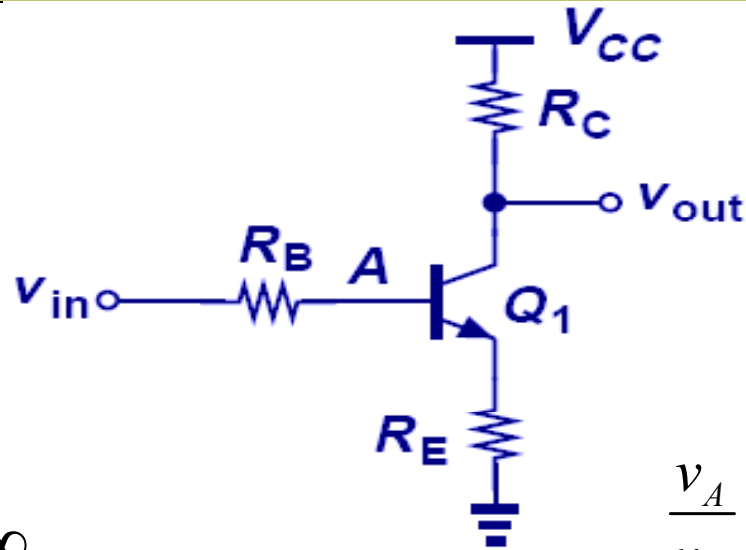
$$V_A = \infty$$

$$i_{out} = g_m \frac{v_{in}}{1 + (r_{\pi}^{-1} + g_m) R_E}$$

$$G_m = \frac{i_{out}}{v_{in}} \approx \frac{g_m}{1 + g_m R_E}$$

- As  $g_m R_E \gg 1$ ,  $G_m \approx 1/R_E$
- Then the voltage gain of the stage with a load resistance of  $R_C$  is given by  $A_v \approx -R_C/R_E$

# Degenerated CE Stage with Base Resistance



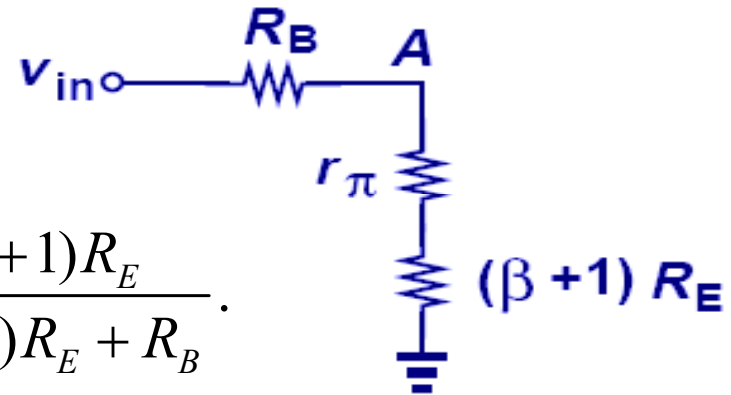
$$V_A = \infty$$

$$\frac{v_{out}}{v_{in}} = \frac{v_A}{v_{in}} \cdot \frac{v_{out}}{v_A}$$

$$\frac{v_{out}}{v_{in}} = \frac{-\beta R_C}{r_\pi + (\beta + 1)R_E + R_B}$$

$$A_v \approx \frac{-R_C}{\frac{1}{g_m} + R_E + \frac{R_B}{\beta + 1}}$$

$$\frac{v_A}{v_{in}} = \frac{r_\pi + (\beta + 1)R_E}{r_\pi + (\beta + 1)R_E + R_B}$$

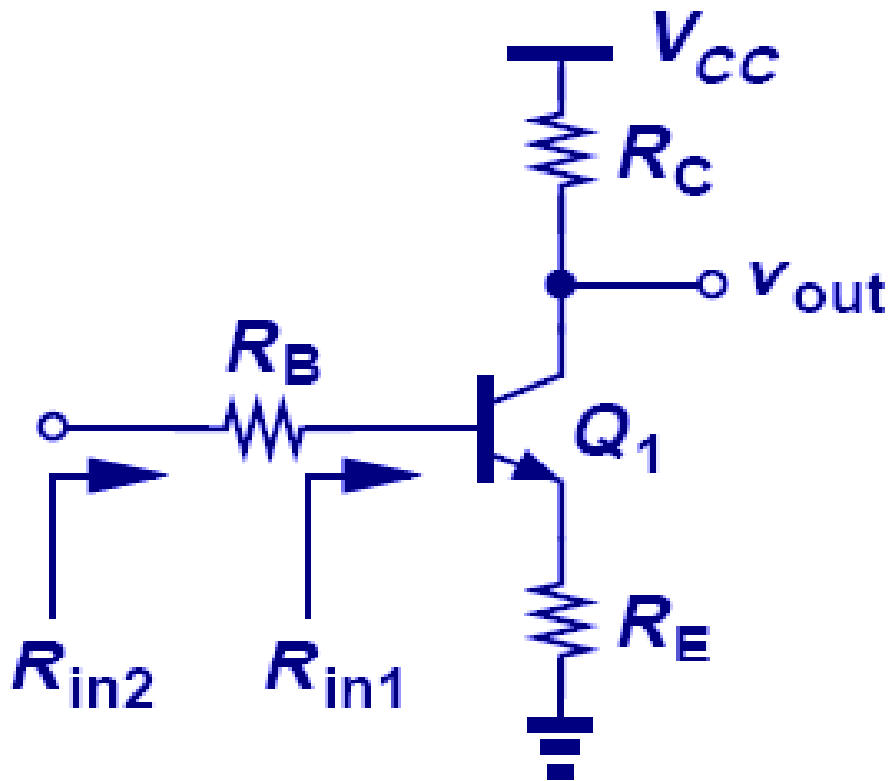


$$\frac{v_{out}}{v_{in}} = \frac{r_\pi + (\beta + 1)R_E}{r_\pi + (\beta + 1)R_E + R_B} \cdot \frac{-g_m R_C}{1 + \left( \frac{1}{r_\pi} + g_m \right) R_E}$$

- $R_B$  only *degrades* the performance of the circuit, but often proves inevitable.
- For example,  $R_B$  may represent the output resistance of a microphone connected to the input of the amplifier.
- $R_B$  is scaled down by  $\beta + 1$

# Input/Output Impedances

- $R_{in1}$  is more important in practice as  $R_B$  is often the output impedance of the previous stage.



$$V_A = \infty$$

$$R_{in1} = r_{\pi} + (\beta + 1)R_E$$

$$R_{in2} = R_B + r_{\pi2} + (\beta + 1)R_E$$

$$R_{out} = R_C$$

## Example 5.26

A microphone having an output resistance of  $1\text{ k}\Omega$  generates a peak signal level of  $2\text{ mV}$ . Design a CE stage with a bias current of  $1\text{ mA}$  that amplifies this signal to  $40\text{ mV}$ .

Assume  $R_E = 4/g_m$  and  $\beta = 100$ .

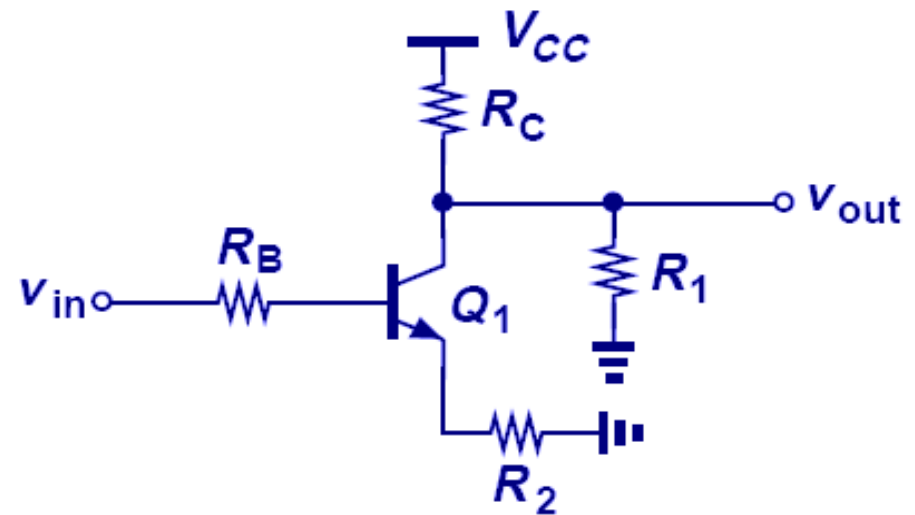
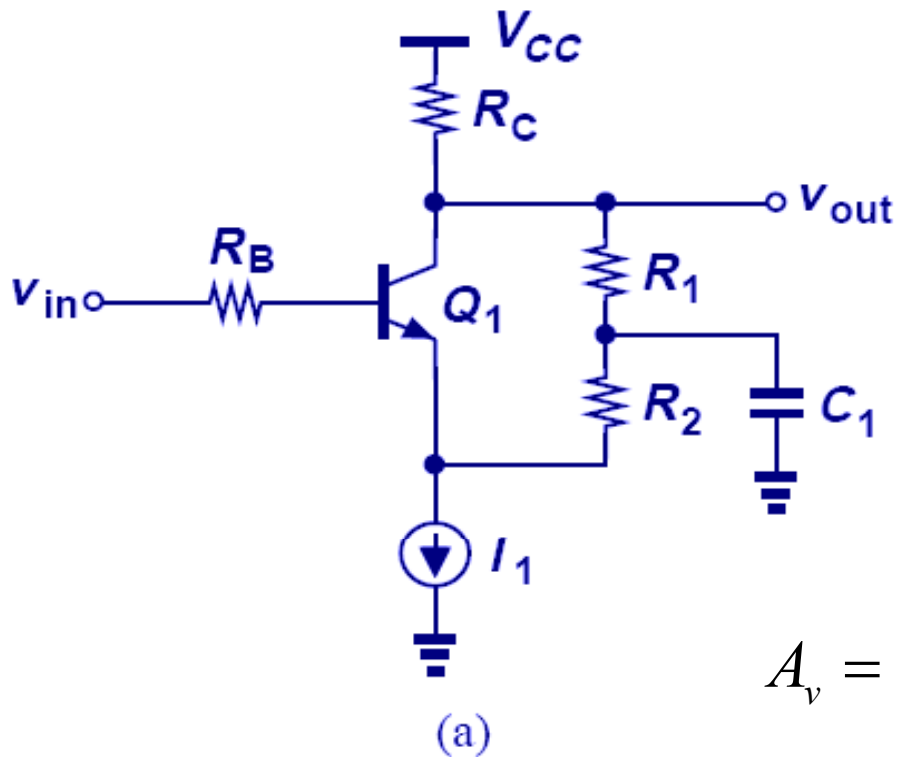
### Solution

The following quantities are obtained:  $R_B = 1\text{ k}\Omega$ ,  $g_m = (26\Omega)^{-1}$ ,  $|A_v| = 20$ , and  $R_E = 104\Omega$ . From Eq. (5.185),

$$R_C = |A_v| \left( \frac{1}{g_m} + R_E + \frac{R_B}{\beta + 1} \right) \approx 2.8\text{k}\Omega.$$

## Example 5.27

- Assume a very large value for  $C_1$  and neglect the Early effect.
- Replacing  $C_1$  with a short circuit,  $I_1$  with an open circuit, and  $V_{CC}$  with ac ground, we arrive at the simplified model in Fig. (b).



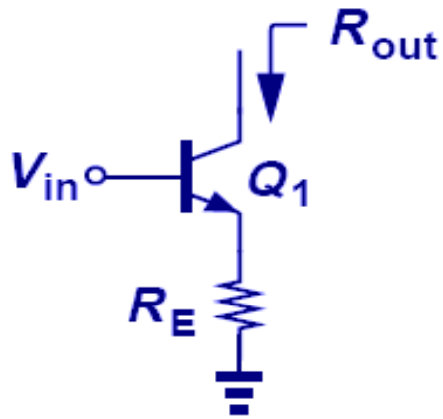
$$A_v = \frac{-(R_C \parallel R_1)}{\frac{1}{g_m} + R_2 + \frac{R_B}{\beta + 1}}$$

$$R_{in} = r_{\pi} + (\beta + 1)R_2$$

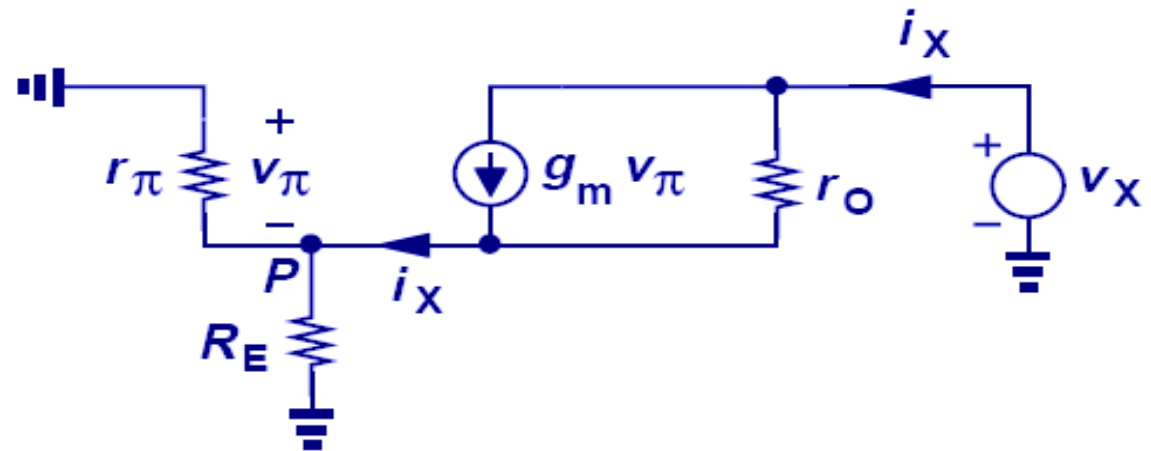
$$R_{out} = R_C \parallel R_1$$

# Early Effect on Output Impedance ( $V_A < \infty$ )

- Emitter degeneration *boosts* the output impedance by a factor of  $1 + g_m(R_E \parallel r_\pi)$ .
- This improves the gain of the amplifier and makes the circuit a better current source.



(a)



(b)

$R_{out}$  looking into the collector of a degenerated transistor,  $R_E$  :

$$R_{out} = r_o, \text{ if } R_E = 0.$$

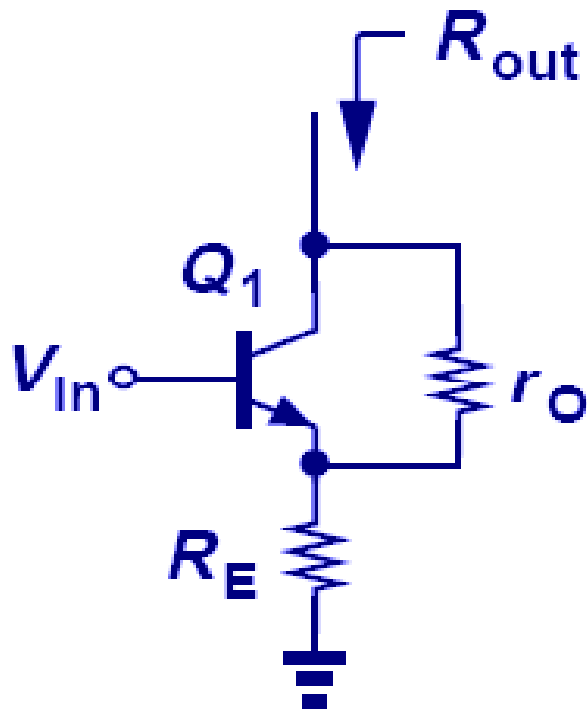
$$R_{out} = \infty, \text{ if } V_A = \infty.$$

$$R_{out} = [1 + g_m (R_E \parallel r_\pi)] r_o + R_E \parallel r_\pi$$

$$R_{out} = r_o + (g_m r_o + 1)(R_E \parallel r_\pi)$$

$$R_{out} \approx r_o [1 + g_m (R_E \parallel r_\pi)]$$

## Two Special Cases



$$R_{out} = [1 + g_m (R_E \parallel r_\pi)] r_O + R_E \parallel r_\pi$$

1)  $R_E \gg r_\pi$

$$R_{out} \approx r_O (1 + g_m r_\pi) \approx \beta r_O$$

2)  $R_E \ll r_\pi$

$$R_{out} \approx (1 + g_m R_E) r_O$$

- 1) the maximum resistance seen at the collector is  $\beta r_O$
- 2) the output resistance is boosted by a factor of  $1 + g_m R_E$



## Example 5.28

We wish to design a current source having a value of 1 mA and an output resistance of 20 k $\Omega$ . The available bipolar transistor exhibits  $\beta = 100$  and  $V_A = 10\text{V}$ . Determine the minimum required value of emitter degeneration resistance.

### Solution

Since  $r_O = V_A/I_C = 10\text{ k}\Omega$ , degeneration must raise the output resistance by a factor of two. We postulate that the condition  $R_E \ll r_\pi$  holds and write

$$1 + g_m R_E = 2$$

That is,

$$R_E = 1/g_m = 26\ \Omega$$

Note that indeed  $r_\pi = \beta/g_m \gg R_E$ .

## Example 5.29

Calculate the output resistance of the circuit shown in Fig. 5.48(a) if  $C_1$  is very large.

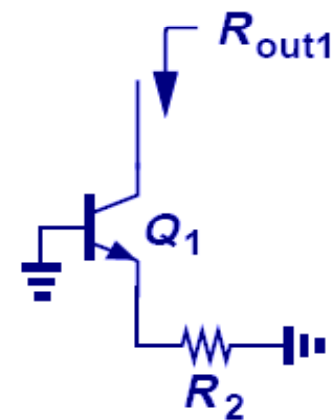
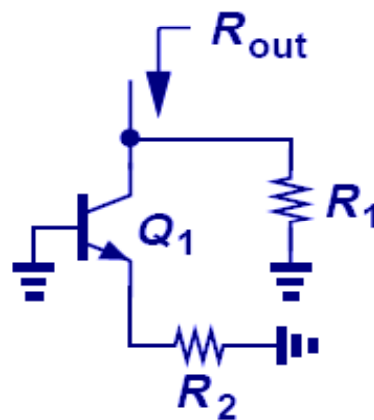
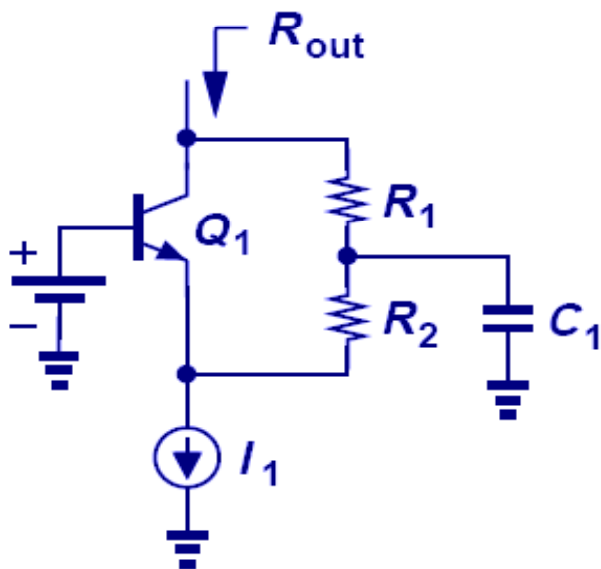
### Solution

Replacing  $V_b$  and  $C_1$  with an ac ground and  $I_1$  with an open circuit, we arrive at the simplified model in Fig. 5.48(b). Since  $R_1$  appears in parallel with the resistance seen looking into the collector of  $Q_1$ , we ignore  $R_1$  for the moment, reducing the circuit to that in Fig. 5.48(c). In analogy with Fig. 5.40, we rewrite Eq. (5.200) as

$$R_{out1} = [1 + g_m (R_2 \parallel r_\pi)] r_o.$$

Returning to Fig. 5.48(b), we have

$$R_{out} = R_{out1} \parallel R_1 = \{ [1 + g_m (R_2 \parallel r_\pi)] r_o \} \parallel R_1.$$



## Example 5.30

Determine the output resistance of the stage shown in Fig. 5.49(a).

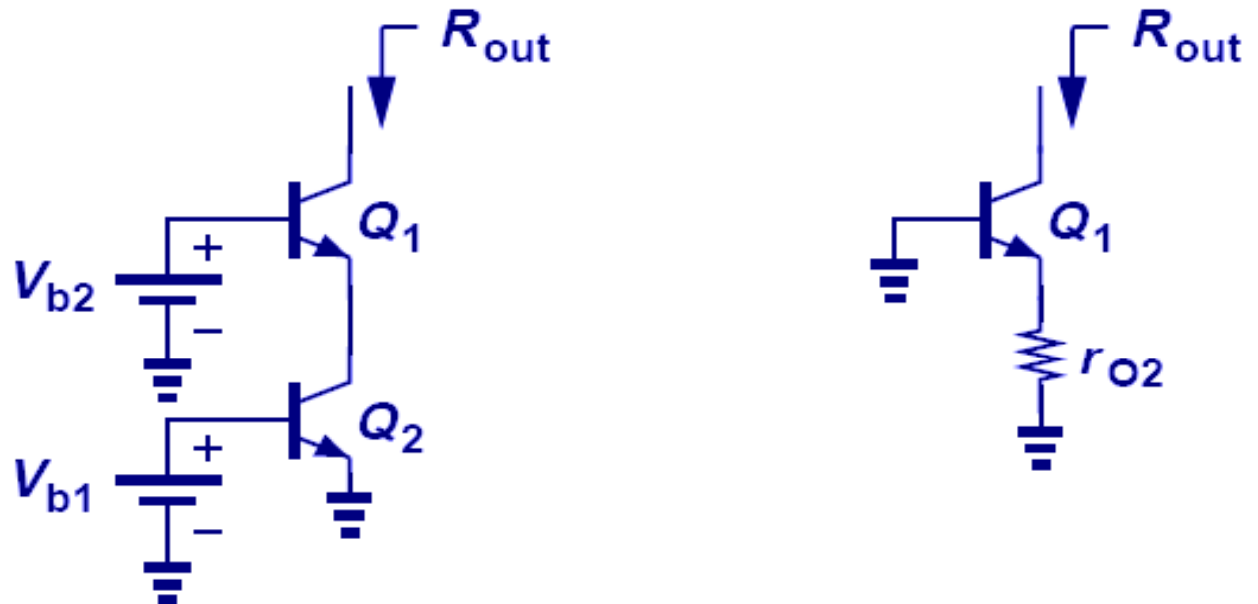
### Solution

Recall from Fig. 5.7 that the impedance seen at the collector is equal to  $r_o$  if the base and emitter are (ac) grounded. Thus,  $Q_2$  can be replaced with  $r_{O2}$  [Fig. 5.49(b)]. From another perspective,  $Q_2$  is reduced to  $r_{O2}$  because its base-emitter voltage is fixed by  $V_{b1}$ , yielding a zero  $g_{m2}v_{\pi 2}$ .

Now,  $r_{O2}$  plays the role of emitter degeneration resistance for  $Q_1$ . In analogy with Fig. 5.40(a), we rewrite Eq. (5.200) as

$$R_{out} = [1 + g_{m1}(r_{O2} \parallel r_{\pi 1})]r_{O1}.$$

Called a “*cascode*” circuit, this topology is studied and utilized extensively in Chapter 9.



## Example 5.31

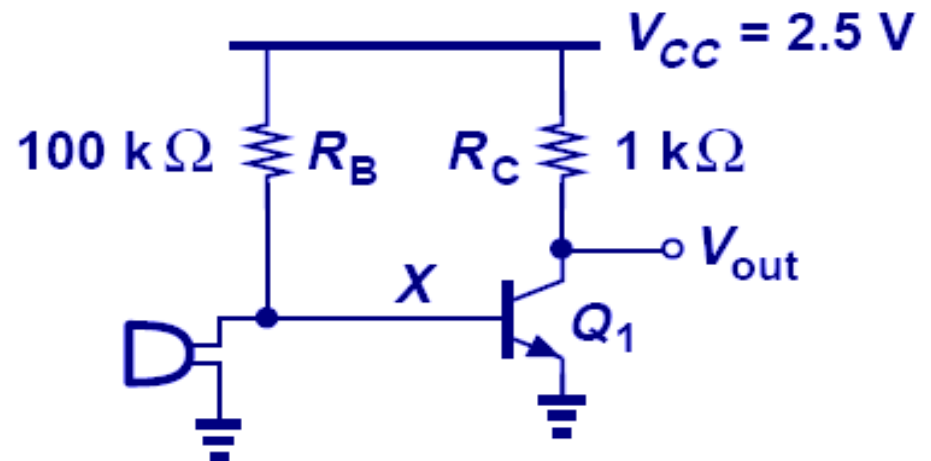
A student familiar with the CE stage and basic biasing constructs the circuit shown in Fig. 5.50 to amplify the signal produced by a microphone. Unfortunately,  $Q_1$  carries no current, failing to amplify. Explain the cause of this problem.

### Solution

Many microphones exhibit a small low-frequency resistance (e.g.,  $< 100 \Omega$ ). If used in this circuit, such a microphone creates a low resistance from the base of  $Q_1$  to ground, forming a voltage divider with  $R_B$  and providing a very low base voltage. For example, a microphone resistance of  $100 \Omega$  yields

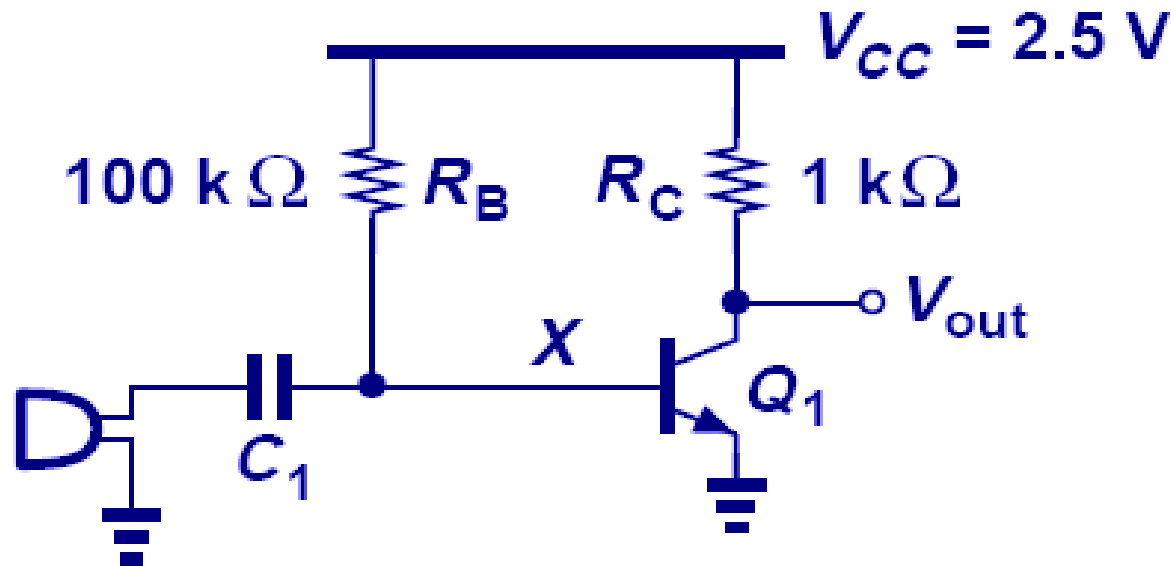
$$V_x = \frac{100\Omega}{100\text{k}\Omega + 100\Omega} \times 2.5\text{V} \approx 2.5\text{mV}.$$

Thus, the microphone low-frequency resistance disrupts the bias of the amplifier.



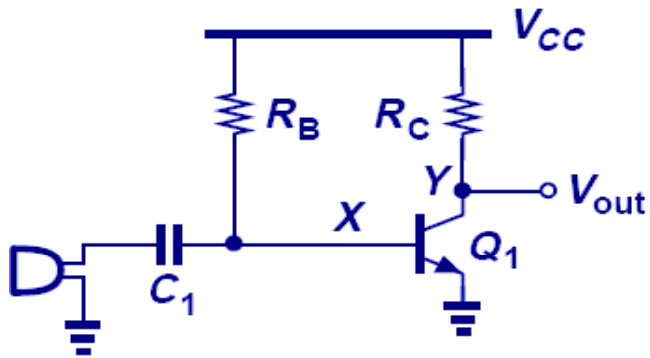
# Use of Coupling Capacitor

- Capacitor isolates the bias network from the microphone at DC but shorts the microphone to the amplifier at higher frequencies.
- $C_1$  is a “**coupling**” capacitor and the input of this stage is “**ac-coupled**” or “**capacitively-coupled.**”

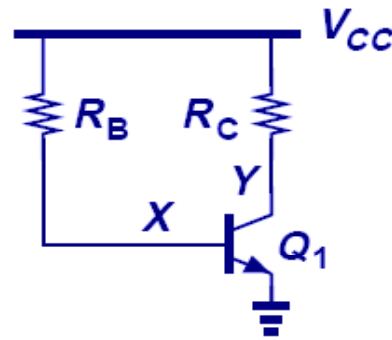


# DC and AC Analysis

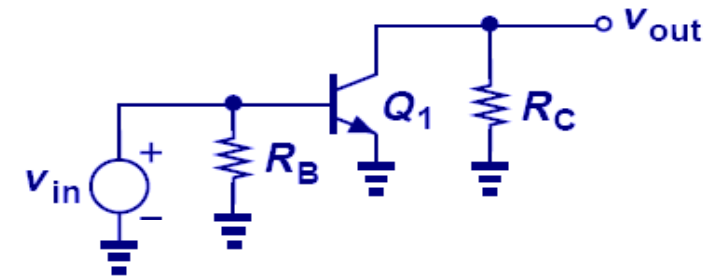
➤ Coupling capacitor is open for DC calculations and shorted for AC calculations.



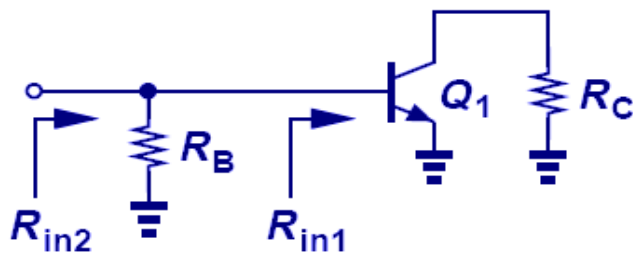
(a)



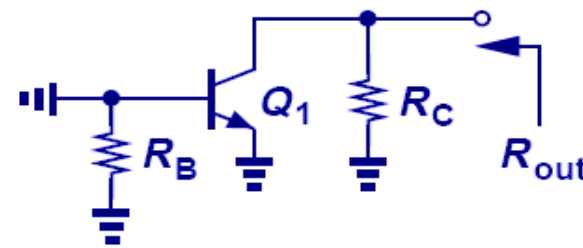
(b) bias calculation



(c) small-signal calculation



(d)



(e)

$$I_C = \beta \frac{V_{CC} - V_{BE}}{R_B},$$

$$V_Y = V_{CC} - \beta R_C \frac{V_{CC} - V_{BE}}{R_B}. \quad V_Y \geq V_{BE}$$

$$A_v = -g_m (R_C \parallel r_o)$$

$$R_{in} = r_\pi \parallel R_B$$

$$R_{out} = R_C \parallel r_o$$

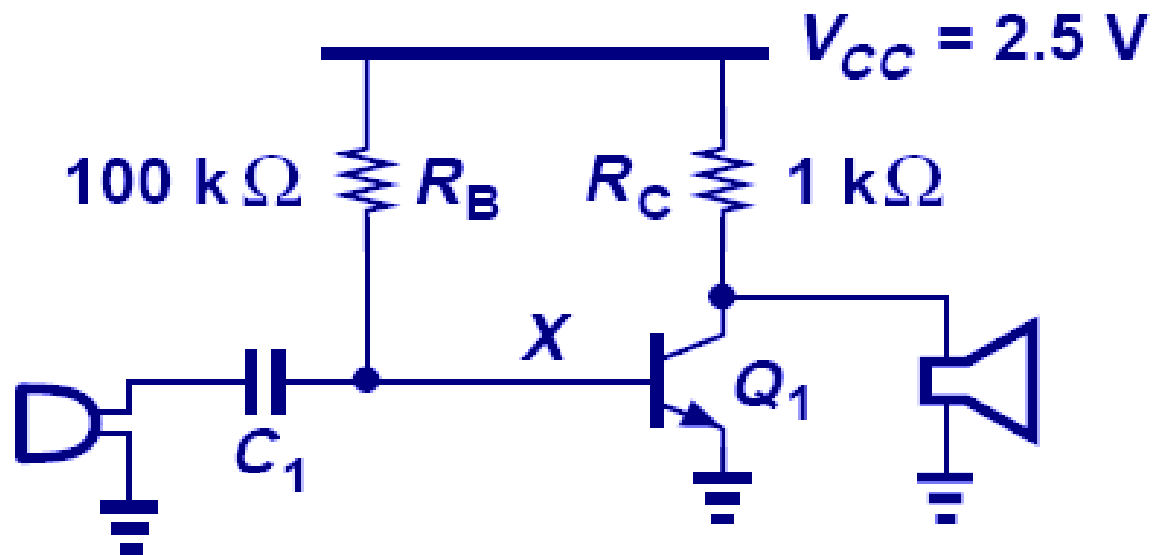
## Example 5.32 Bad Output Connection

Having learned about ac coupling, the student in Example 5.31 modifies the design to that shown in Fig. 5.53 and attempts to drive a speaker. Unfortunately, the circuit still fails. Explain why.

### Solution

Typical speakers incorporate a solenoid (inductor) to actuate a membrane. The solenoid exhibits a very low dc resistance, e.g., less than  $1\ \Omega$ . Thus, the speaker in Fig. 5.53 shorts the collector to ground, driving  $Q_1$  into deep saturation.

Since the speaker has an inductor, connecting it directly to the amplifier would short the collector at DC and therefore push the transistor into deep saturation.



## Example 5.33 Still No Gain!!!

The student applies ac coupling to the output as well [Fig. 5.54(a)] and measures the quiescent points to ensure proper biasing. The collector bias voltage is 1.5 V, indicating that  $Q_1$  operates in the active region. However, the student still observes no gain in the circuit. (a) If  $I_S = 5 \times 10^{-17}$  A and  $V_A = \infty$ , compute the  $\beta$  of the transistor. (b) Explain why the circuit provides no gain.

### Solution

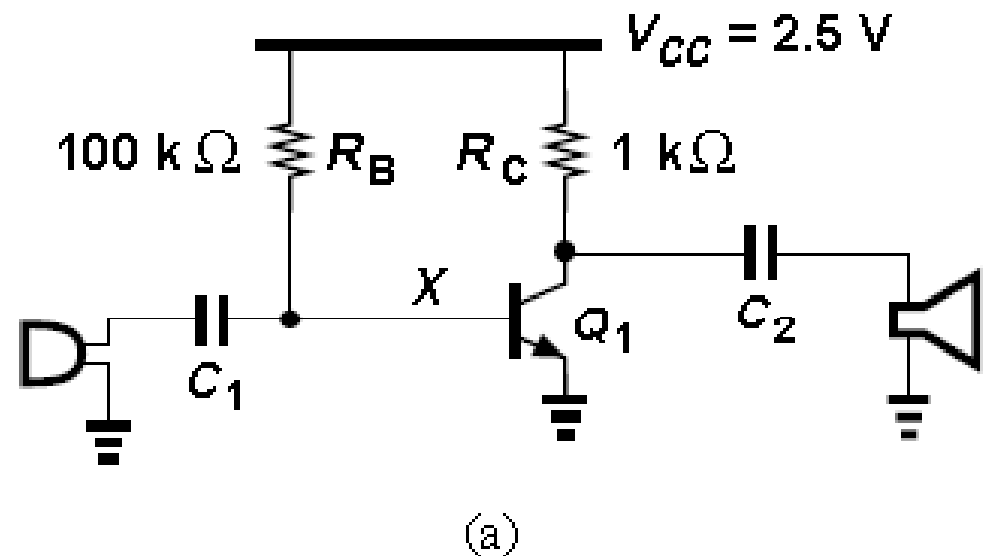
(a) A collector voltage of 1.5 V translates to a voltage drop of 1 V across  $R_C$  and hence a collector current of 1 mA. Thus,

$$V_{BE} = V_T \ln \frac{I_C}{I_S} = 796 \text{ mV}.$$

It follows that

$$I_B = \frac{V_{CC} - V_{BE}}{R_B} = 17 \mu\text{A},$$

and  $\beta = I_C/I_B = 58.8$ .



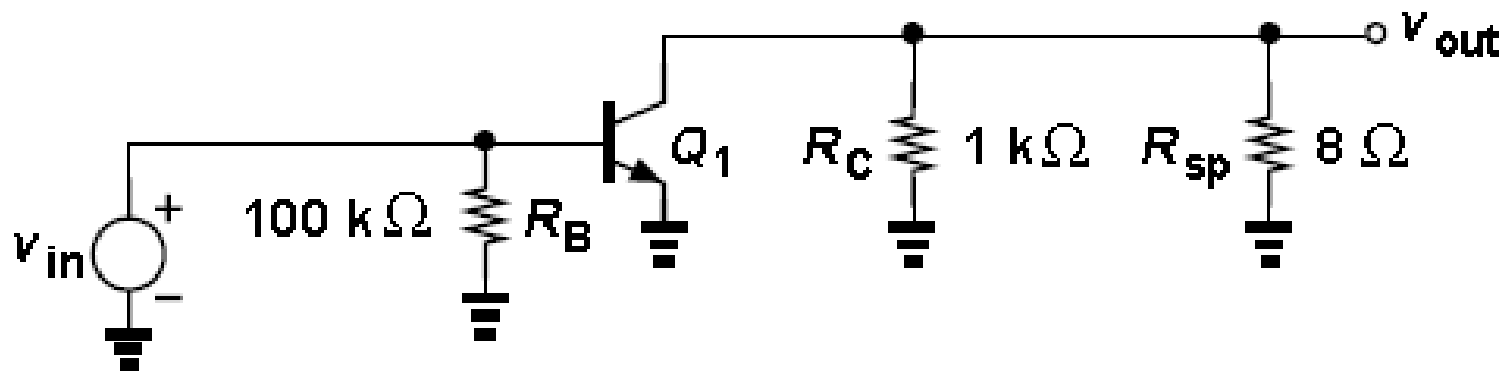


## Example 5.33 (cnt'd)

(b) Speakers typically exhibit a low impedance in the audio frequency range, e.g.,  $8\ \Omega$ . Drawing the ac equivalent as in Fig. 5.54(b), we note that the total resistance seen at the collector node is equal to  $1\text{k}\ \Omega \parallel 8\ \Omega$ , yielding a gain of

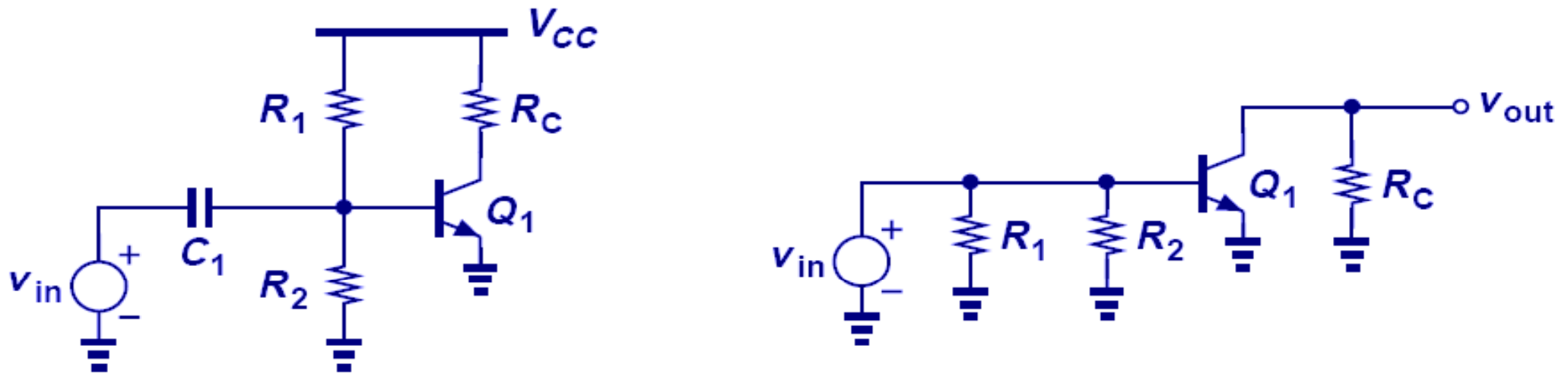
$$|A_v| = g_m(R_C \parallel R_S) = 0.31$$

In this example, the AC coupling indeed allows correct biasing. However, due to the speaker's small input impedance, the overall gain drops considerably.



(b)

# CE Stage with Biasing



(a) Biased stage with capacitive coupling, (b) simplified circuit.

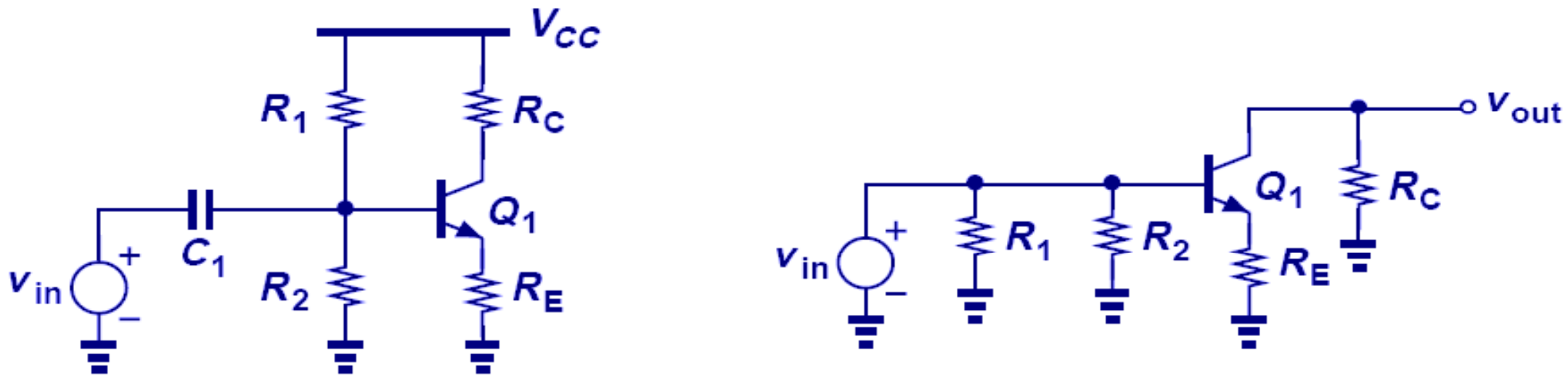
[jump to DC bias](#) @ 5-21

$$A_v = -g_m (R_C \parallel r_o)$$

$$R_{in} = r_\pi \parallel R_1 \parallel R_2$$

$$R_{out} = R_C \parallel r_o$$

# CE Stage with Robust Biasing



(a) Degenerated stage with capacitive coupling, (b) simplified circuit.

$$A_v = \frac{-R_C}{\frac{1}{g_m} + R_E} \quad \text{if } V_A = \infty$$

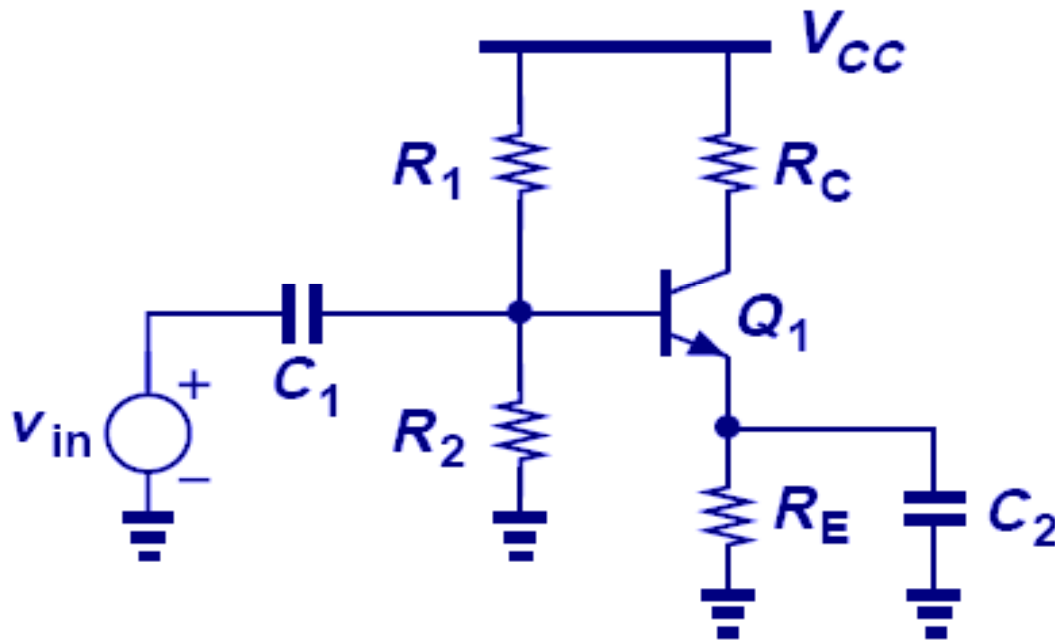
$$R_{in} = [r_\pi + (\beta + 1)R_E] \parallel R_1 \parallel R_2$$

$$R_{out} = R_C$$

- Emitter degeneration can effectively stabilize the bias point despite variations in  $\beta$  and  $I_S$ , but also lower the gain.

# Removal of Degeneration for Signals at AC

- Capacitor  $C_2$  shorts out  $R_E$  at higher frequencies and removes degeneration at AC, where  $C_2$  is large enough to act as a short circuit for signal frequencies of interest.

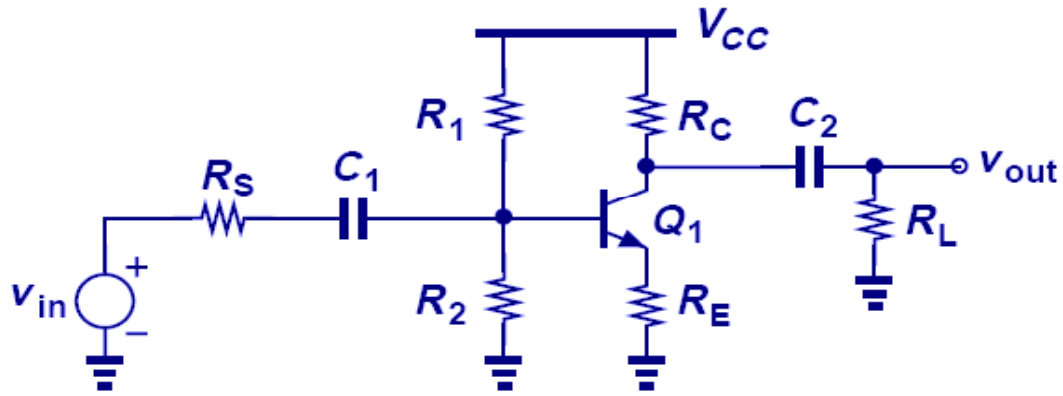


$$A_v = -g_m R_C$$

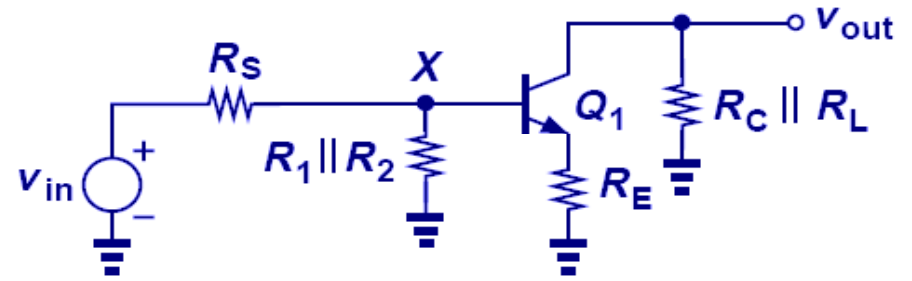
$$R_{in} = r_\pi \parallel R_1 \parallel R_2$$

$$R_{out} = R_C$$

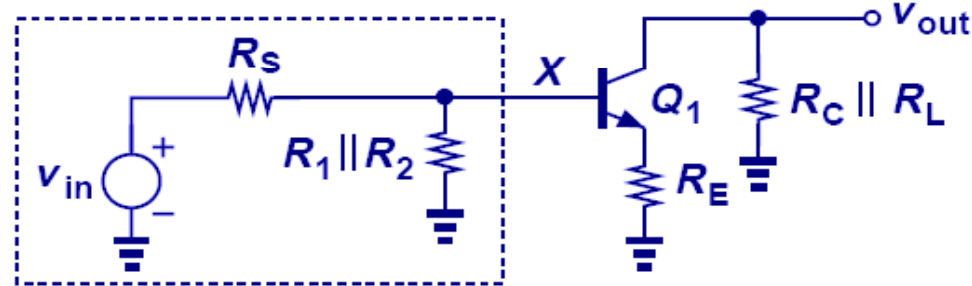
# Complete CE Stage



(a)



(b)



(b)

$$V_{Thev} = \frac{R_1 \parallel R_2}{R_1 \parallel R_2 + R_S} v_{in}$$

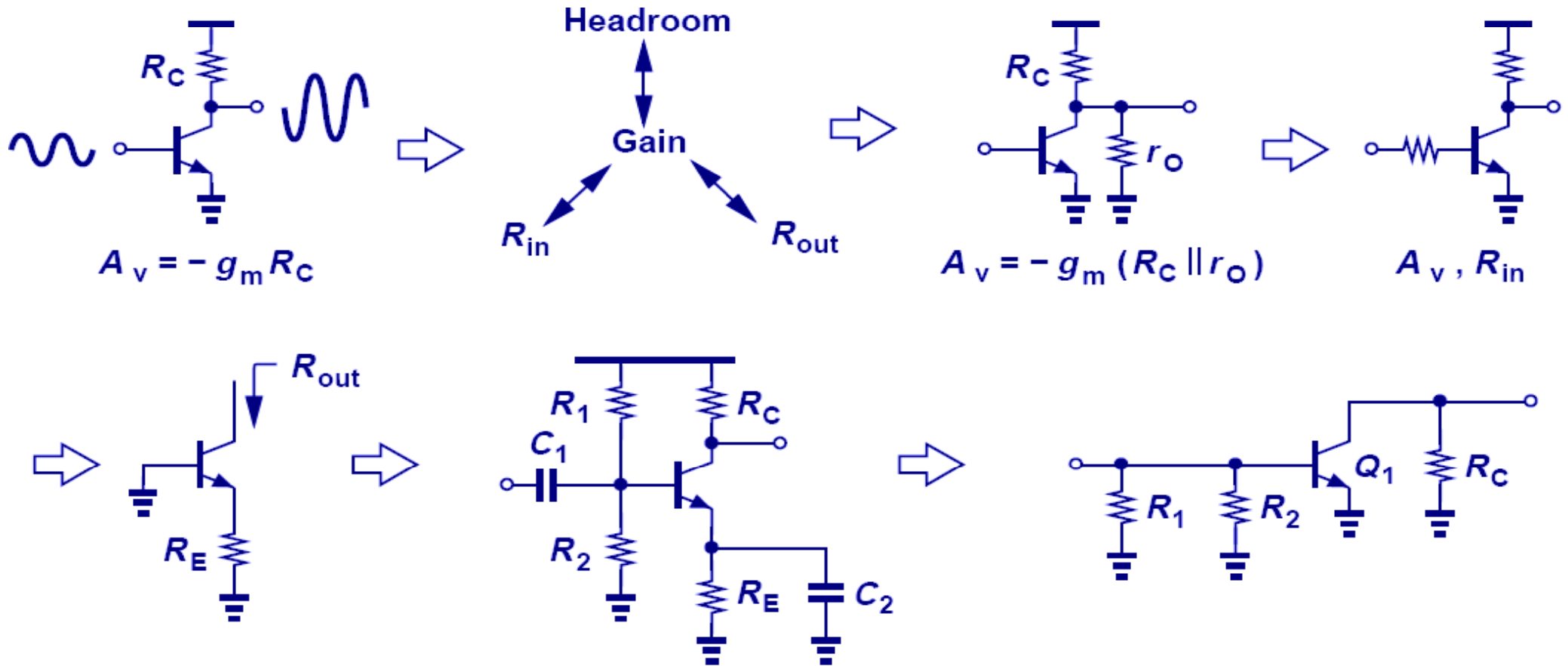
$$R_{Thev} = R_S \parallel R_1 \parallel R_2.$$

$$\frac{v_X}{v_{in}} = \frac{R_1 \parallel R_2 \parallel [r_\pi + (\beta + 1)R_E]}{R_1 \parallel R_2 \parallel [r_\pi + (\beta + 1)R_E] + R_S}.$$

$$A_v = - \frac{R_C \parallel R_L}{\frac{1}{g_m} + R_E + \frac{R_{Thev}}{\beta + 1}} \cdot \frac{R_1 \parallel R_2}{R_1 \parallel R_2 + R_S},$$

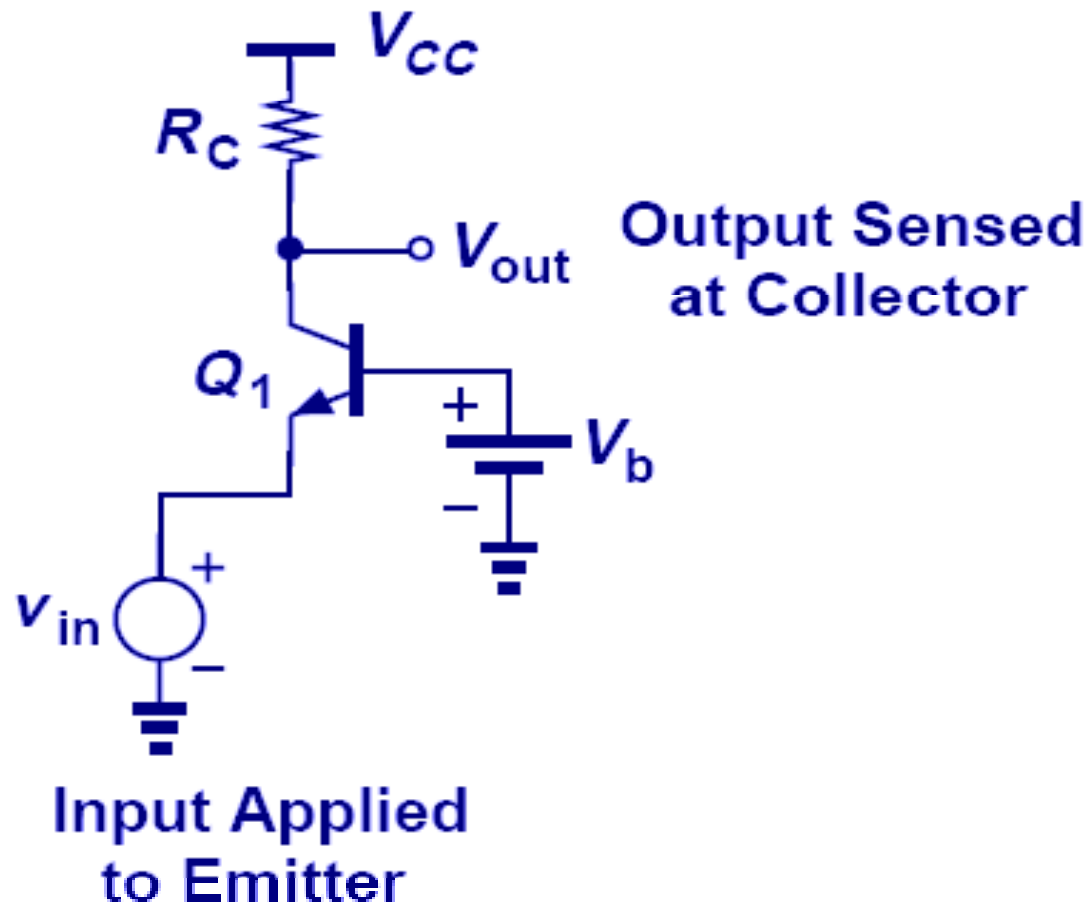
$$\frac{v_{out}}{v_{in}} = \frac{v_X}{v_{in}} \cdot \frac{v_{out}}{v_X} = - \frac{R_1 \parallel R_2 \parallel [r_\pi + (\beta + 1)R_E]}{R_1 \parallel R_2 \parallel [r_\pi + (\beta + 1)R_E] + R_S} \frac{R_C \parallel R_L}{\frac{1}{g_m} + R_E}.$$

# Summary of CE Concepts



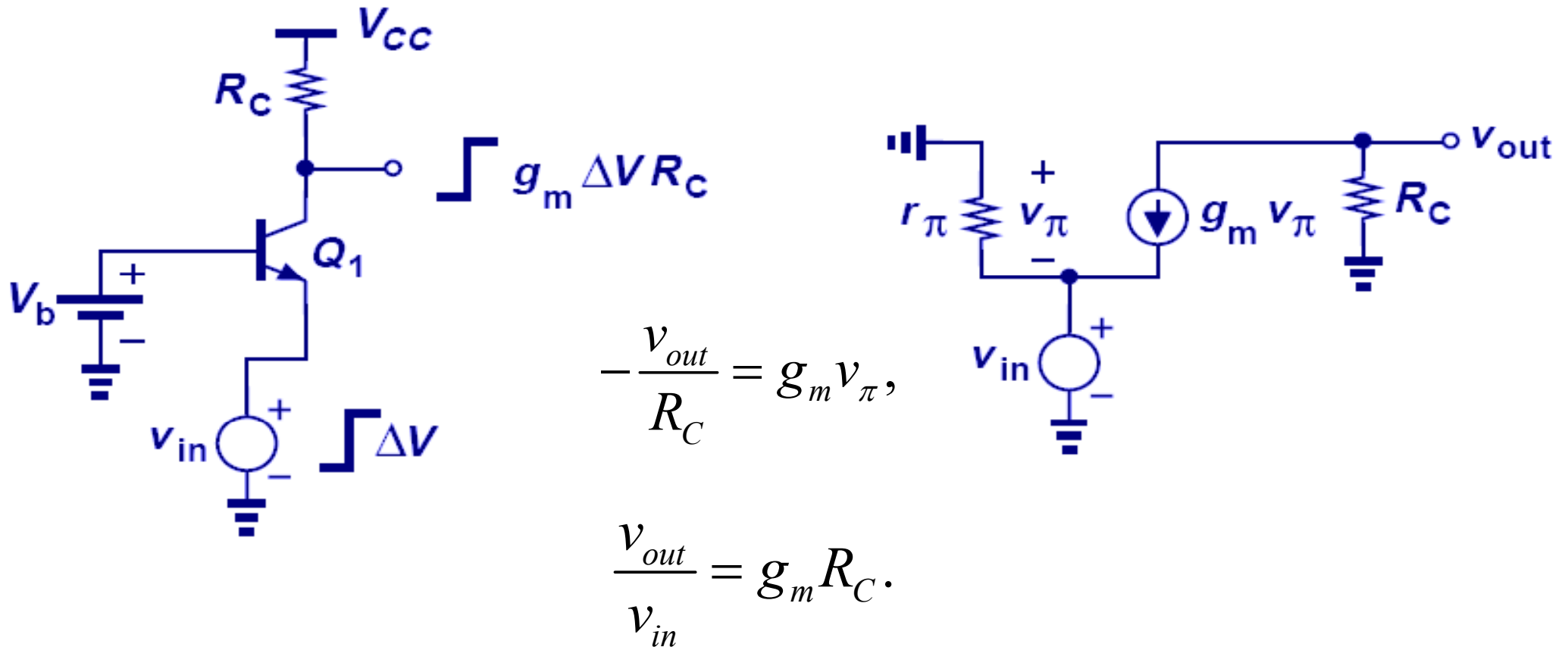
# Common Base (CB) Amplifier

- In common base topology, where the base terminal is biased with a fixed voltage, emitter is fed with an input signal, and collector is the output.



# CB Core

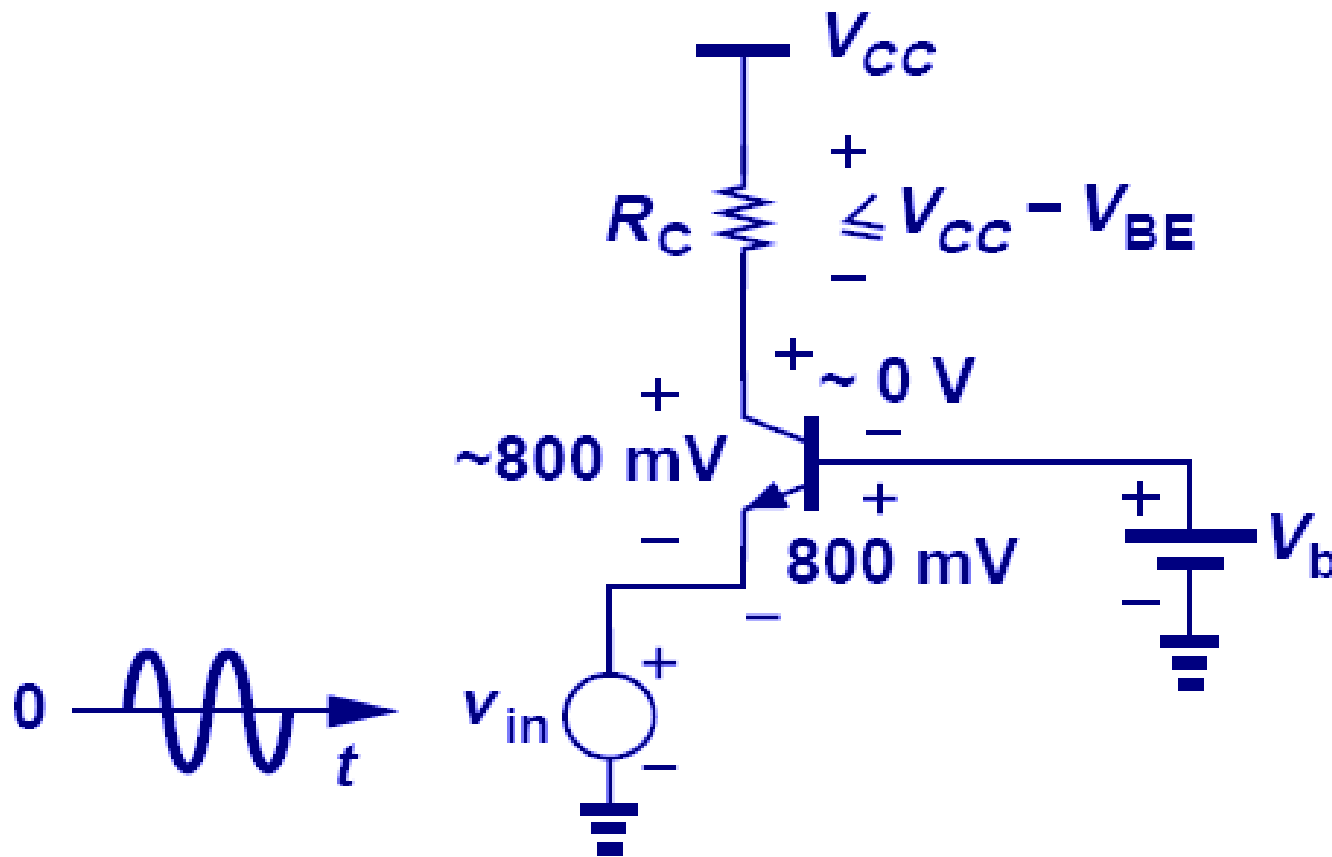
- If  $v_{in}$  goes up by a small amount  $\Delta V$ , the base-emitter voltage of  $Q_1$  decreases by the same amount because the base voltage is fixed. Consequently, the collector current falls by  $g_m \Delta V$ , allowing  $v_{out}$  to rise by  $g_m \Delta V R_C$ .
- The voltage gain of CB stage is  $g_m R_C$ , which is identical to that of CE stage in magnitude and opposite in phase.





# Tradeoff between Gain and Headroom

- To maintain the transistor out of saturation, the maximum voltage drop across  $R_C$  cannot exceed  $V_{CC} - V_{BE}$ .



$$A_v = g_m R_C = \frac{I_C}{V_T} \cdot R_C$$
$$= \frac{V_{CC} - V_{BE}}{V_T}$$

## Example 5.35

The voltage produced by an electronic thermometer is equal to 600 mV at room temperature. Design a CB stage to sense the thermometer voltage and amplify the change with maximum gain. Assume  $V_{CC} = 1.8$  V,  $I_C = 0.2$  mA,  $I_S = 5 \times 10^{-17}$  A, and  $\beta = 100$ .

### Solution

Illustrated in Fig. 5.63(a), the circuit must operate properly with an input level of 600 mV. Thus,  $V_b = V_{BE} + 600\text{mV} = V_T \ln(I_C/I_S) + 600\text{mV} = 1.354$  V. To avoid saturation, the collector voltage must not fall below the base voltage, thereby allowing a maximum voltage drop across  $R_C$  equal to  $1.8\text{V} - 1.354\text{V} = 0.446\text{V}$ . We can then write

$$A_v = g_m R_C = \frac{I_C R_C}{V_T} = 17.2.$$

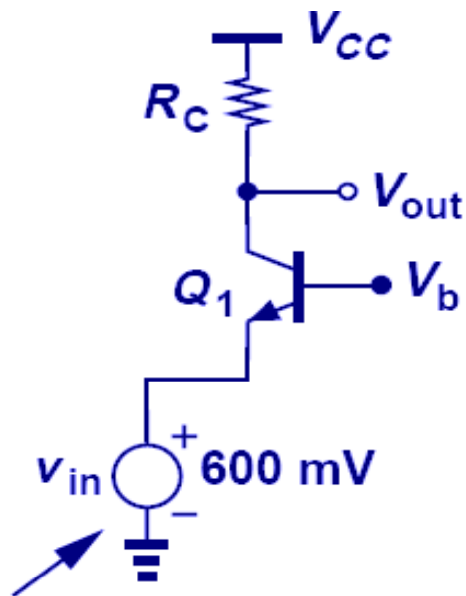
The reader is encouraged to repeat the problem with  $I_C = 0.4$  mA to verify that the maximum gain remains relatively independent of the bias current.

## Example 5.35 (cnt'd)

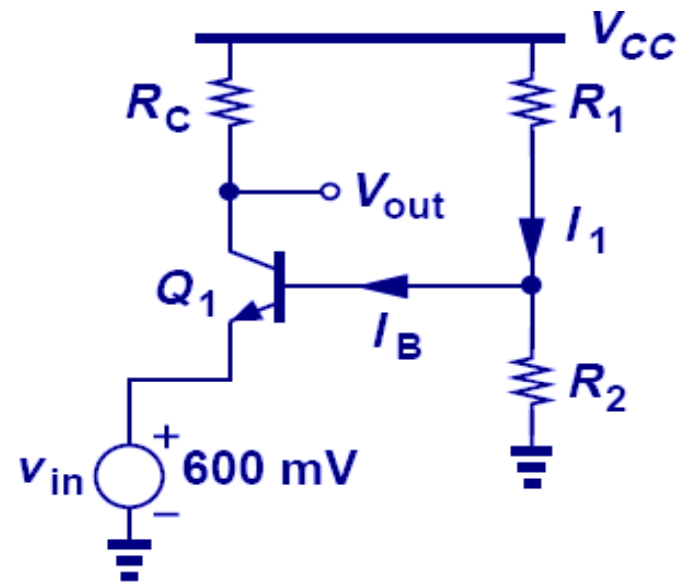
We must now generate  $V_b$ . A simple approach is to employ a resistive divider as depicted in Fig. 5.63(b). To lower sensitivity to  $\beta$ , we choose  $I_1 \approx 10I_B \approx 20\mu\text{A} \approx V_{CC}/(R_1+R_2)$ . Thus,  $R_1+R_2 = 90\text{ k}\Omega$ . Also,

$$V_b \approx \frac{R_2}{R_1 + R_2} V_{CC} \implies R_1 = 22.3\text{k}\Omega. \quad R_2 = 67.7\text{k}\Omega$$

This example serves only as an illustration of the CB stage. A CE stage may prove more suited to sensing a thermometer voltage.

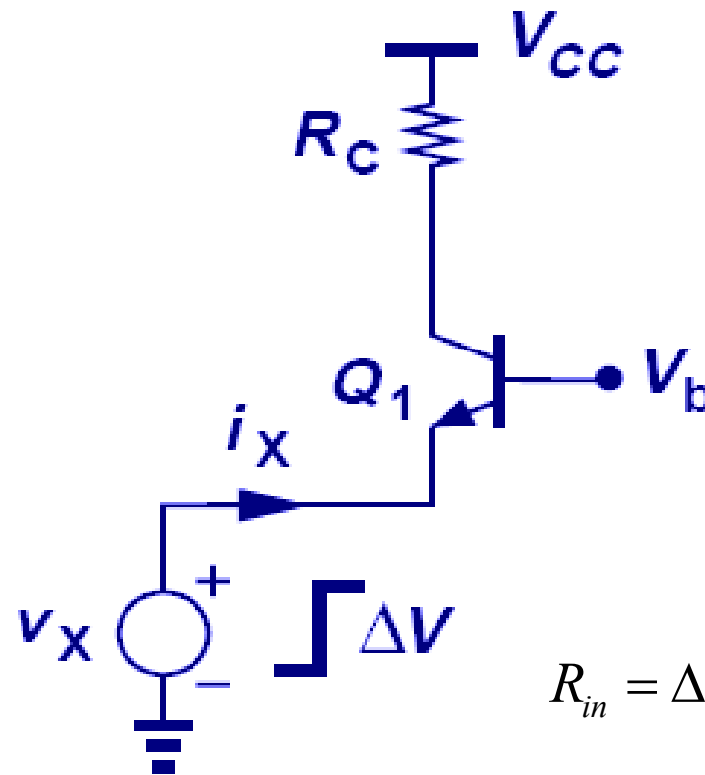
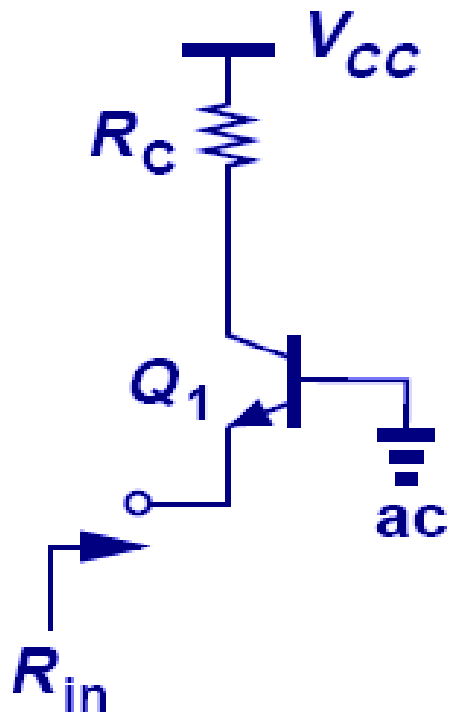


Thermometer



# Input Impedance of CB

- The input impedance of CB stage, simply the impedance seen looking into the emitter with the base at ac ground, is much smaller than that of the CE stage.



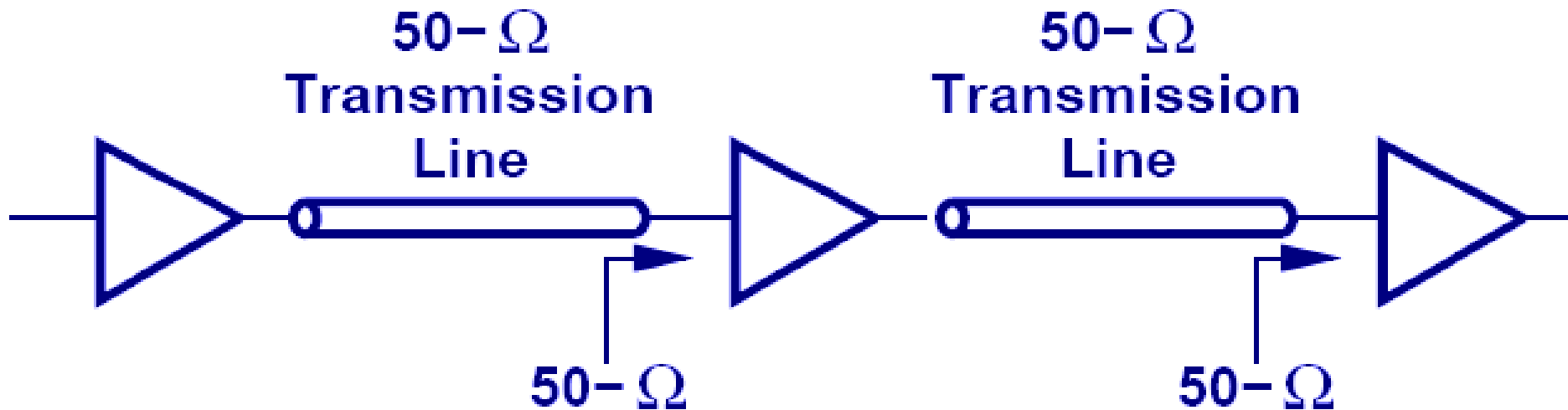
$$R_{in} = \Delta V_X / \Delta I_X = 1/g_m$$

$$R_{in} = \frac{1}{g_m}$$

relatively low, e.g., 26  $\Omega$  for  $I_C = 1$  mA

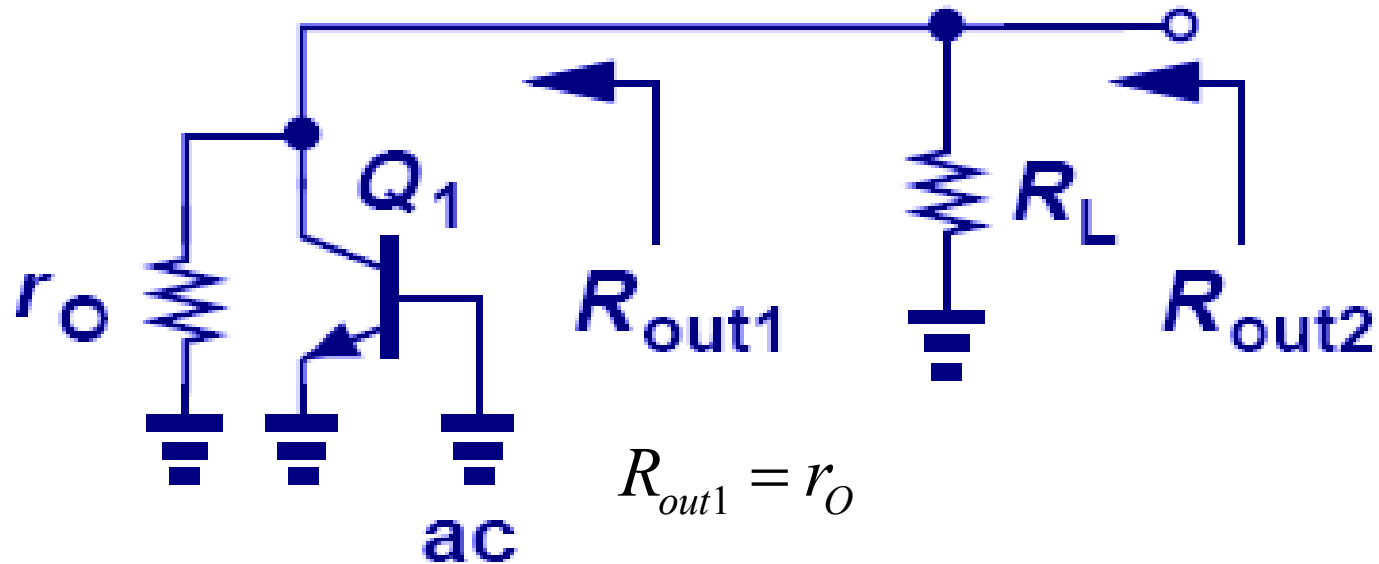
## Practical Application of CB Stage

- To avoid “*reflection*,” impedance matching is needed for interconnection.
- CB stage’s low input impedance can be used to create a match with 50  $\Omega$ .



# Output Impedance of CB Stage

- The output impedance of CB stage is similar to that of CE stage.

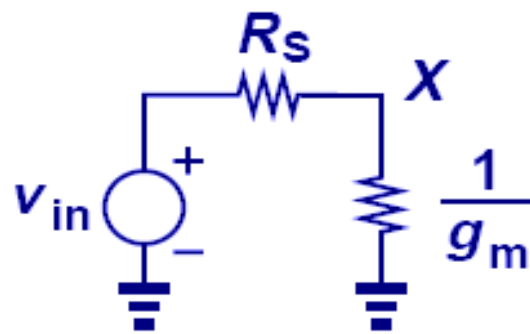
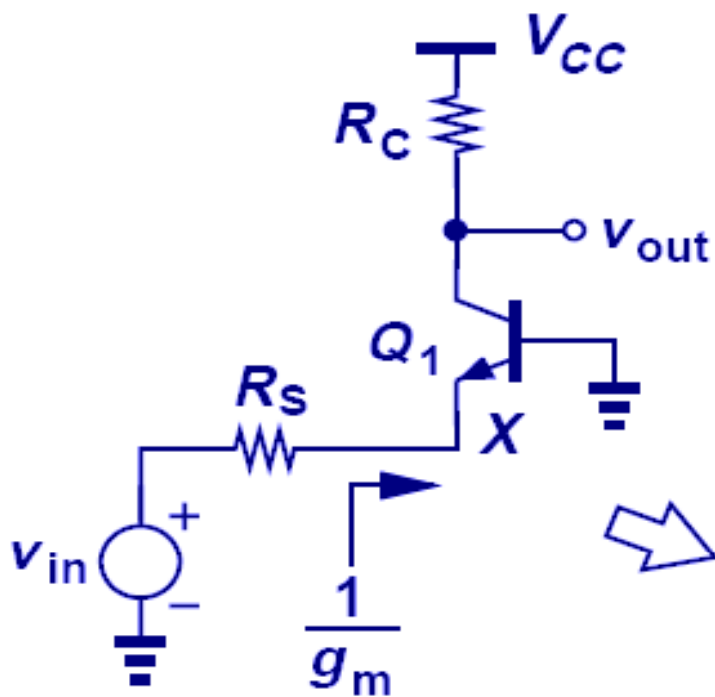


$$R_{out1} = r_O$$

$$R_{out} = r_O \parallel R_C$$
$$= R_C \quad \text{if } V_A = \infty$$

# CB Stage with Source Resistance

- With an inclusion of a source resistor,  $R_S$ , the input signal is attenuated before it reaches the emitter of the amplifier; therefore, we see a lower voltage gain.
- This is similar to CE stage emitter degeneration; only the phase is reversed.



$$v_X = \frac{1}{R_S + \frac{1}{g_m}} v_{in} = \frac{1}{1 + g_m R_S} v_{in}. \quad \frac{v_{out}}{v_X} = g_m R_C.$$

$$\begin{aligned} \frac{v_{out}}{v_{in}} &= \frac{g_m R_C}{1 + g_m R_S} \\ &= \frac{R_C}{\frac{1}{g_m} + R_S}, \end{aligned}$$

## Example 5.37

A common-base stage is designed to amplify an RF signal received by a  $50\text{-}\Omega$  antenna. Determine the required bias current if the input impedance of the amplifier must “match” the impedance of the antenna. What is the voltage gain if the CB stage also *drives* a  $50\text{-}\Omega$  load? Assume  $V_A = \infty$ .

### Solution

Figure 5.68 depicts the amplifier and the equivalent circuit with the antenna modeled by a voltage source,  $v_{in}$ , and a resistance,  $R_S = 50\Omega$ . For impedance matching, it is necessary that the input impedance of the CB core,  $1/g_m$ , be equal to  $R_S$ , and hence  $I_C = g_m V_T = 0.52\text{ mA}$ . If  $R_C$  itself is replaced by a  $50\text{-}\Omega$  load, then Eq. (5.271) reveals that

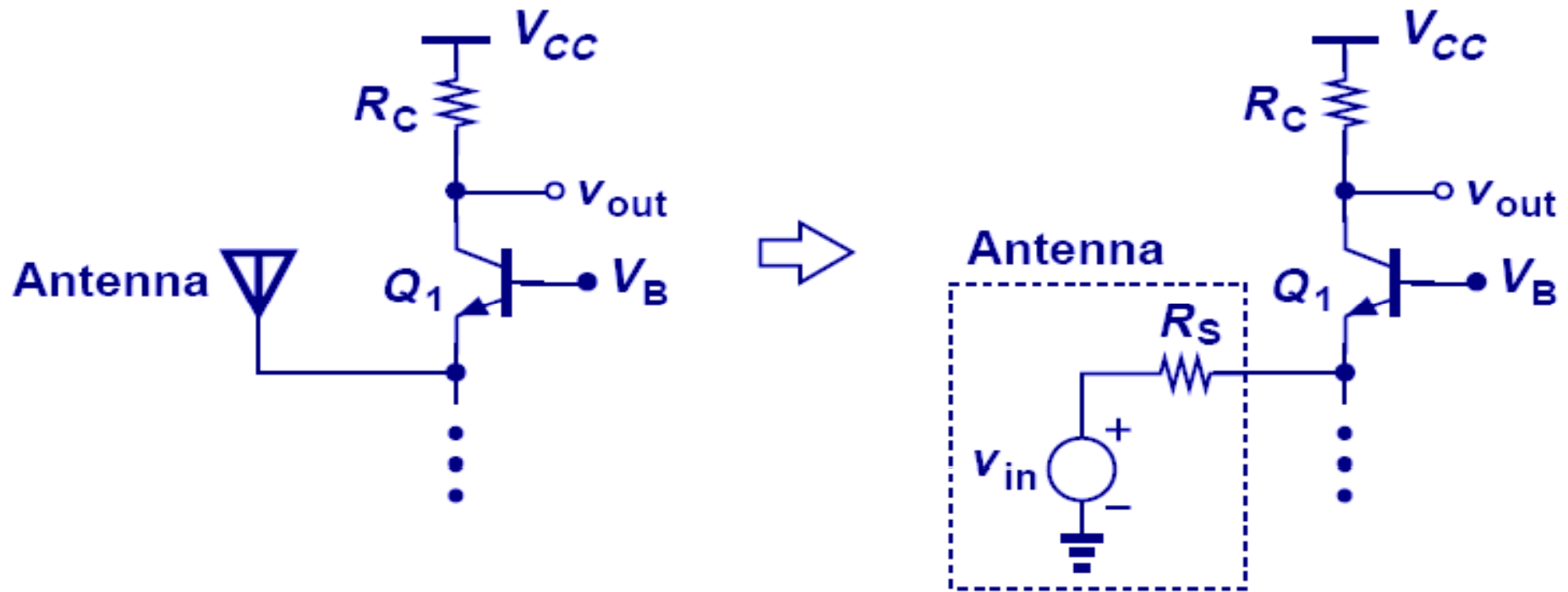
$$A_v = \frac{R_C}{\frac{1}{g_m} + R_S} = \frac{1}{2}.$$

The circuit is therefore not suited to driving a  $50\text{-}\Omega$  load directly.

An antenna usually has low output impedance; therefore, a correspondingly low input impedance is required for the following stage.



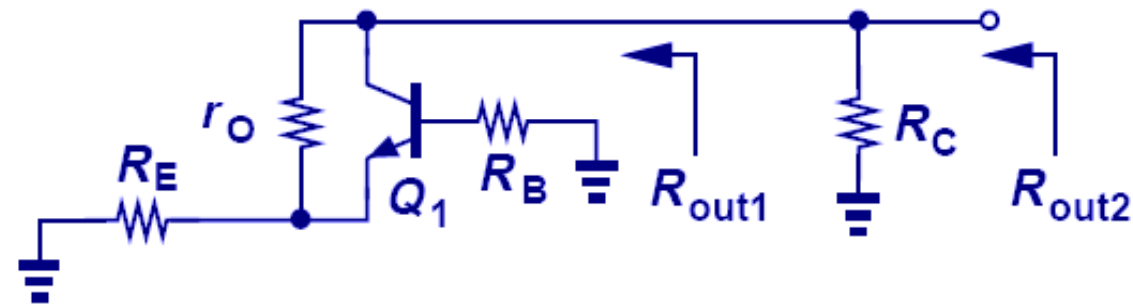
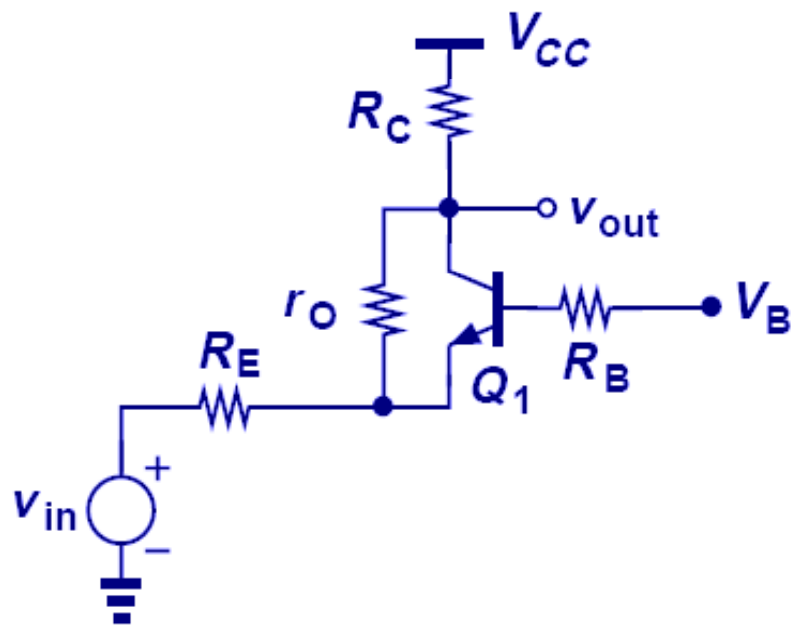
## Example 5.37 CB Stage Applied at Antenna



- The CB stage displays a current gain of *unity* because the current flowing into the emitter simply emerges from the collector (if the base current is neglected).
- On the other hand, for CE stage,  $A_I = \beta$ .

# Realistic Output Impedance of CB Stage

- The output impedance of CB stage is equal to  $R_C$  in parallel with the impedance looking down into the collector.

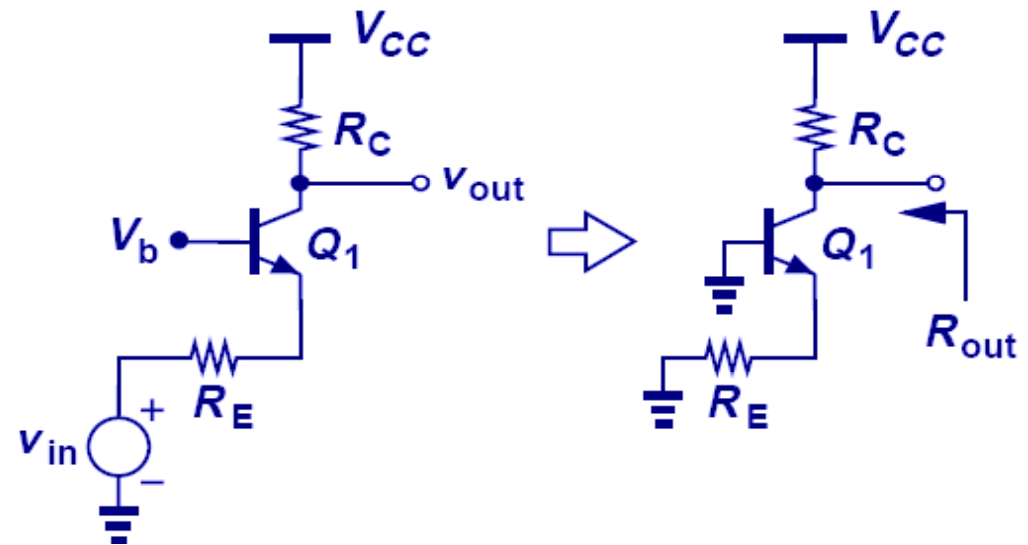
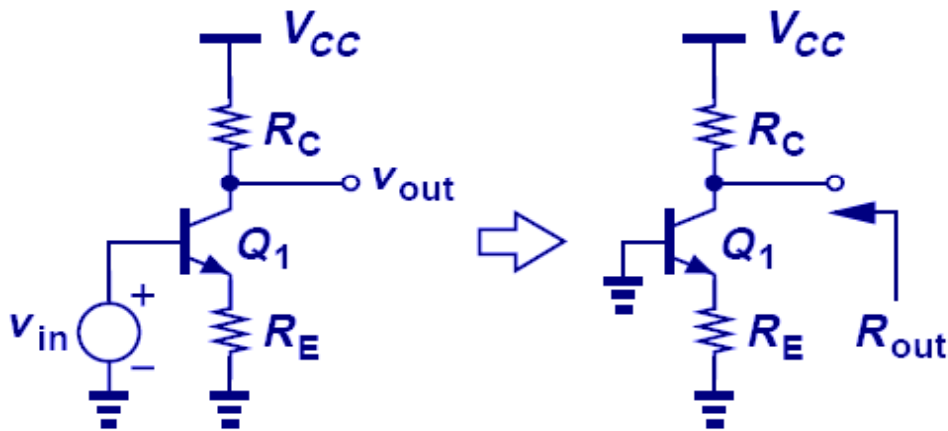


$$R_{out1} = [1 + g_m (R_E \parallel r_\pi)] r_o + (R_E \parallel r_\pi)$$

$$R_{out} = R_C \parallel R_{out1}$$

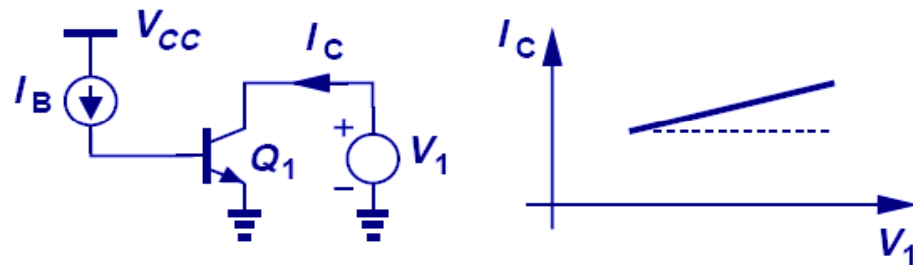
# Output Impedance of CE and CB Stages

- The output impedances of CE, CB stages are the same if both circuits are under the same condition.
- This is because when calculating output impedance, the input port is grounded, which renders the same circuit for both CE and CB stages.

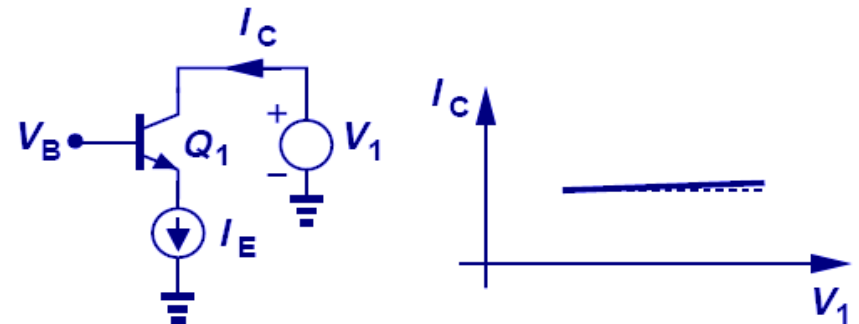


# Fallacy of the “Old Wisdom”

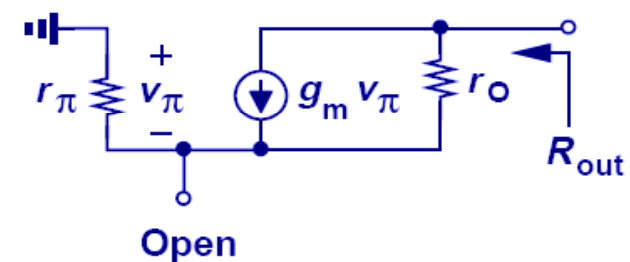
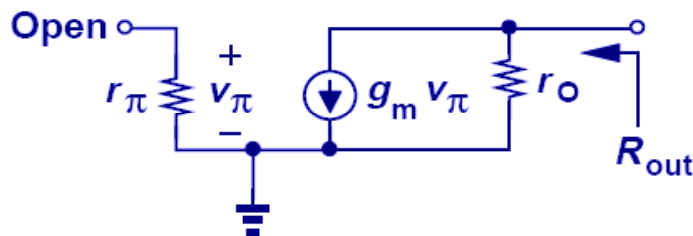
- The statement “CB output impedance is higher than CE output impedance” is flawed.
- As illustrated in Fig. 5.71, a constant current is injected into the base while the collector voltage is varied,  $I_C$  exhibits a slope equal to  $r_o^{-1}$  [Fig. 5.71(a)]. On the other hand, if a constant current is drawn from the emitter, displays much less dependence on the collector voltage.
- In practice, however, each stage may be driven by a *voltage* source having a finite impedance, making the above comparison irrelevant.



(a)



(b)



# CB with Base Resistance

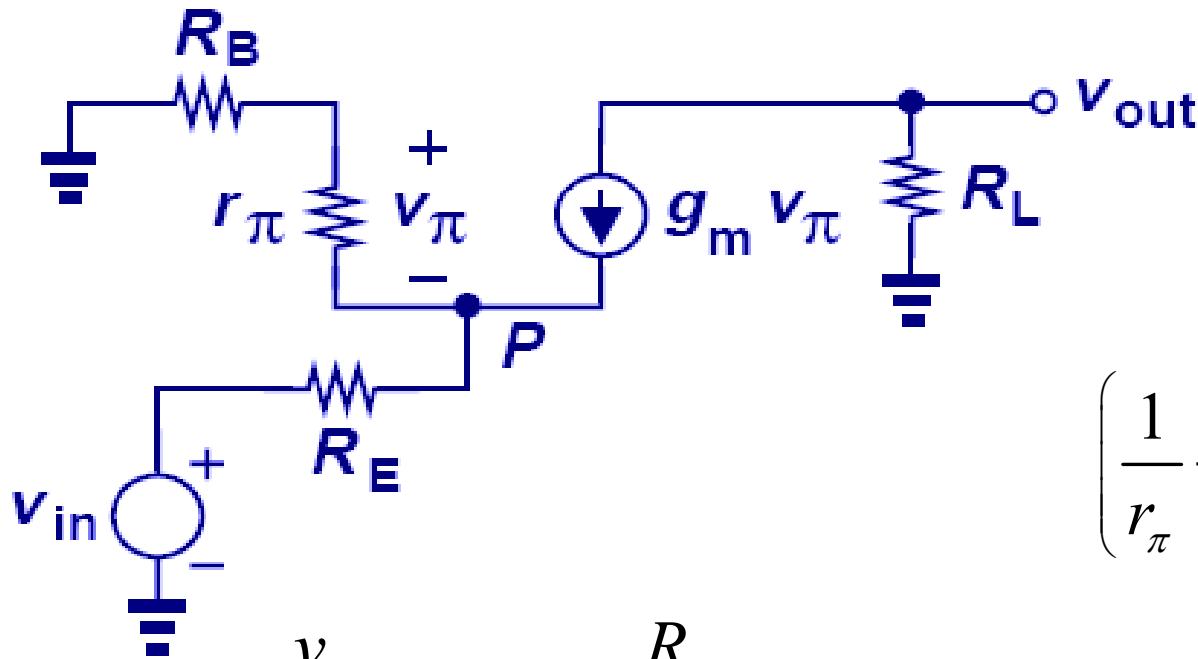
➤ With an addition of base resistance,  $R_B$ , the voltage gain degrades.

$$g_m v_\pi = -v_{out}/R_C \quad v_\pi = -v_{out}/(g_m R_C)$$

$$v_P = -\frac{-v_{out}}{\beta R_C} (R_B + r_\pi)$$

$$v_\pi/r_\pi = -v_{out}/(g_m r_\pi R_C) = -v_{out}/(\beta R_C)$$

$$= \frac{v_{out}}{\beta R_C} (R_B + r_\pi).$$



$$\frac{v_\pi}{r_\pi} + g_m v_\pi = \frac{v_P - v_{in}}{R_E};$$

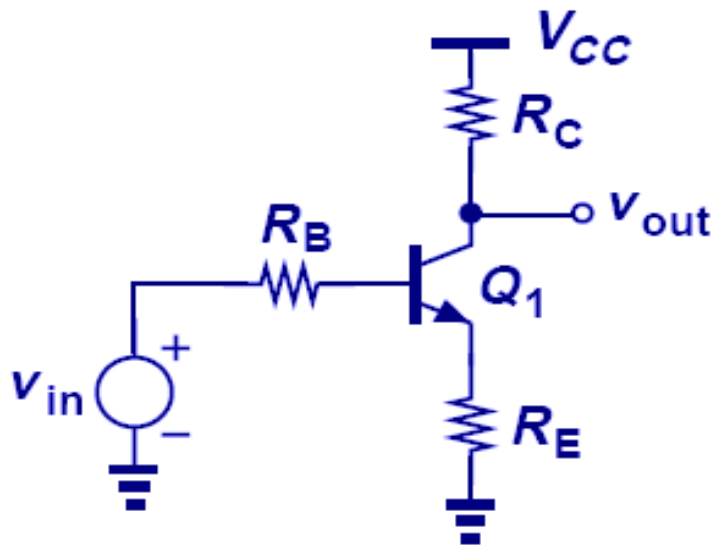
$$\left( \frac{1}{r_\pi} + g_m \right) \frac{-v_{out}}{g_m R_C} = \frac{\frac{v_{out}}{\beta R_C} (R_B + r_\pi) - v_{in}}{R_E}.$$

$$\frac{v_{out}}{v_{in}} \approx \frac{R_C}{R_E + \frac{R_B}{\beta + 1} + \frac{1}{g_m}}$$

$$\frac{v_{out}}{v_{in}} = \frac{\beta R_C}{(\beta + 1)R_E + R_B + r_\pi}.$$

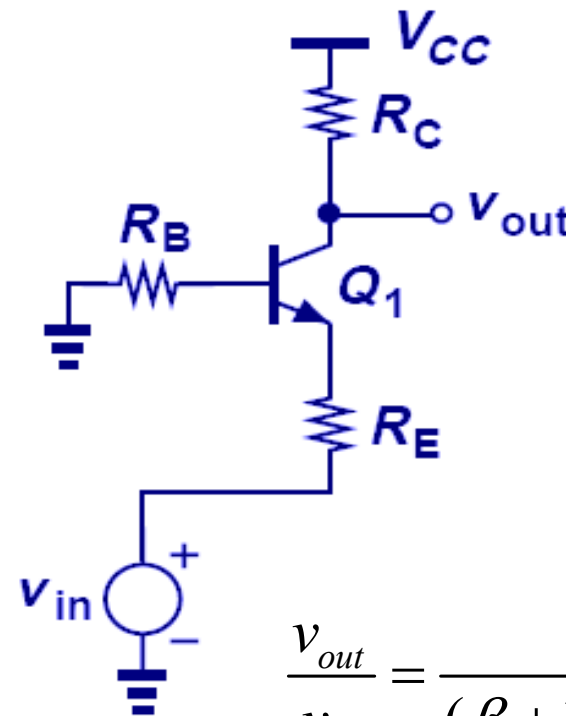
# Comparison of CE and CB Stages with $R_B$

- The voltage gain of CB amplifier with base resistance is exactly the same as that of CE stage with base resistance and emitter degeneration, except for a negative sign.



$$\frac{v_{out}}{v_{in}} = \frac{-\beta R_C}{r_{\pi} + (\beta + 1)R_E + R_B}$$

$$A_v \approx \frac{-R_C}{\frac{1}{g_m} + R_E + \frac{R_B}{\beta + 1}}$$

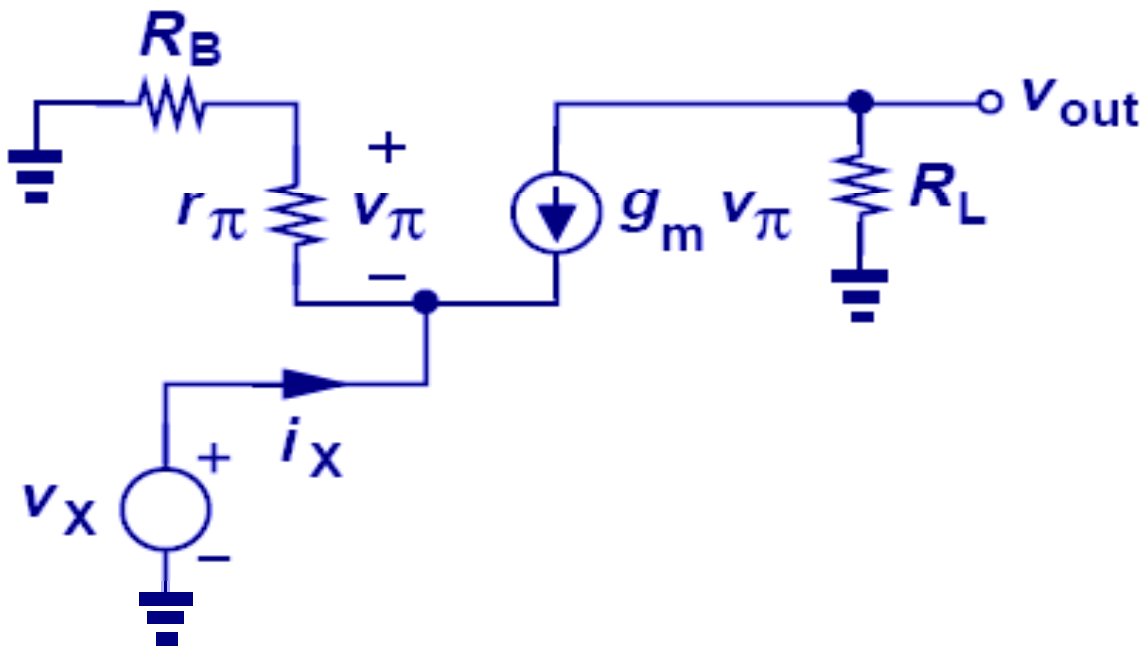


$$\frac{v_{out}}{v_{in}} = \frac{\beta R_C}{(\beta + 1)R_E + R_B + r_{\pi}}$$

$$\frac{v_{out}}{v_{in}} \approx \frac{R_C}{R_E + \frac{R_B}{\beta + 1} + \frac{1}{g_m}}$$

# Input Impedance of CB Stage with $R_B$

- The input impedance of CB with  $R_B$  is equal to  $1/g_m$  plus  $R_B$  divided by  $(\beta+1)$ .
- This is in contrast to degenerated CE stage, in which the resistance in series with the emitter is *multiplied* by  $(\beta+1)$  when seen from the base.



$$v_\pi = -\frac{r_\pi}{r_\pi + R_B} v_X.$$

$$\frac{v_\pi}{r_\pi} + g_m v_\pi = -i_X.$$

$$\left( \frac{1}{r_\pi} + g_m \right) \frac{-r_\pi}{r_\pi + R_B} v_X = -i_X$$

$$\frac{v_X}{i_X} = \frac{r_\pi + R_B}{\beta + 1} \approx \frac{1}{g_m} + \frac{R_B}{\beta + 1}$$





## Example 5.39

Determine the impedance seen at the emitter of  $Q_2$  in Fig. 5.76(a) if the two transistors are identical and  $V_A = \infty$ .

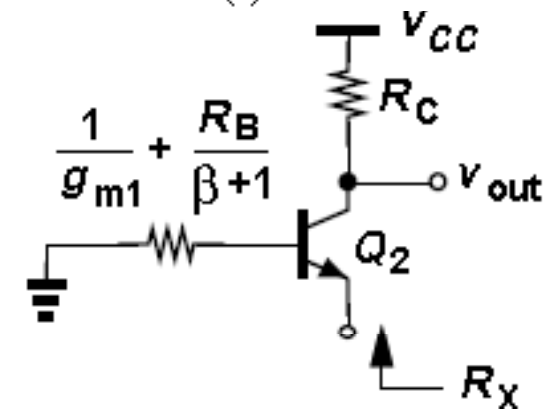
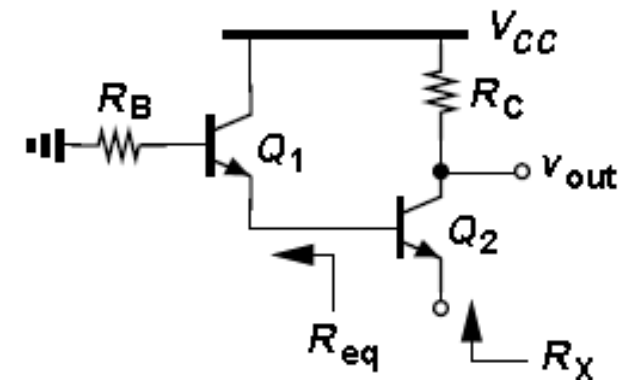
### Solution

The circuit employs  $Q_2$  as a common-base device, but with its base tied to a finite series resistance equal to that seen at the emitter of  $Q_1$ . Thus, we must first obtain the equivalent resistance  $R_{eq}$ , which from Eq. (5.291) is simply equal to

$$R_{eq} = \frac{1}{g_{m1}} + \frac{R_B}{\beta + 1}.$$

Reducing the circuit to that shown in Fig. 5.76(b), we have

$$\begin{aligned} R_X &= \frac{1}{g_{m2}} + \frac{R_{eq}}{\beta + 1} \\ &= \frac{1}{g_{m2}} + \frac{1}{\beta + 1} \left( \frac{1}{g_{m1}} + \frac{R_B}{\beta + 1} \right). \end{aligned}$$

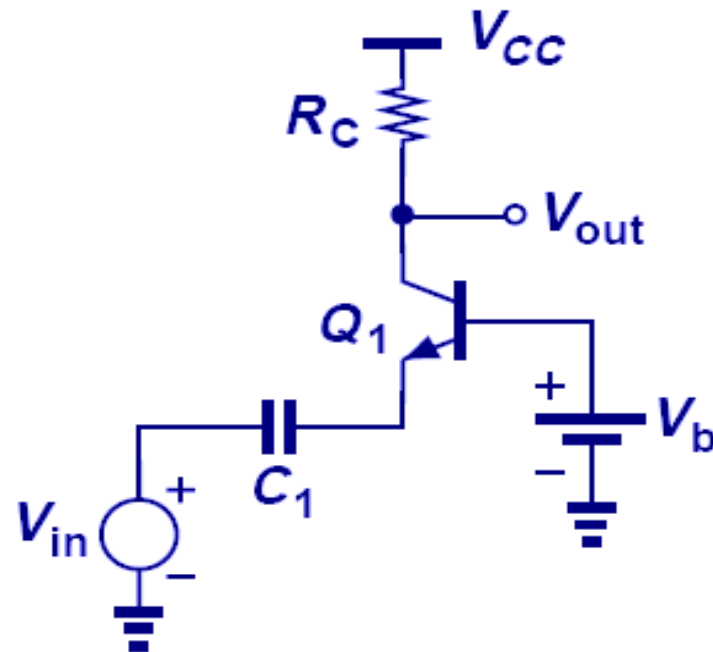


## Example 5.40 bad CB biasing

The student in Example 5.31 decides to incorporate ac coupling at the input of a CB stage to ensure the bias is not affected by the signal source, drawing the design as shown in Fig. 5.77. Explain why this circuit does not work.

### Solution

Unfortunately, the design provides no dc path for the emitter current of  $Q_1$ , forcing a zero bias current and hence a zero transconductance. The situation is similar to the CE counterpart in Example 5.5, where no base current can be supported.

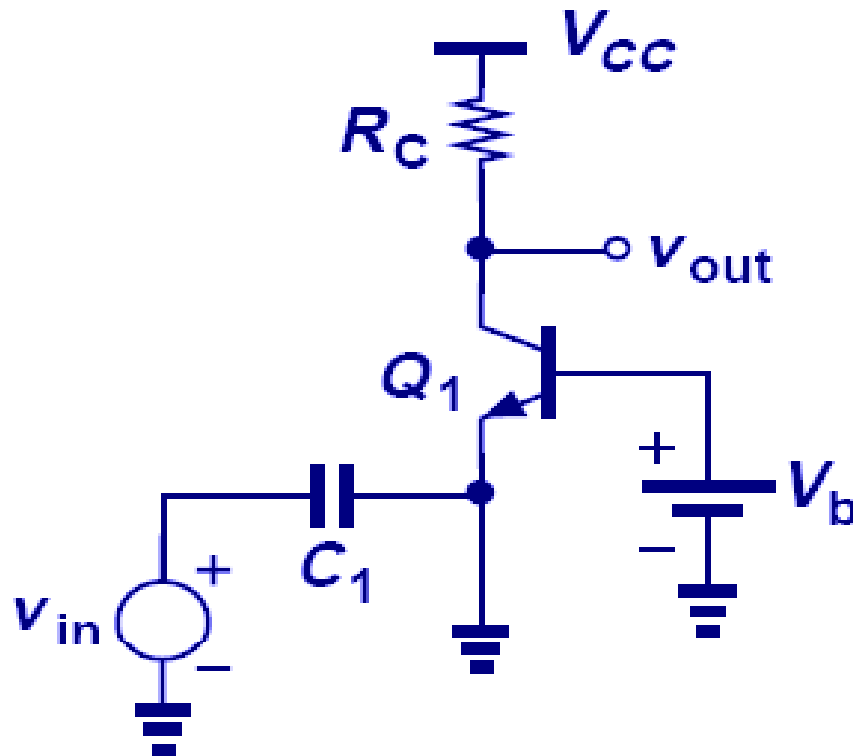


## Example 5.41 Still No Good

Somewhat embarrassed, the student quickly connects the emitter to ground so that  $V_{BE} = V_b$  and a reasonable collector current can be established (Fig. 5.78). Explain why “haste makes waste.”

### Solution

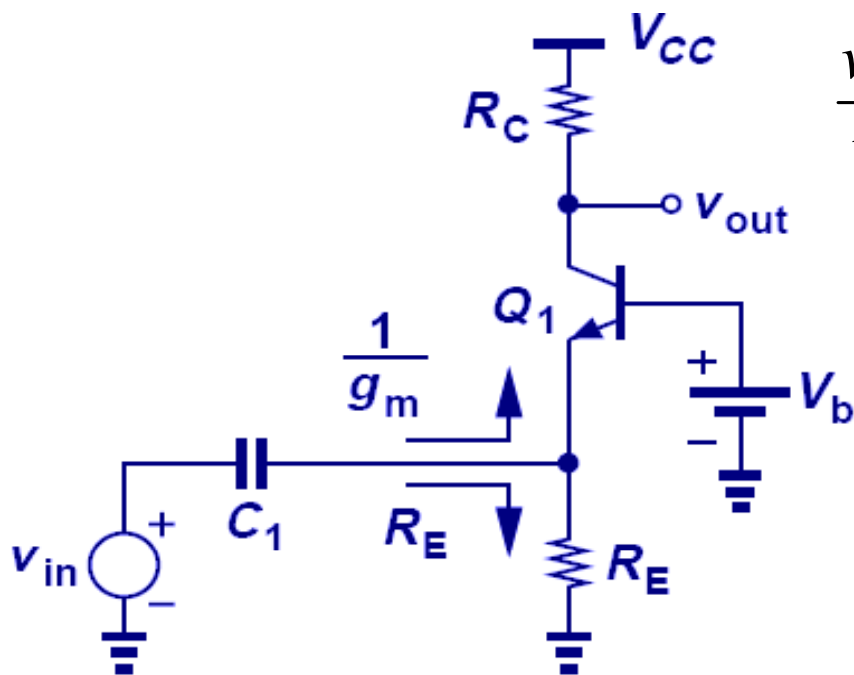
As with Example 5.6, the student has shorted the *signal* to ac ground. That is, the emitter voltage is equal to zero regardless of the value of  $v_{in}$ , yielding  $v_{out} = 0$ .



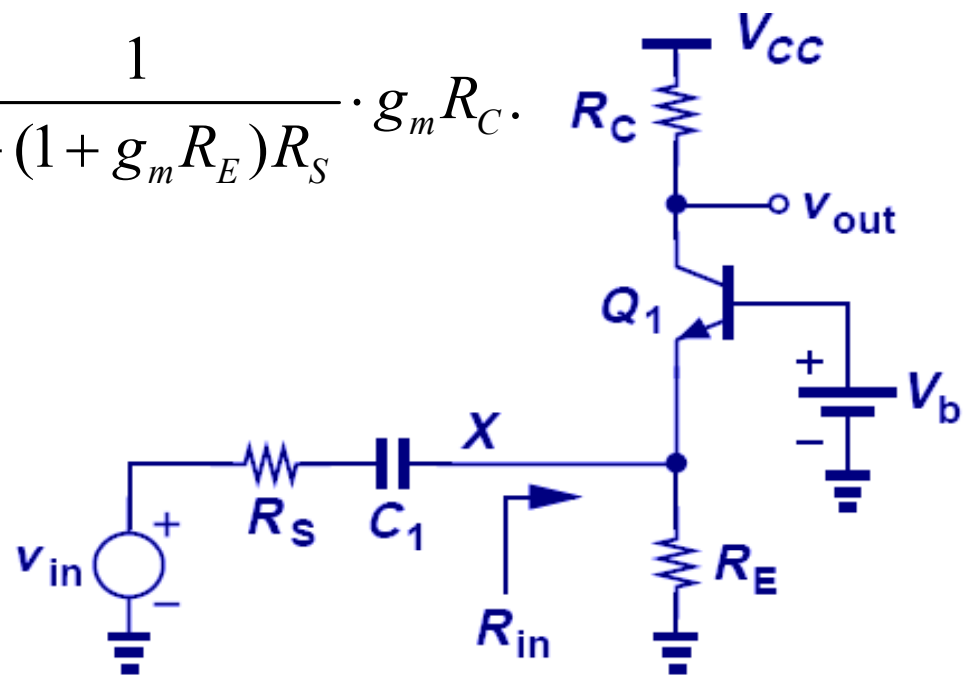
# Proper Biasing for CB Stage

- $R_E$  provides a path for the bias current at the cost of lowering the input impedance.
- $R_{in}$  now consists of two *parallel* components: (1)  $1/g_m$ , seen looking “up” into the emitter (with the base at ac ground) and (2)  $R_E$ , seen looking “down.”

$$R_{in} = \frac{1}{g_m} \parallel R_E. \quad \frac{v_X}{v_{in}} = \frac{R_{in}}{R_{in} + R_S} = \frac{\frac{1}{g_m} \parallel R_E}{\frac{1}{g_m} \parallel R_E + R_S} = \frac{1}{1 + (1 + g_m R_E) R_S}. \quad v_{out}/v_X = g_m R_C$$

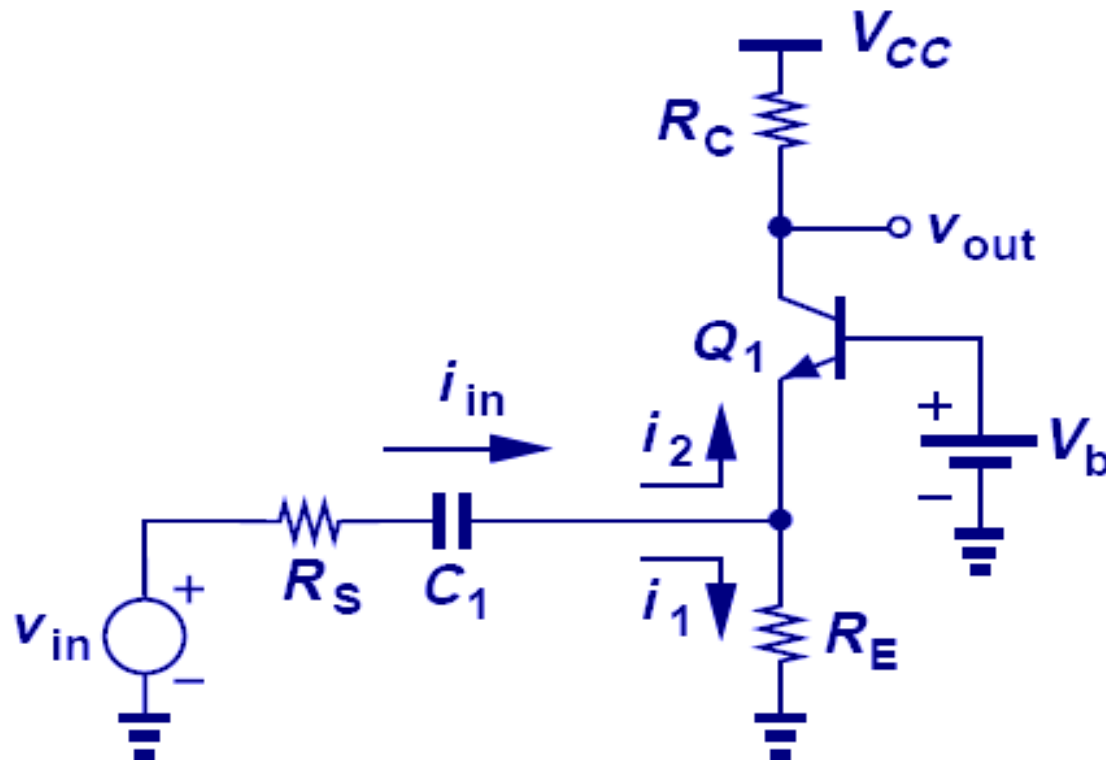


$$\frac{v_{out}}{v_{in}} = \frac{1}{1 + (1 + g_m R_E) R_S} \cdot g_m R_C.$$



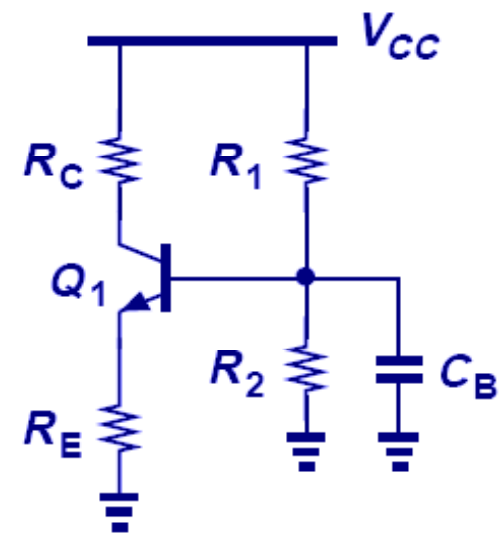
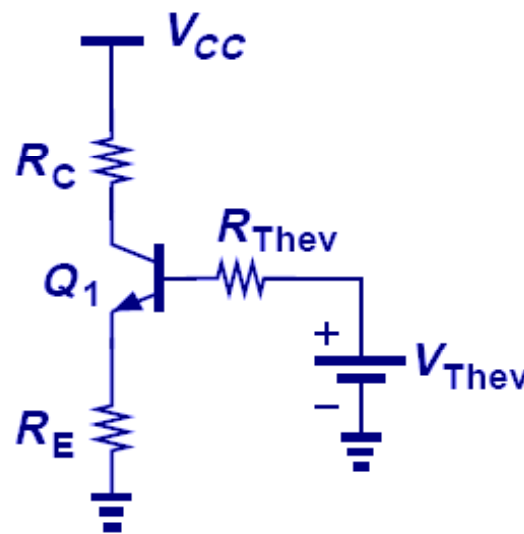
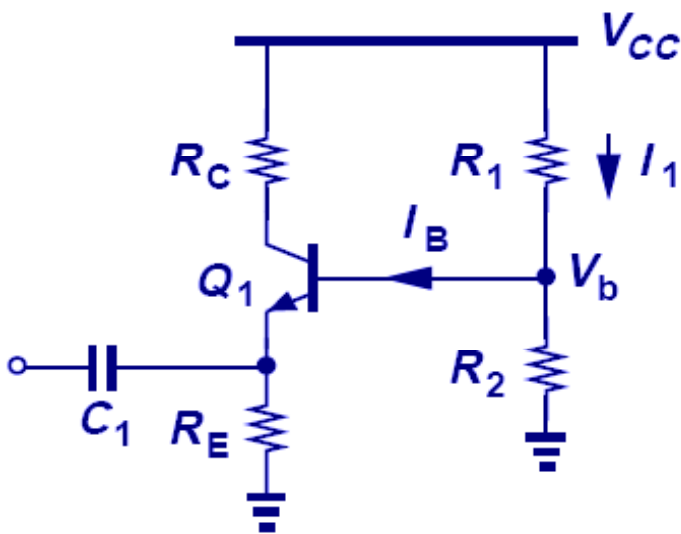
## Reduction of Input Impedance Due to $R_E$

- The reduction of input impedance due to  $R_E$  is bad because it shunts part of the input current,  $i_1$ , to ground instead of to  $Q_1$  (and  $R_C$ ).
- For  $R_E$  to affect the input impedance negligibly, we must have  $R_E \gg 1/g_m$ , and hence  $I_C R_E \gg V_T$
- That is, the dc voltage drop across  $R_E$  must be much greater than  $V_T$ .



# Creation of $V_b$

- Resistive divider lowers the gain.
- To remedy this problem, a '**bypass capacitor,  $C_B$** ' is inserted from base to ground to short out the resistor divider at the frequency of interest.



ensure  $I_1 \gg I_B$  to minimize sensitivity to  $\beta$ , so 
$$V_b \approx \frac{R_2}{R_1 + R_2} V_{CC}.$$

## Example 5.42

Design a CB stage (Fig. 5.82) for a voltage gain of 10 and an input impedance of  $50\ \Omega$ . Assume  $I_S = 5 \times 10^{-16}\ \text{A}$ ,  $V_A = \infty$ ,  $\beta = 100$ , and  $V_{CC} = 2.5\ \text{V}$ .

### Solution

We begin by selecting  $R_E \gg 1/g_m$ , e.g.,  $R_E = 500\ \Omega$ , to minimize the undesirable effect of  $R_E$ . Thus,

$$R_{in} \approx \frac{1}{g_m} = 50\ \Omega$$

and hence

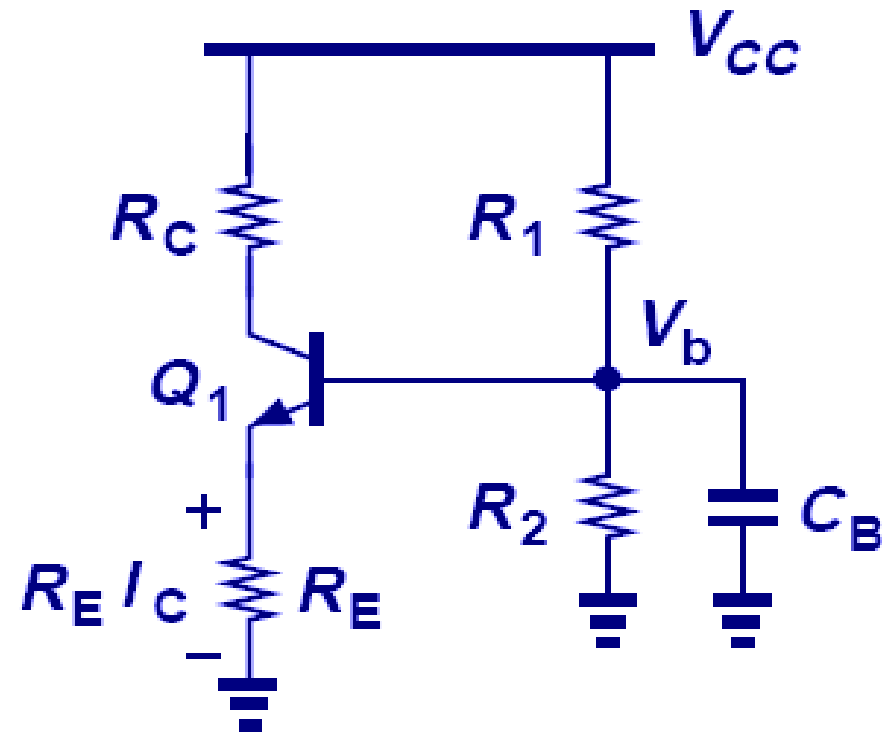
$$I_C = 0.52\ \text{mA}.$$

If the base is bypassed to ground

$$A_v = g_m R_C,$$

yielding

$$R_C = 500\ \Omega.$$



$$\frac{v_{out}}{v_{in}} \approx \frac{R_C}{R_E + \frac{R_B}{\beta + 1} + \frac{1}{g_m}}$$

## Example 5.42 (cnt'd)

We now determine the base bias resistors. Since the voltage drop across  $R_E$  is equal to  $500 \Omega \times 0.52 \text{ mA} = 260 \text{ mV}$  and  $V_{BE} = V_T \ln(I_C/I_S) = 899 \text{ mV}$ , we have

$$V_b = I_E R_E + V_{BE} = 1.16 \text{ V}.$$

Selecting the current through  $R_1$  and  $R_2$  to be  $10I_B = 52 \mu\text{A}$ , we write

$$V_b \approx \frac{R_2}{R_1 + R_2} V_{CC} \cdot \quad \frac{V_{CC}}{R_1 + R_2} = 52 \mu\text{A}.$$

It follows that

$$R_1 = 25.8 \text{ k}\Omega \quad R_2 = 22.3 \text{ k}\Omega.$$

The last step in the design is to compute the required values of  $C_I$  and  $C_B$  according to the signal frequency. For example, if the amplifier is used at the receiver front end of a 900-MHz cellphone, the impedances of  $C_I$  and  $C_B$  must be sufficiently small at this frequency. Appearing in series with the emitter of  $Q_I$ ,  $C_I$  plays a role similar to  $R_S$  in Fig. 5.67 and Eq. (5.271). Thus, its impedance,  $|C_I \omega|^{-1}$ , must remain much less than  $1/g_m = 50 \Omega$ . In high-performance applications such as cellphones, we may choose  $|C_I \omega|^{-1} = (1/g_m)/20$  to ensure negligible gain degradation.



## Example 5.42 (cnt'd)

Consequently, for  $\omega = 2\pi \times 900$  MHz:

$$C_1 = \frac{20g_m}{\omega} = 71\text{pF.}$$

Since the impedance of  $C_B$  appears in series with the base and plays a role similar to the term  $R_B/(\beta+1)$  in Eq. (5.286), we require that

$$\frac{1}{\beta+1} \left| \frac{1}{C_B \omega} \right| = \frac{1}{20} \frac{1}{g_m}$$

and hence

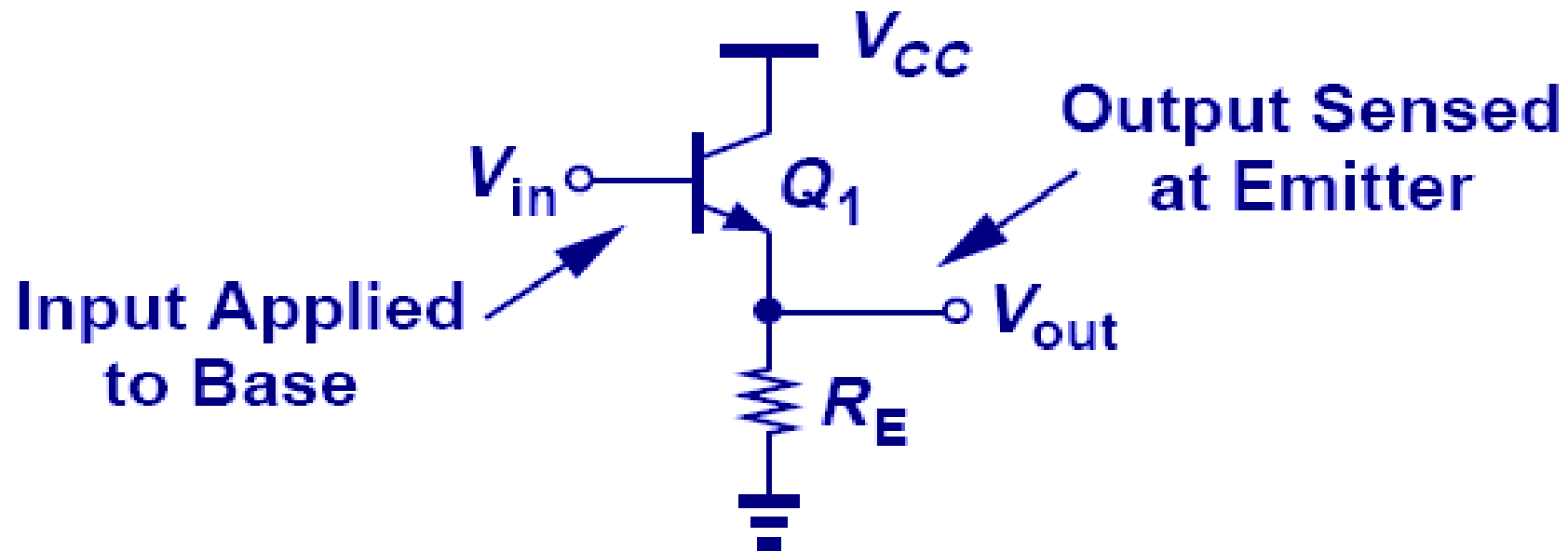
$$C_B = 0.7\text{pF.}$$

(A common mistake is to make the impedance of  $C_B$  negligible with respect to  $R_1 \parallel R_2$  rather than with respect to  $1/g_m$ .)

$$\frac{v_{out}}{v_{in}} \approx \frac{R_C}{R_E + \frac{R_B}{\beta+1} + \frac{1}{g_m}}$$

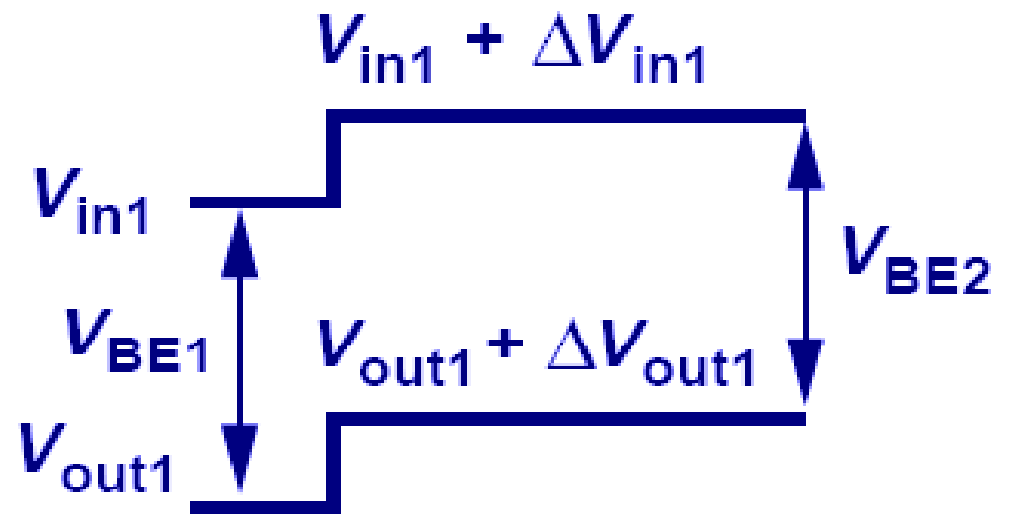
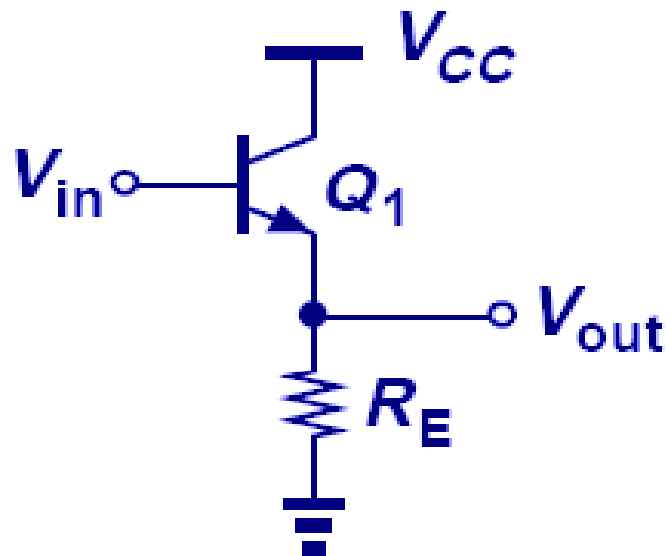
# Emitter Follower (Common Collector Amplifier)

- The emitter follower senses the input at the base of the transistor and produces the output at the emitter. The collector is tied to  $V_{CC}$  and hence ac ground.



# Emitter Follower Core

- When the input is increased by  $\Delta V$ , output is also increased by an amount that is less than  $\Delta V$  due to the increase in collector current and hence the increase in potential drop across  $R_E$ .
- However the absolute values of input and output differ by a  $V_{BE}$ .
- $V_{out}$  is always lower than  $V_{in}$  by an amount equal to  $V_{BE}$ , and the circuit is said to provide “*level shift.*”
- $\Delta V_{out} < \Delta V_{in}$  implies that the follower exhibits a voltage gain less than unity.



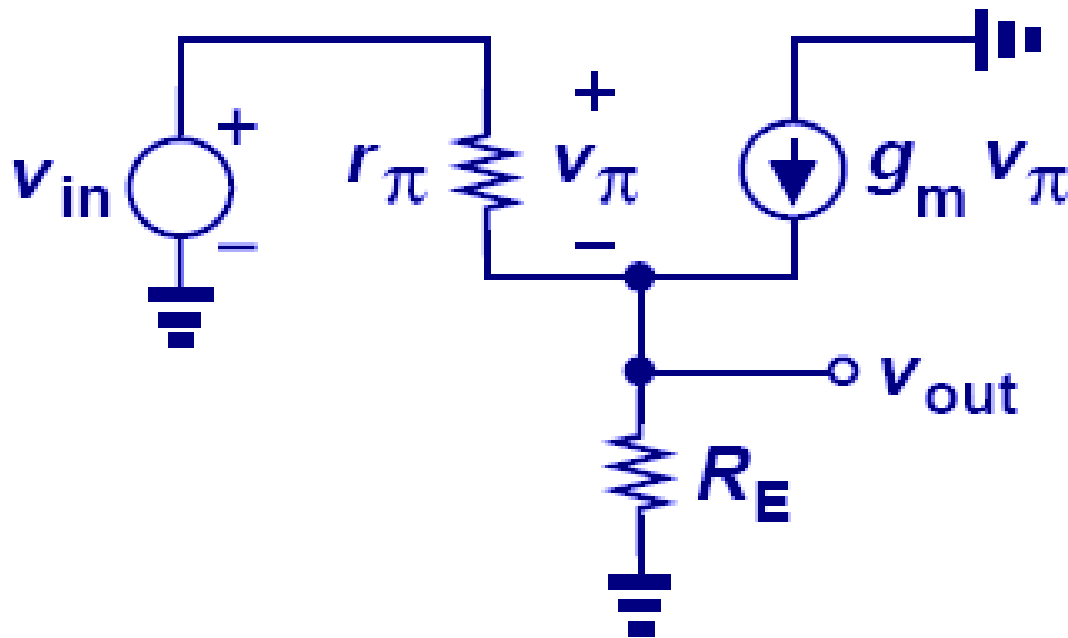
$$\Delta V_{out} < \Delta V_{in} \quad V_{BE2} > V_{BE1}$$

# Small-Signal Model of Emitter Follower

➤ As shown, the voltage gain is less than unity and positive.  $V_A = \infty$

$$\frac{v_\pi}{r_\pi} + g_m v_\pi = \frac{v_{out}}{R_E} \quad v_\pi = \frac{r_\pi}{\beta + 1} \cdot \frac{v_{out}}{R_E}$$

$$v_{in} = v_\pi + v_{out} \quad \frac{v_{out}}{v_{in}} = \frac{1}{1 + \frac{r_\pi}{\beta + 1} \cdot \frac{1}{R_E}} \approx \frac{R_E}{R_E + \frac{1}{g_m}}$$



## Example 5.43 Unity-Gain Emitter Follower

In integrated circuits, the follower is typically realized as shown in Fig. 5.86. Determine the voltage gain if the current source is ideal and  $V_A = \infty$ .

### Solution

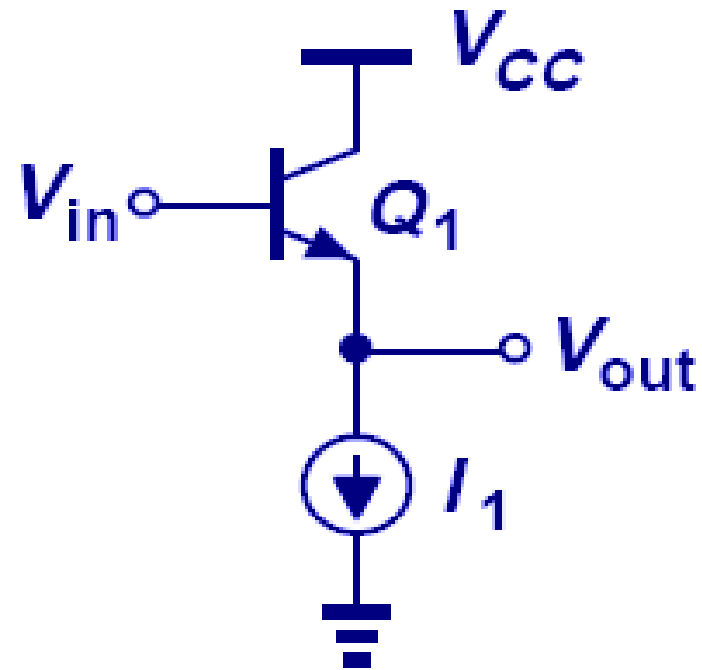
Since the emitter resistor is replaced with an ideal current source, the value of  $R_E$  in Eq. (5.321) must tend to infinity, yielding

$$A_v = 1$$

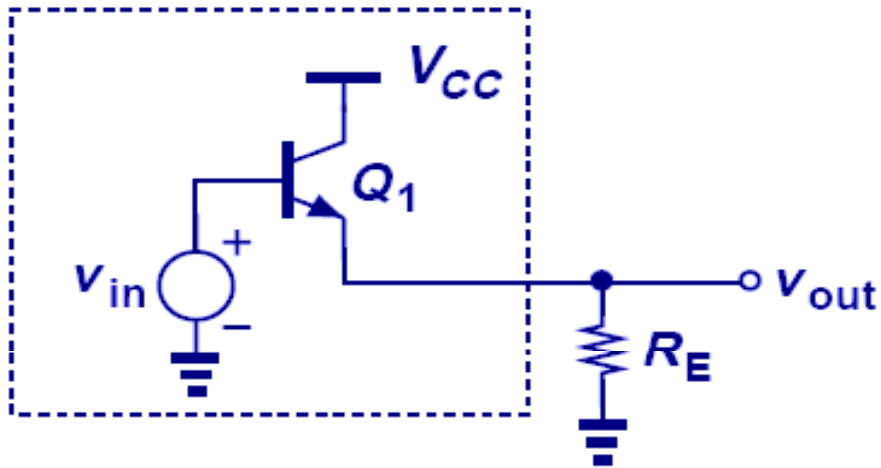
This result can also be derived intuitively.

A constant current source flowing through  $Q_1$  requires that  $V_{BE} = V_T \ln(I_C/I_S)$  remain constant.

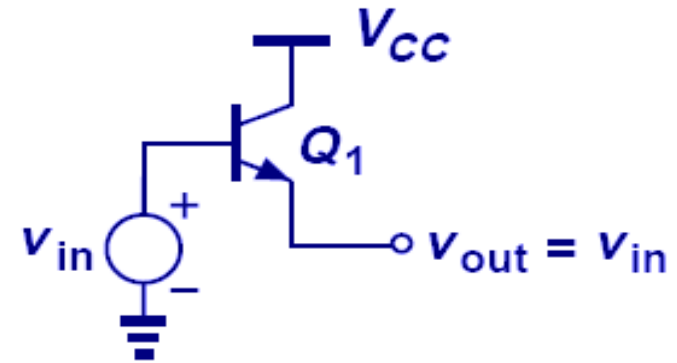
Writing  $V_{out} = V_{in} - V_{BE}$ , we recognize that  $V_{out}$  exactly follows  $V_{in}$  if  $V_{BE}$  is constant.



# Analysis of Emitter Follower as a Voltage Divider

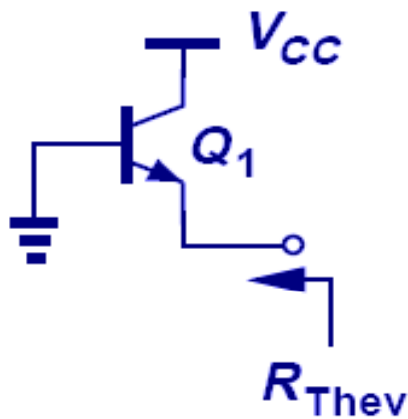


(a)

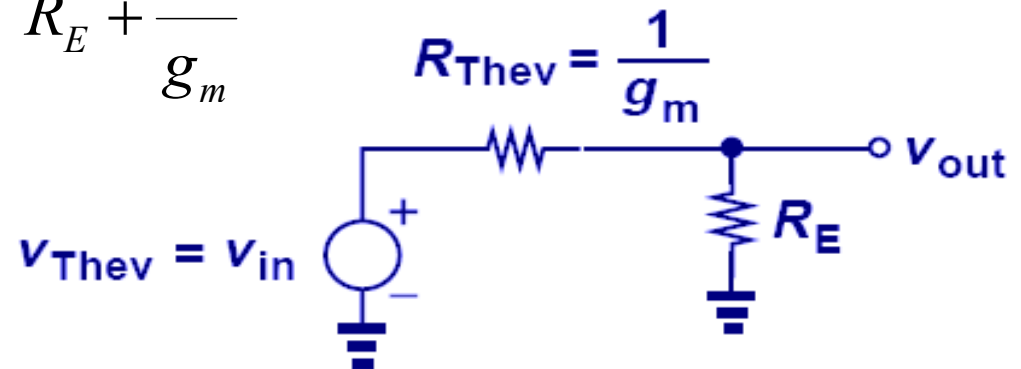


(b)

$$\frac{v_{out}}{v_{in}} \approx \frac{R_E}{R_E + \frac{1}{g_m}}$$



(c)



(d)

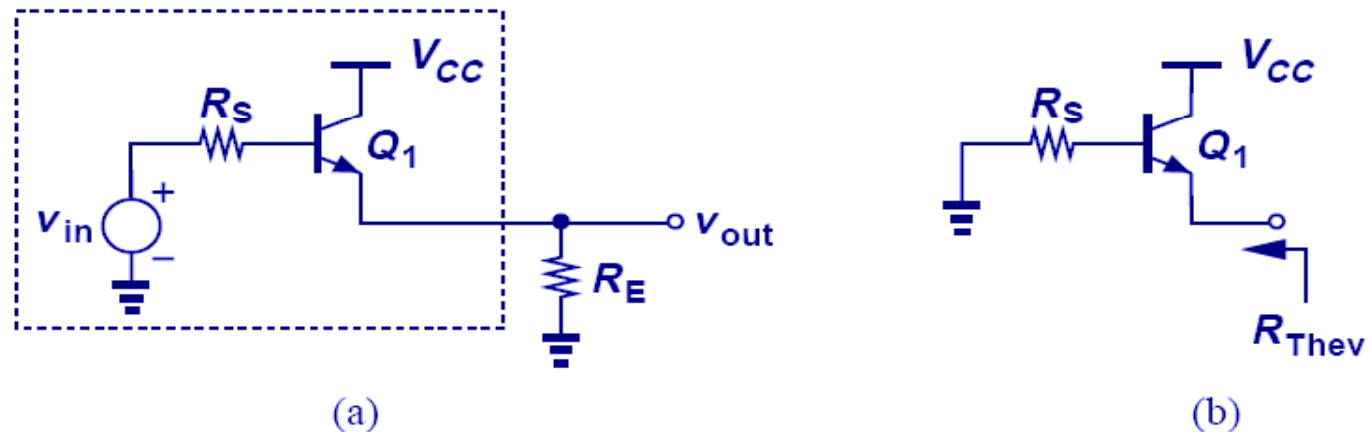
## Example 5.44 CC with $R_S$

Determine the voltage gain of a follower driven by a finite source impedance of  $R_S$  [Fig. 5.88(a)] if  $V_A = \infty$ .

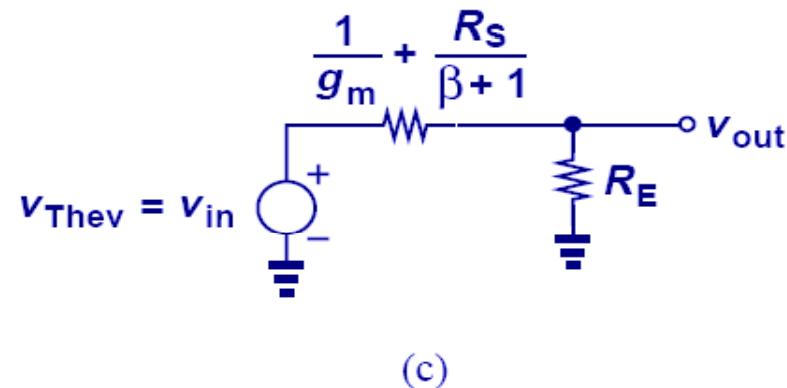
### Solution

We model  $v_{in}$ ,  $R_S$ , and  $Q_1$  by a Thevenin equivalent. The reader can show that the open-circuit voltage is equal to  $v_{in}$ . Furthermore, the Thevenin resistance [Fig. 5.88(b)] is given by (5.291) as  $R_S/(\beta+1) + 1/g_m$ . Figure 5.88(c) depicts the equivalent circuit, revealing that

$$\frac{v_{out}}{v_{in}} = \frac{R_E}{R_E + \frac{R_S}{\beta+1} + \frac{1}{g_m}}.$$

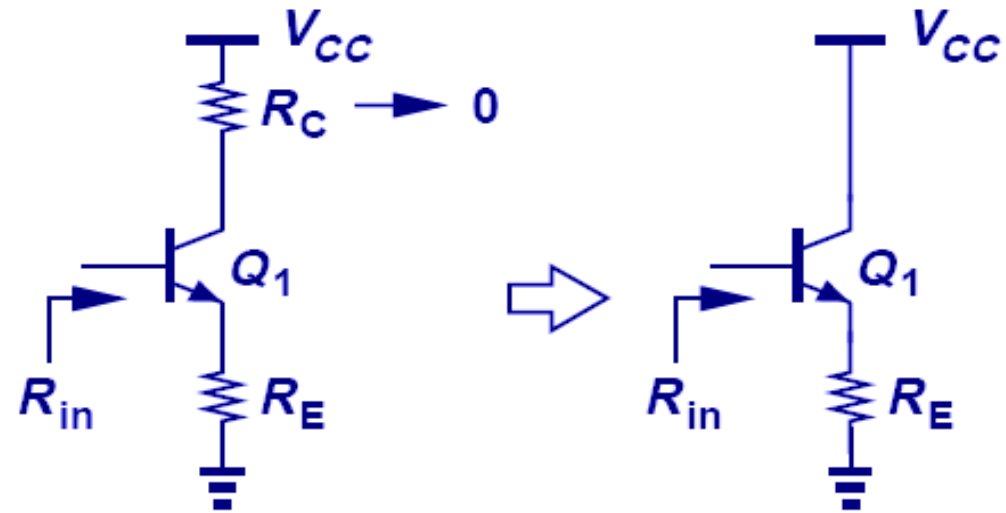
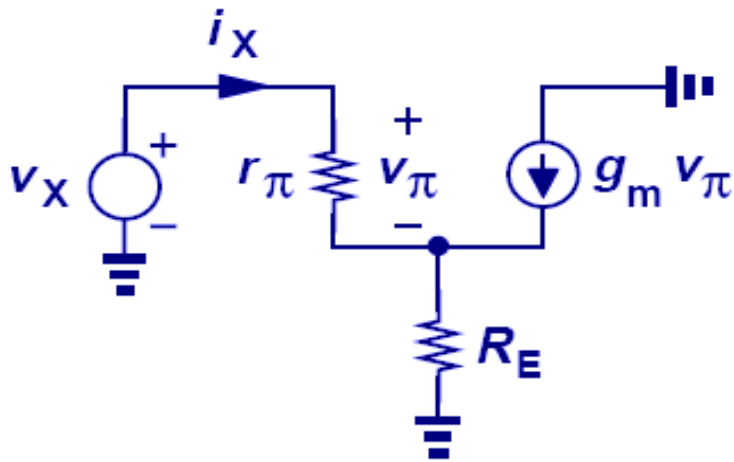


This result can also be obtained by solving the small-signal equivalent circuit of the follower.



# Input Impedance of Emitter Follower

- The input impedance of emitter follower is exactly the same as that of CE stage with emitter degeneration. This is not surprising because the input impedance of CE with emitter degeneration does not depend on the collector resistance.
- The follower “transforms” the load resistor,  $R_E$ , to a much larger value, thereby serving as an efficient “*buffer*.”



$$\begin{aligned}
 v_X &= v_\pi + (i_X + g_m v_\pi) R_E \\
 &= i_X r_\pi + (i_X + g_m i_X r_\pi) R_E,
 \end{aligned}$$

$$\frac{v_X}{i_X} = r_\pi + (1 + \beta) R_E.$$



## Example 5.45 Emitter Follower as Buffer

A CE stage exhibits a voltage gain of 20 and an output resistance of 1 k $\Omega$ . Determine the voltage gain of the CE amplifier if (a) The stage drives an 8- $\Omega$  speaker directly. (b) An emitter follower biased at a current of 5 mA is interposed between the CE stage and the speaker. Assume  $\beta = 100$ ,  $V_A = \infty$ , and the follower is biased with an ideal current source.

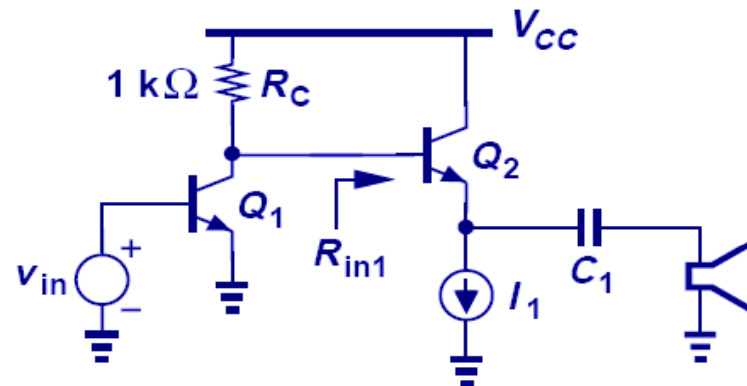
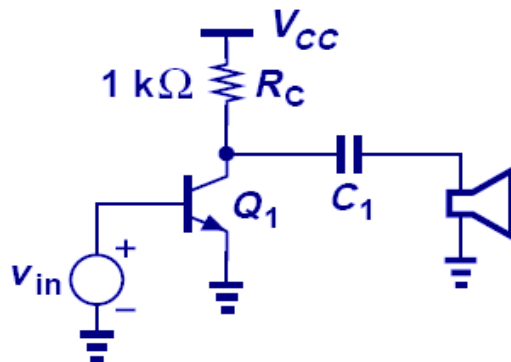
### Solution

(a) As depicted in Fig. 5.90(a), the equivalent resistance seen at the collector is now given by the parallel combination of  $R_C$  and the speaker impedance,  $R_{SP}$ , reducing the gain from 20 to  $20 \times (R_C \parallel 8\Omega) / R_C = 0.159$ . The voltage gain therefore degrades drastically.

(b) From the arrangement in Fig. 5.90(b), we note that

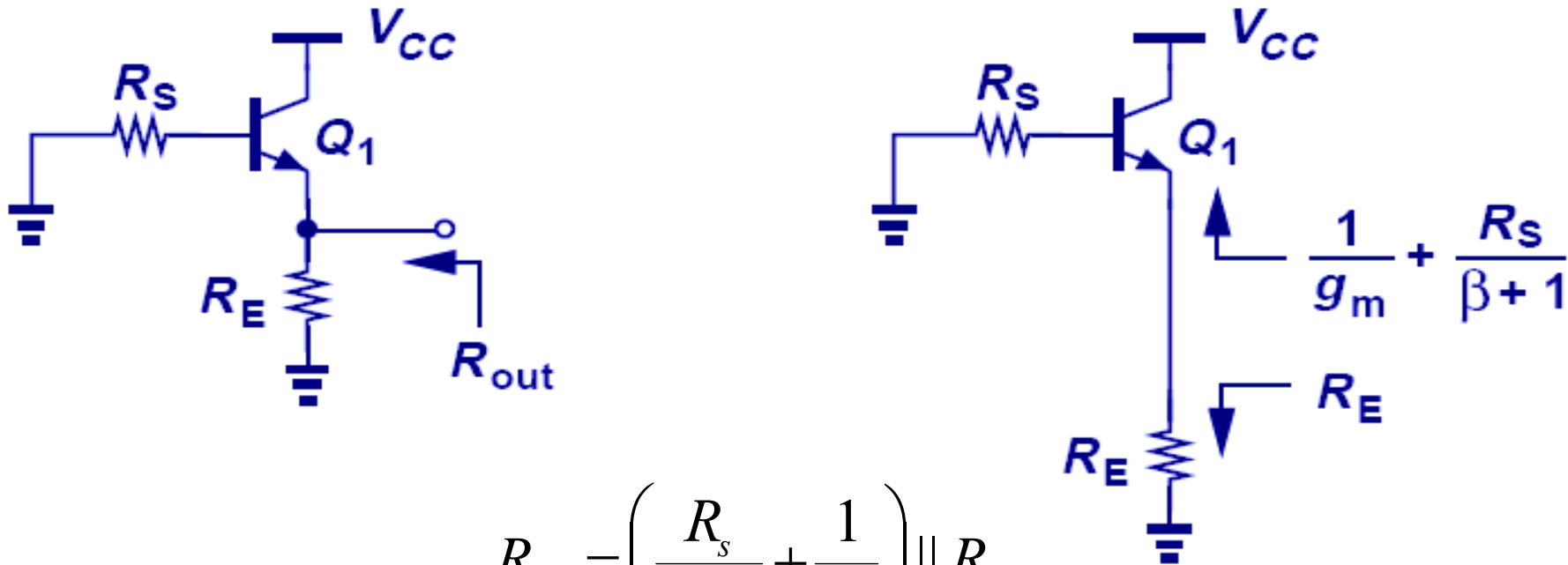
$$R_{in1} = r_{\pi 2} + (\beta + 1)R_{sp} = 1058\Omega.$$

Thus, the voltage gain of the CE stage drops from 20 to  $20 \times (R_C \parallel R_{in1}) / R_C = 10.28$ , a substantial improvement over case (a).



# Output Impedance of Emitter Follower

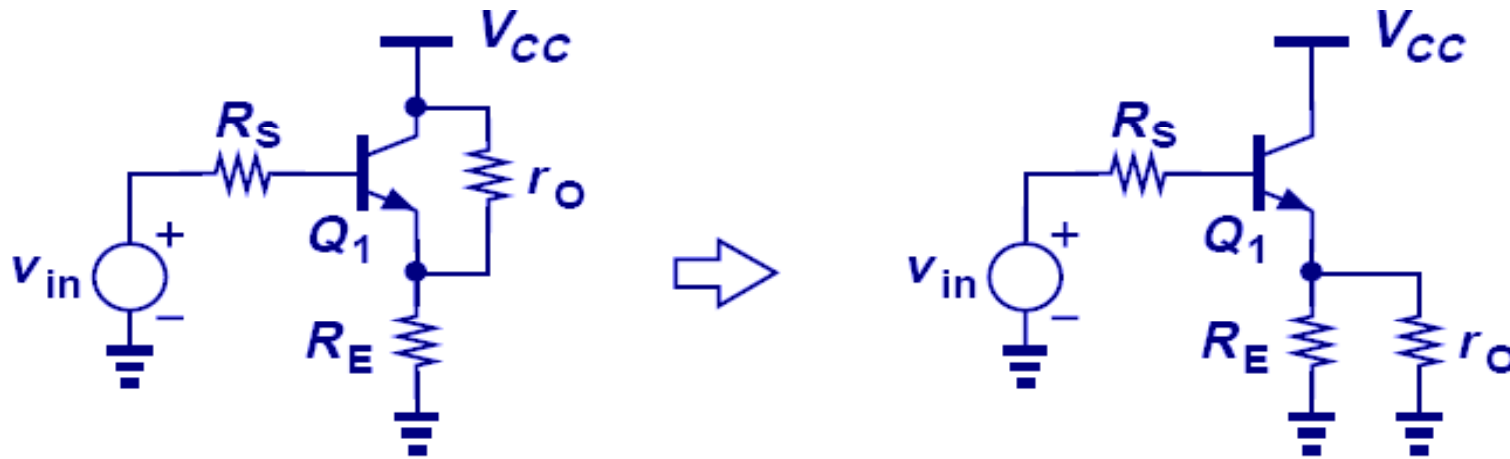
- $R_{out}$  can be viewed as the parallel combination of two components: one seen looking “up” into the emitter,  $R_s/(\beta+1) + 1/g_m$ , and another looking “down” into  $R_E$ .
- Emitter follower lowers the source impedance by a factor of  $\beta+1$ , improved driving capability.
- Good “**voltage buffer**” because it displays a high input impedance (like a voltmeter) and a low output impedance (like a voltage source).



$$R_{out} = \left( \frac{R_s}{\beta+1} + \frac{1}{g_m} \right) \parallel R_E$$

# Emitter Follower with Early Effect

- Since  $r_o$  is in parallel with  $R_E$ , its effect can be easily incorporated into voltage gain and input and output impedance equations.



$$A_v = \frac{R_E \parallel r_o}{R_E \parallel r_o + \frac{R_S}{\beta + 1} + \frac{1}{g_m}}$$

$$R_{in} = r_\pi + (\beta + 1)(R_E \parallel r_o)$$

$$R_{out} = \left( \frac{R_S}{\beta + 1} + \frac{1}{g_m} \right) \parallel R_E \parallel r_o$$

## Example 5.46

Determine the small-signal properties of an emitter follower using an ideal current source (as in Example 5.43) but with a finite source impedance  $R_S$ .

### Solution

Since  $R_E = \infty$ , we have

$$A_v = \frac{r_o}{r_o + \frac{R_S}{\beta + 1} + \frac{1}{g_m}}$$

$$R_{in} = r_\pi + (\beta + 1)r_o \qquad R_{out} = \left( \frac{R_S}{\beta + 1} + \frac{1}{g_m} \right) \parallel r_o.$$

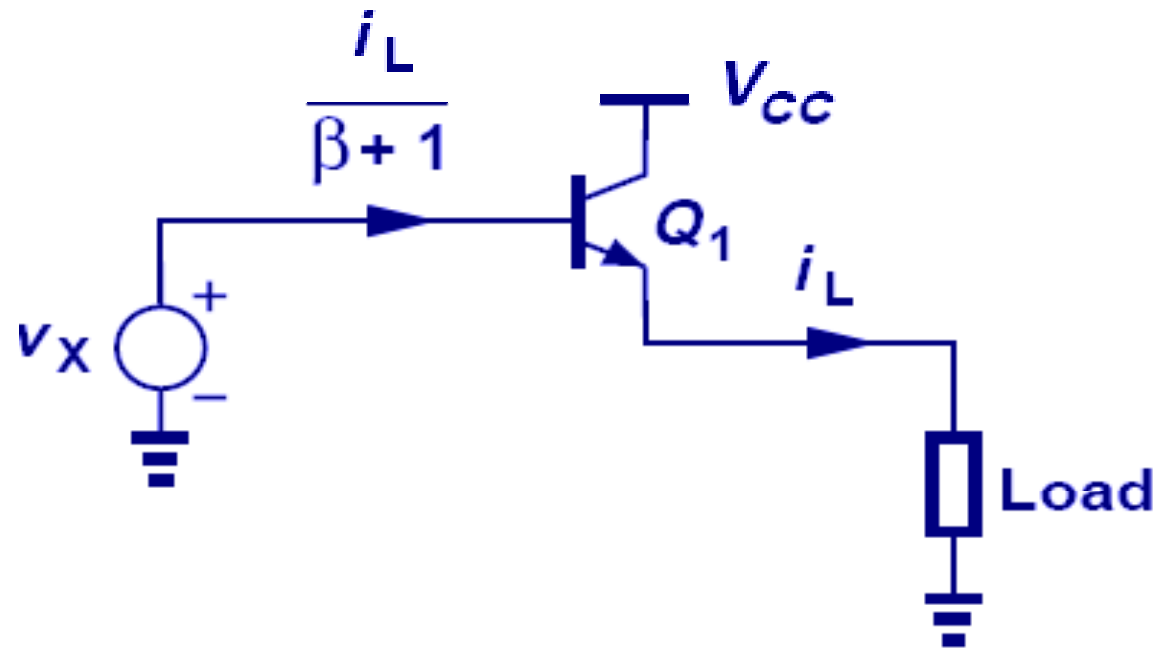
Also,  $g_m r_o \gg 1$ , and hence

$$A_v \approx \frac{r_o}{r_o + \frac{R_S}{\beta + 1}} \qquad R_{in} \approx (\beta + 1)r_o.$$

We note that  $A_v$  approaches unity if  $R_S \ll (\beta + 1)r_o$ , a condition typically valid.

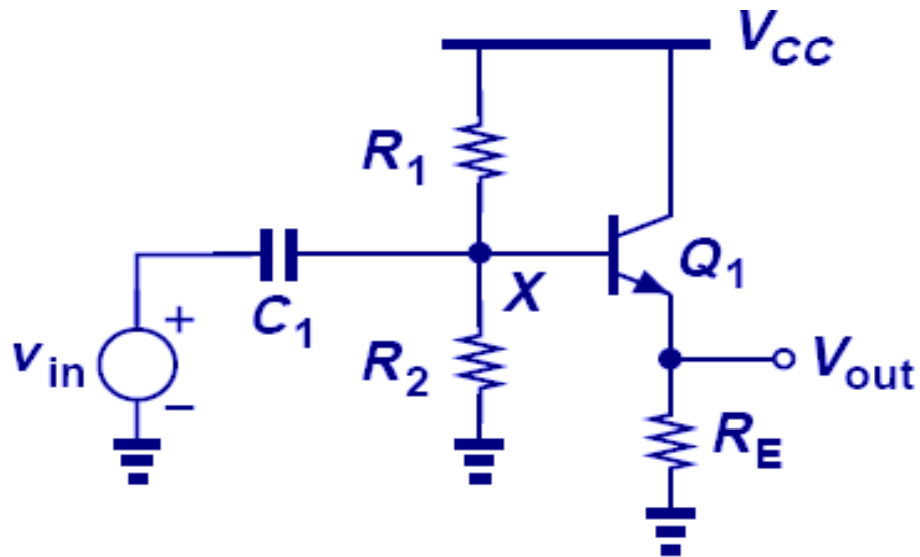
# Current Gain

- There is a current gain of  $(\beta+1)$  from base to emitter.
- For a current  $i_L$  delivered to the load, the follower draws only  $i_L/(\beta+1)$  from the source voltage.
- Effectively speaking, the load resistance is multiplied by  $(\beta+1)$  as seen from the base.

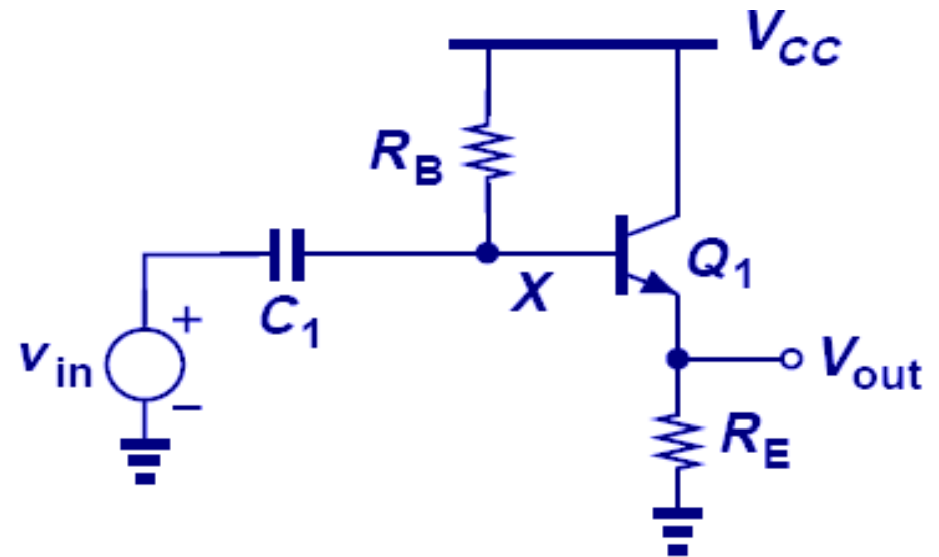


# Emitter Follower with Biasing

- A biasing technique similar to that of CE stage can be used for the emitter follower.
- Also,  $V_b$  can be close to  $V_{CC}$  because the collector is also at  $V_{CC}$ .



the current flowing through  $R_1$  and  $R_2$  is chosen to be much greater than the base current.



$R_B I_B$  is chosen much less than the voltage drop across  $R_E$ , thus lowering the sensitivity to  $\beta$

## Example 5.47 Supply-Independent Biasing

The follower of Fig. 5.94(b) employs  $R_B = 10 \text{ k}\Omega$  and  $R_E = 1 \text{ k}\Omega$ . Calculate the bias current and voltages if  $I_S = 5 \times 10^{-16} \text{ A}$ ,  $\beta = 100$ , and  $V_{CC} = 2.5 \text{ V}$ . What happens if  $\beta$  drops to 50?

### Solution

To determine the bias current, we follow the iterative procedure described in Section 5.2.3. Writing a KVL through  $R_B$ , the base-emitter junction, and  $R_E$  gives

$$\frac{R_B I_C}{\beta} + V_{BE} + R_E I_C = V_{CC},$$

which, with  $V_{BE} \approx 800 \text{ mV}$ , leads to  $I_C = 1.545 \text{ mA}$ .

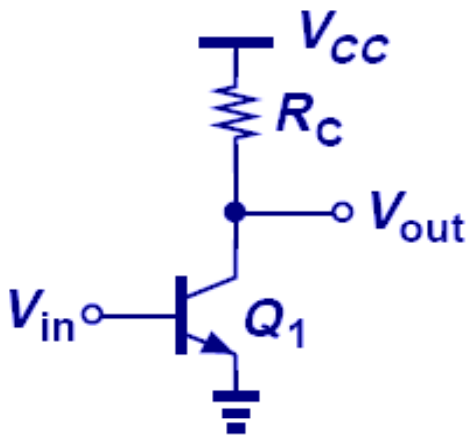
It follows that  $V_{BE} = V_T \ln(I_C/I_S) \approx 748 \text{ mV}$ . Using this value in Eq. (5.338), we have  $I_C = 1.593 \text{ mA}$ , close to  $1.545 \text{ mA}$  and hence relatively accurate. Under this condition,  $I_B R_B = 159 \text{ mV}$  whereas  $I_C R_E = 1.593 \text{ V}$ .

Since  $I_B R_B \ll I_C R_E$ , we expect that variation of  $\beta$  and hence  $I_B R_B$  negligibly affects the voltage drop across  $R_E$  and hence the emitter and collector currents. As a rough estimate, for  $\beta = 50$ ,  $I_B R_B$  is doubled ( $\approx 318 \text{ mV}$ ), reducing the drop across  $R_E$  by  $159 \text{ mV}$ . That is,  $I_E = (1.593 \text{ V} - 0.159 \text{ V})/1 \text{ k}\Omega = 1.434 \text{ mA}$ , implying that a twofold change in  $\beta$  leads to a change in the collector current. The reader is encouraged to repeat the above iterations with  $\beta = 50$  and determine the exact current.

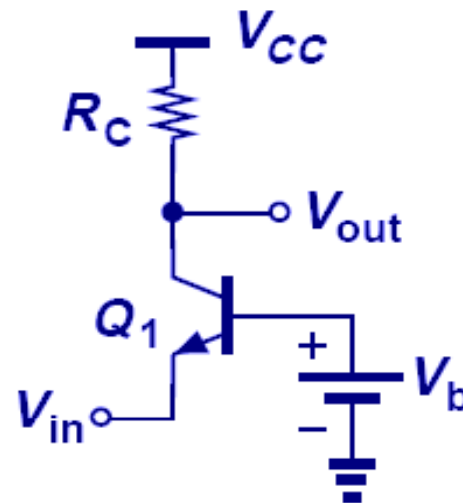
# Summary of Amplifier Topologies

- The three amplifier topologies studied so far have different properties and are used on different occasions.
- CE and CB have voltage gain with magnitude greater than one, while follower's voltage gain is at most one.

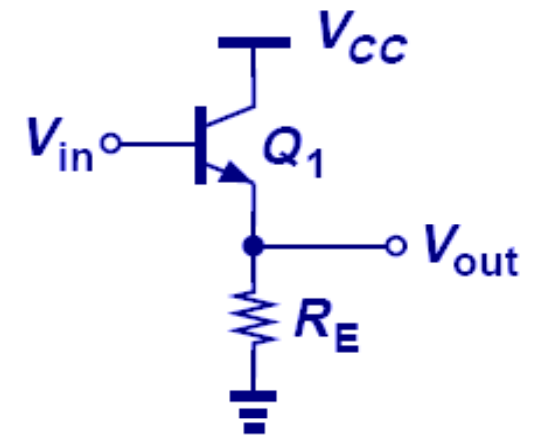
CE Stage



CB Stage



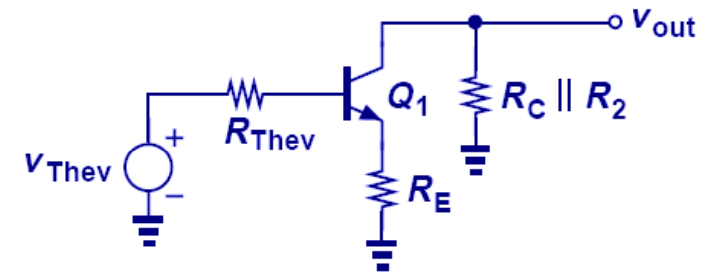
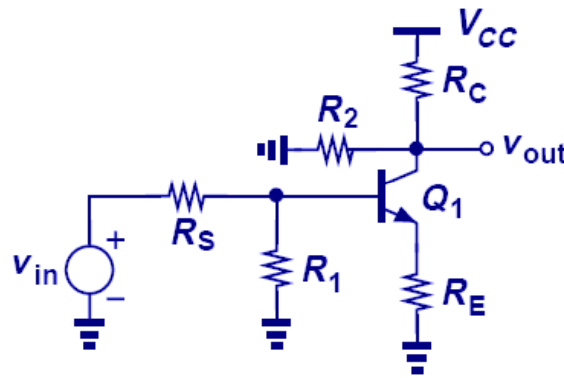
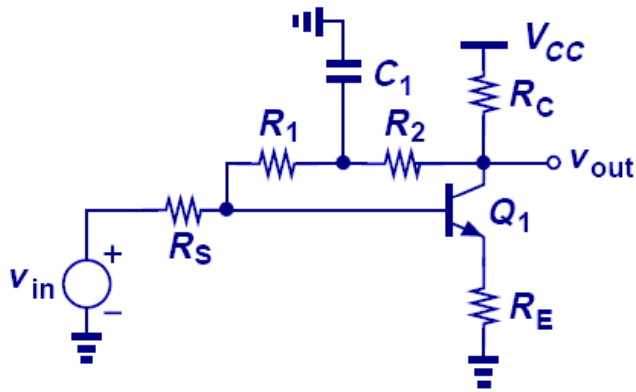
Follower





# Amplifier Example I

- The keys in solving this problem are recognizing the AC ground between  $R_1$  and  $R_2$ , and Thevenin transformation of the input network.



$$\frac{v_{out}}{v_{Thev}} = - \frac{R_2 \parallel R_C}{\frac{R_{Thev}}{\beta + 1} + \frac{1}{g_m} + R_E}.$$

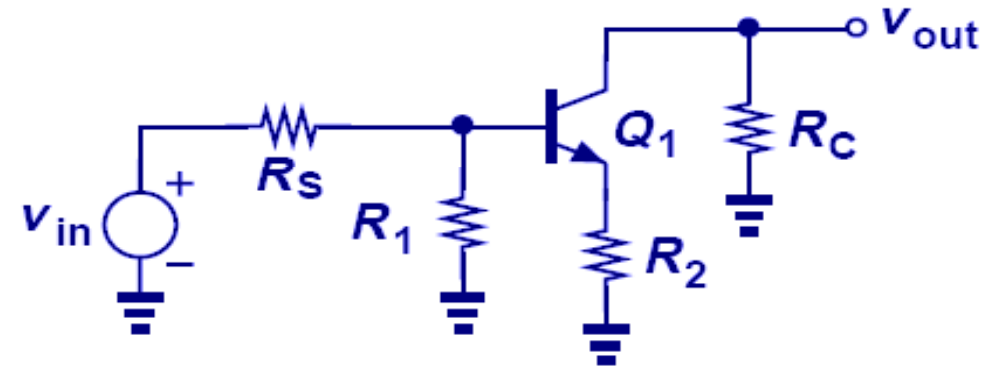
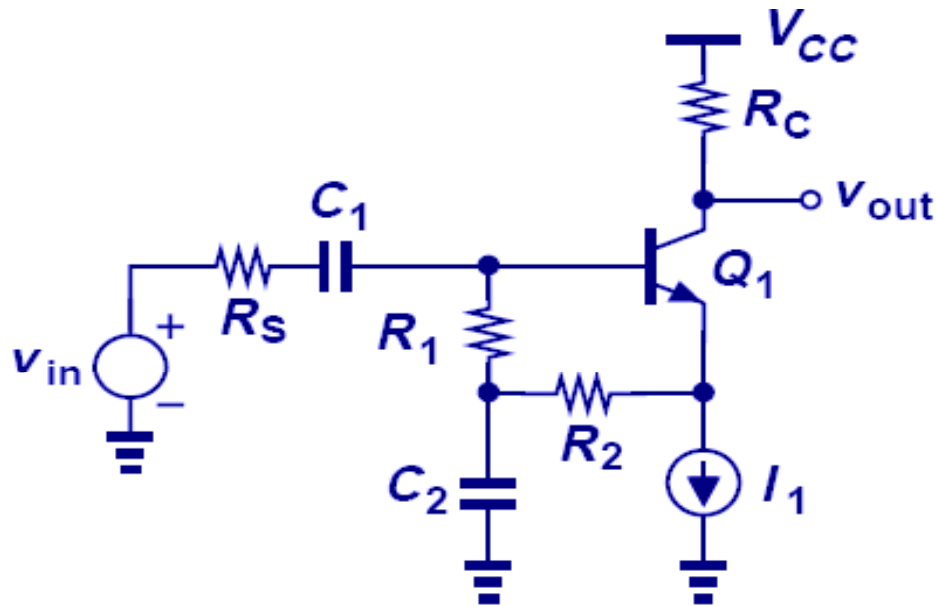
$$v_{Thev} = \frac{R_1}{R_1 + R_S} v_{in}$$

$$R_{Thev} = R_1 \parallel R_S.$$

$$\frac{v_{out}}{v_{in}} = - \frac{R_2 \parallel R_C}{\frac{R_1 \parallel R_S}{\beta + 1} + \frac{1}{g_m} + R_E} \cdot \frac{R_1}{R_1 + R_S}$$

## Amplifier Example II

- Again, AC ground/short and Thevenin transformation are needed to transform the complex circuit into a simple stage with emitter degeneration.

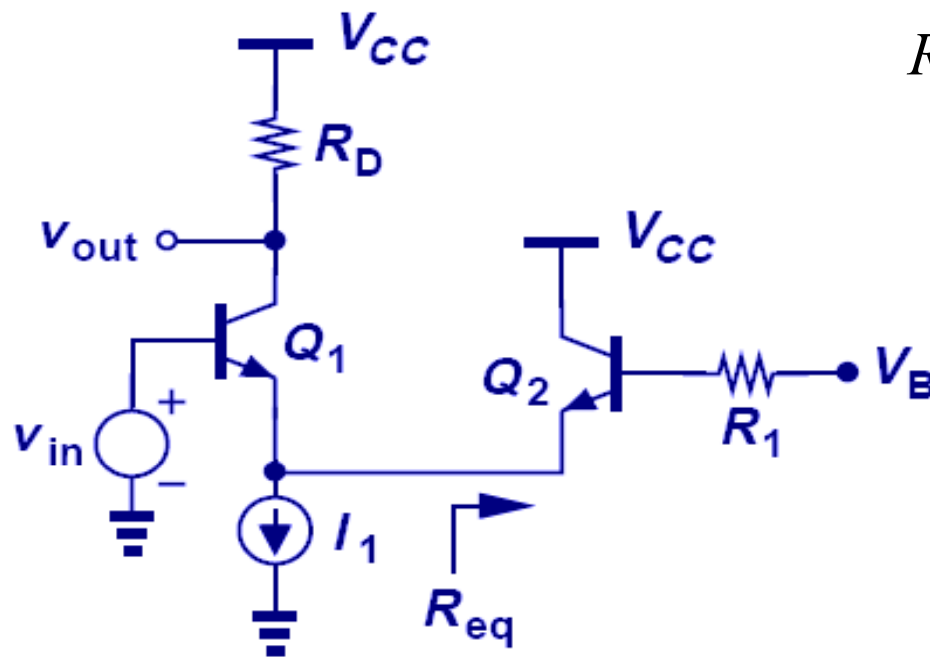


$$\frac{v_{out}}{v_{in}} = - \frac{R_C}{\frac{R_{Thev}}{\beta + 1} + \frac{1}{g_m} + R_2}$$

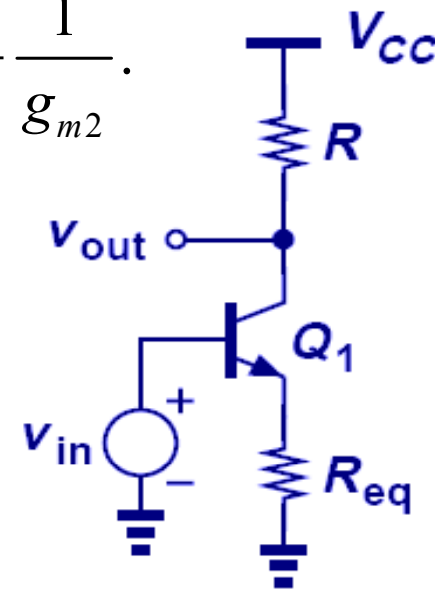
$$\frac{v_{out}}{v_{in}} = - \frac{R_C}{\frac{R_s \parallel R_1}{\beta + 1} + \frac{1}{g_m} + R_2} \cdot \frac{R_1}{R_1 + R_s}$$

## Amplifier Example II

- The key for solving this problem is first identifying  $R_{eq}$ , which is the impedance seen at the emitter of  $Q_2$  in parallel with the infinite output impedance of an ideal current source. Second, use the equations for degenerated CE stage with  $R_E$  replaced by  $R_{eq}$ .



$$R_{eq} = \frac{R_1}{\beta + 1} + \frac{1}{g_{m2}}$$

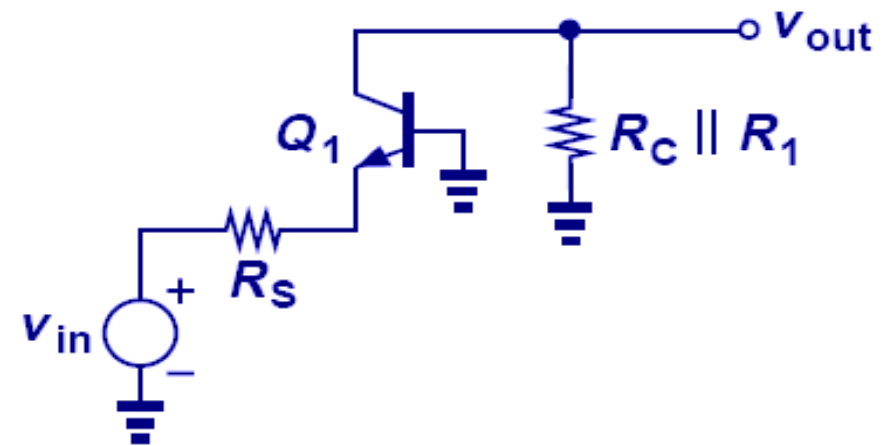
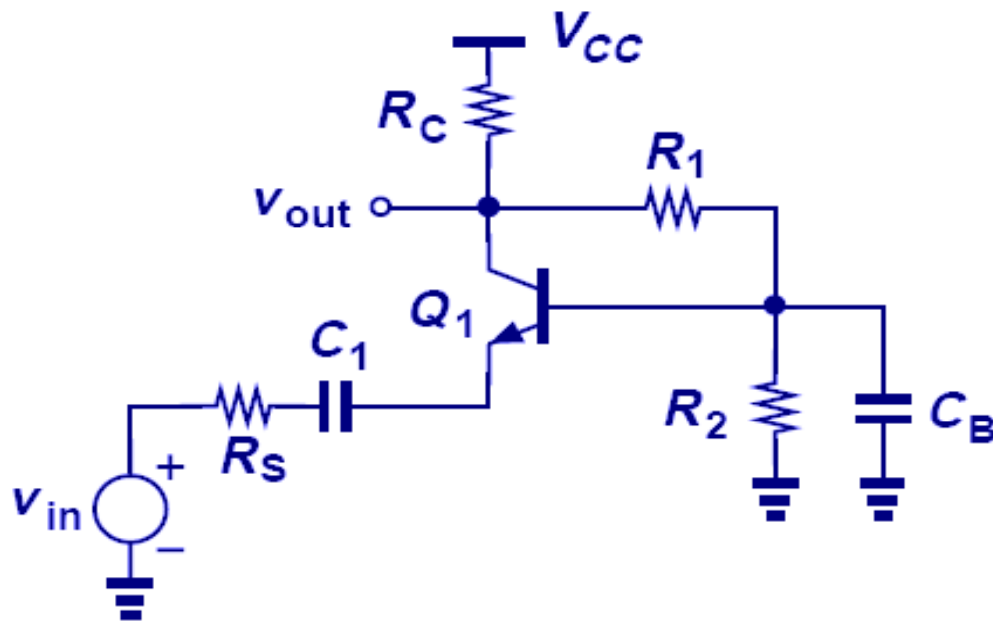


$$A_v = \frac{-R_C}{\frac{1}{g_{m1}} + R_{eq}} = \frac{-R_C}{\frac{1}{g_{m1}} + \frac{R_1}{\beta + 1} + \frac{1}{g_{m2}}}$$

$$\begin{aligned} R_{in} &= r_{\pi 1} + (\beta + 1)R_{eq} \\ &= r_{\pi 1} + R_1 + r_{\pi 2} \end{aligned}$$

## Amplifier Example IV

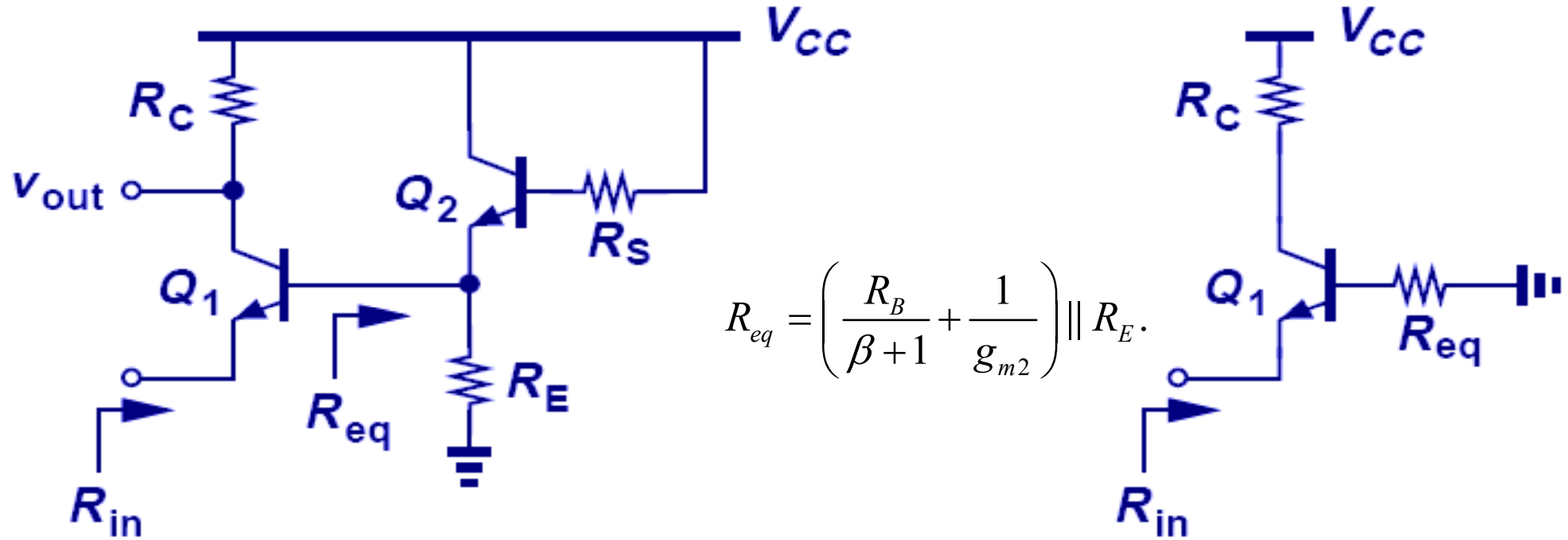
- The key for solving this problem is recognizing that  $C_B$  at frequency of interest shorts out  $R_2$  and provide a ground for  $R_1$ .
- $R_1$  appears in parallel with  $R_C$  and the circuit simplifies to a simple CB stage.



$$A_v = \frac{R_C \parallel R_1}{R_s + \frac{1}{g_m}}$$

# Amplifier Example V

- The key for solving this problem is recognizing the equivalent base resistance of  $Q_1$  is the parallel connection of  $R_E$  and the impedance seen at the emitter of  $Q_2$ .

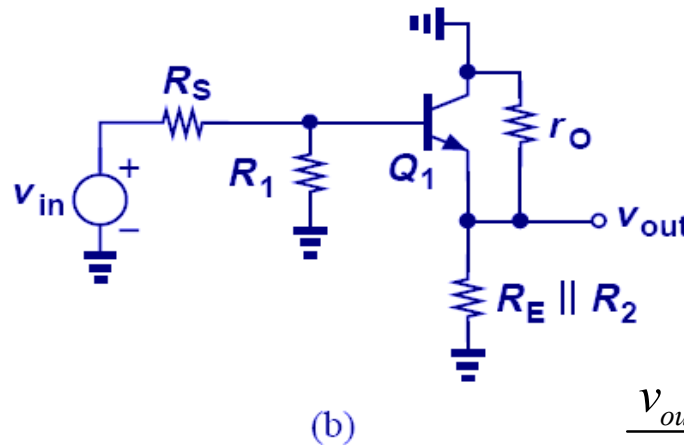
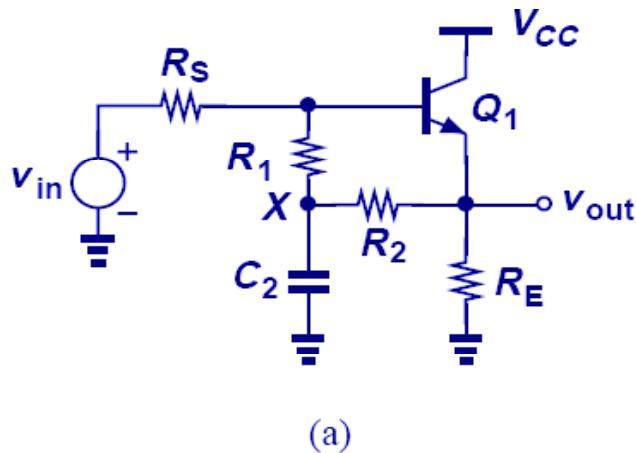


$$R_{eq} = \left( \frac{R_B}{\beta + 1} + \frac{1}{g_{m2}} \right) \parallel R_E.$$

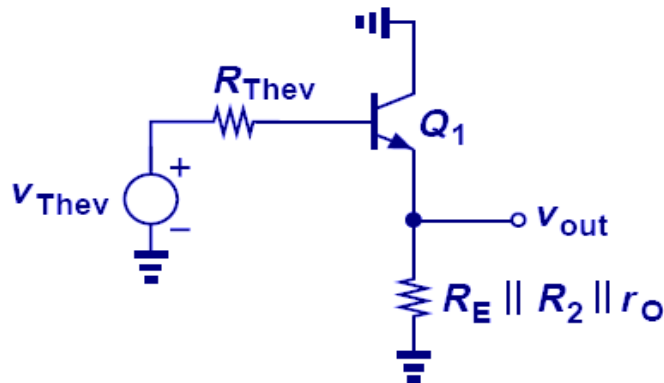
$$R_{in} = \frac{R_{eq}}{\beta + 1} + \frac{1}{g_{m1}} = \frac{1}{\beta + 1} \left[ \left( \frac{R_B}{\beta + 1} + \frac{1}{g_{m2}} \right) \parallel R_E \right] + \frac{1}{g_{m1}}.$$

# Amplifier Example VI

- The key in solving this problem is recognizing a DC supply is actually an AC ground and using Thevenin transformation to simplify the circuit into an emitter follower.



$$\frac{v_{out}}{v_{Thev}} = \frac{R_E \parallel R_2 \parallel r_o}{R_E \parallel R_2 \parallel r_o + \frac{1}{g_m} + \frac{R_{Thev}}{\beta + 1}}$$



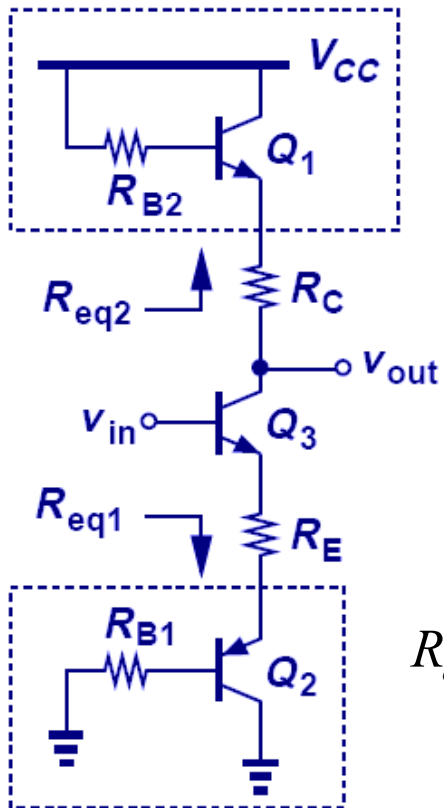
$$\frac{v_{out}}{v_{in}} = \frac{R_E \parallel R_2 \parallel r_o}{R_E \parallel R_2 \parallel r_o + \frac{1}{g_m} + \frac{R_s \parallel R_1}{\beta + 1}} \cdot \frac{R_1}{R_1 + R_s}$$

$$R_{out} = \left( \frac{R_{Thev}}{\beta + 1} + \frac{1}{g_m} \right) \parallel (R_E \parallel R_2 \parallel r_o)$$

$$R_{out} = \left( \frac{R_s \parallel R_1}{\beta + 1} + \frac{1}{g_m} \right) \parallel R_E \parallel R_2 \parallel r_o$$

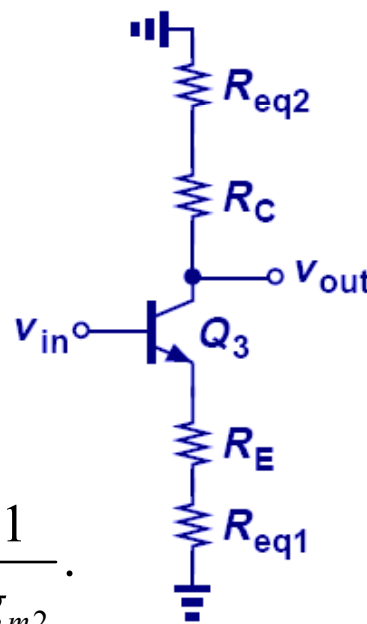
# Amplifier Example VII

- Impedances seen at the emitter of  $Q_1$  and  $Q_2$  can be lumped with  $R_C$  and  $R_E$ , respectively, to form the equivalent emitter and collector impedances.



$$R_{eq1} = \frac{R_{B1}}{\beta + 1} + \frac{1}{g_{m2}}$$

$$R_{eq2} = \frac{R_{B2}}{\beta + 1} + \frac{1}{g_{m1}}$$



$$R_{in} = r_{\pi 3} + (\beta + 1)(R_E + R_{eq1})$$

$$R_{out} = R_C + R_{eq2}$$

$$A_v = - \frac{R_C + R_{eq2}}{R_{eq1} + \frac{1}{g_{m3}} + R_E}$$

$$R_{in} = r_{\pi 1} + (\beta + 1) \left( R_E + \frac{R_{B1}}{\beta + 1} + \frac{1}{g_{m2}} \right)$$

$$R_{out} = R_C + \frac{R_{B2}}{\beta + 1} + \frac{1}{g_{m3}}$$

$$A_v = - \frac{R_C + \frac{R_{B2}}{\beta + 1} + \frac{1}{g_{m3}}}{\frac{R_{B1}}{\beta + 1} + \frac{1}{g_{m2}} + \frac{1}{g_{m1}}}$$

## Example

**Objective** : Analyze a pnp amplifier circuit. Assume transistor parameters of

$$\beta=80, V_{EB}(on)=0.7V, \text{ and } V_A=\infty.$$

**Solution (DC Analysis)**: A dc KVL equation around the E-B loop yields

$$V^+ = V_{EB}(on) + I_{BQ}R_B + V_{BB} \quad \text{or} \quad 5 = 0.7 + I_{BQ}(50) + 3.65$$

which yields  $I_{BQ} = 13 \mu A$

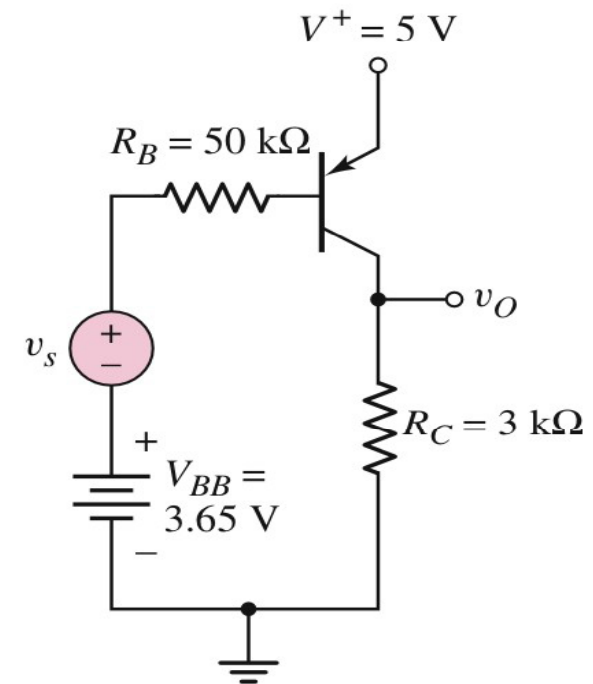
Then  $I_{CQ} = 1.04 mA$      $I_{EQ} = 1.05 mA$

A dc KVL equation around the E-C loop yields

$$V^+ = V_{ECQ} + I_{BQ}R_C \quad \text{or} \quad 5 = V_{ECQ} + (1.04)(3)$$

We find  $V_{ECQ} = 1.88V$

The transistor is therefore biased in the forward-active mode.



Copyright © The McGraw-Hill Companies, Inc.  
Permission required for reproduction or display.



**Solution (AC Analysis):** The small-signal hybrid- $\pi$  parameters are found to be

$$g_m = \frac{I_{CQ}}{V_T} = \frac{1.04}{0.026} = 40 \text{ mA/V} \quad r_\pi = \frac{\beta V_T}{I_{CQ}} = \frac{(80)(0.026)}{1.04} = 2 \text{ k}\Omega$$

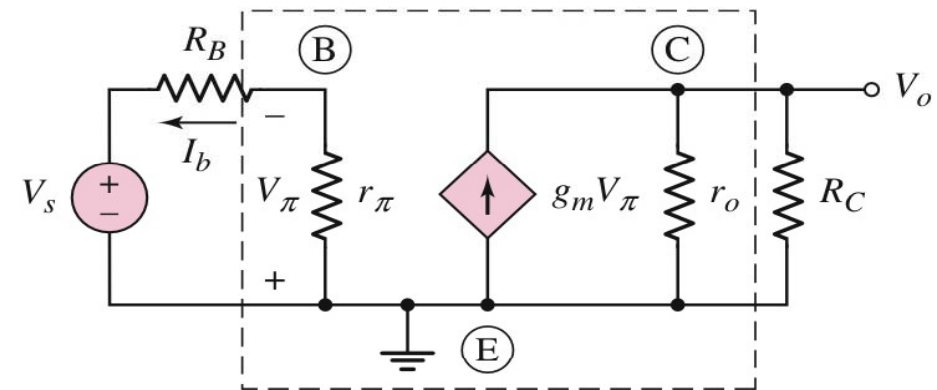
and  $r_o = \frac{V_A}{I_{CQ}} = \frac{\infty}{1.04} = \infty$

The small-signal equivalent circuit is shown in Figure  
With  $r_o = \infty$ , the small-signal output voltage is

$$V_o = (g_m V_\pi) R_C \quad \text{and} \quad V_\pi = - \left( \frac{r_\pi}{r_\pi + R_B} \right) V_s$$

Noting that  $\beta = g_m r_\pi$  we find the small-signal voltage gain to be

$$A_v = \frac{V_o}{V_s} = \frac{-\beta R_C}{r_\pi + R_B} = \frac{-(80)(3)}{2 + 50} \quad \text{or} \quad A_v = -4.62$$



Copyright © The McGraw-Hill Companies, Inc.  
Permission required for reproduction or display.

- The small-signal input resistance seen by the signal source (see the Figure) is

$$R_i = R_B + r_\pi = 50 + 2 = 52k\Omega$$

- The small-signal output resistance looking back into the output terminal is

$$R_o = R_c \parallel r_o = 3 \parallel \infty = 3k\Omega$$

- Comment : We again note the  $-180^\circ$  phase shift between the output and input signals. We may also note that the base resistance  $R_B$  in the denominator substantially reduces the magnitude of the small-signal voltage gain. We can also note that placing the pnp transistor in this configuration allows us to use positive power supplies.

## Three Basic Amplifiers: summary and comparison

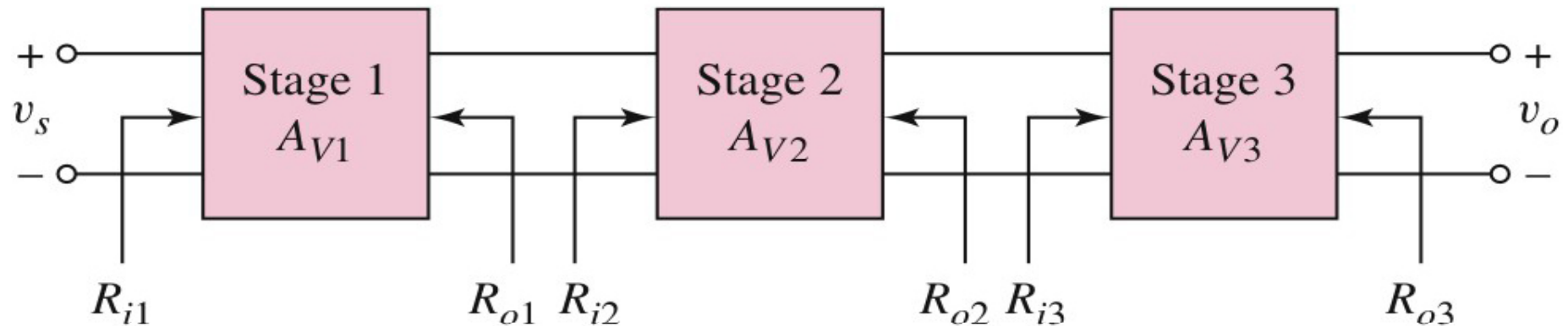
Characteristics of the three BJT amplifier configurations

| Configuration    | Voltage gain  | Current gain  | Input resistance | Output resistance |
|------------------|---------------|---------------|------------------|-------------------|
| Common emitter   | $A_v > 1$     | $A_i > 1$     | Moderate         | Moderate to high  |
| Emitter follower | $A_v \cong 1$ | $A_i > 1$     | High             | Low               |
| Common base      | $A_v > 1$     | $A_i \cong 1$ | Low              | Moderate to high  |

- This table will be used in the design of multistage amplifiers

# Multistage Amplifiers

- Transistor amplifier circuits in series or cascade



Copyright © The McGraw-Hill Companies, Inc.  
Permission required for reproduction or display.

- ❑ Increase voltage gain
- ❑ Very low output resistance

# Cascade Configuration

each transistor  $r_o = 0$

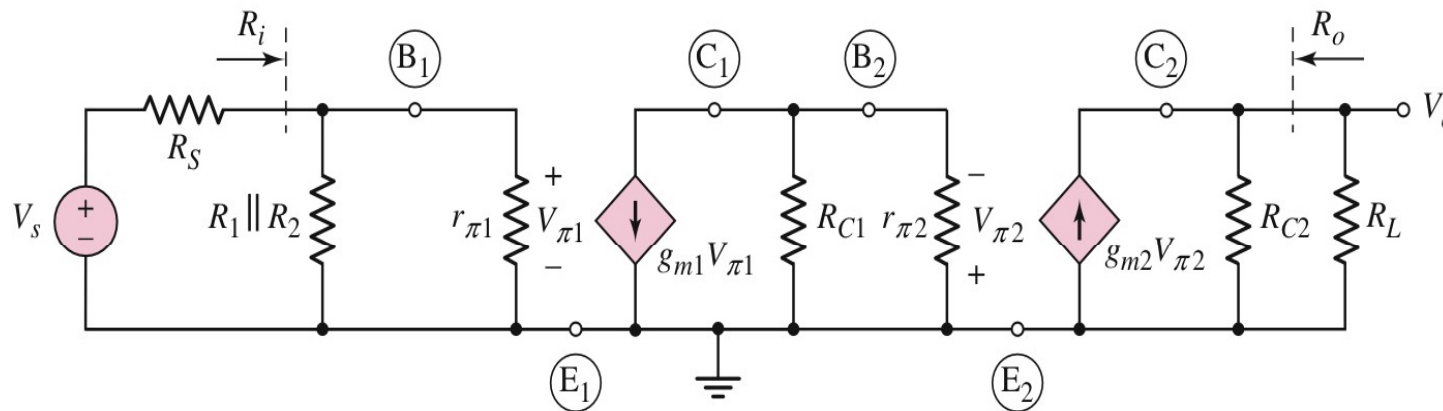
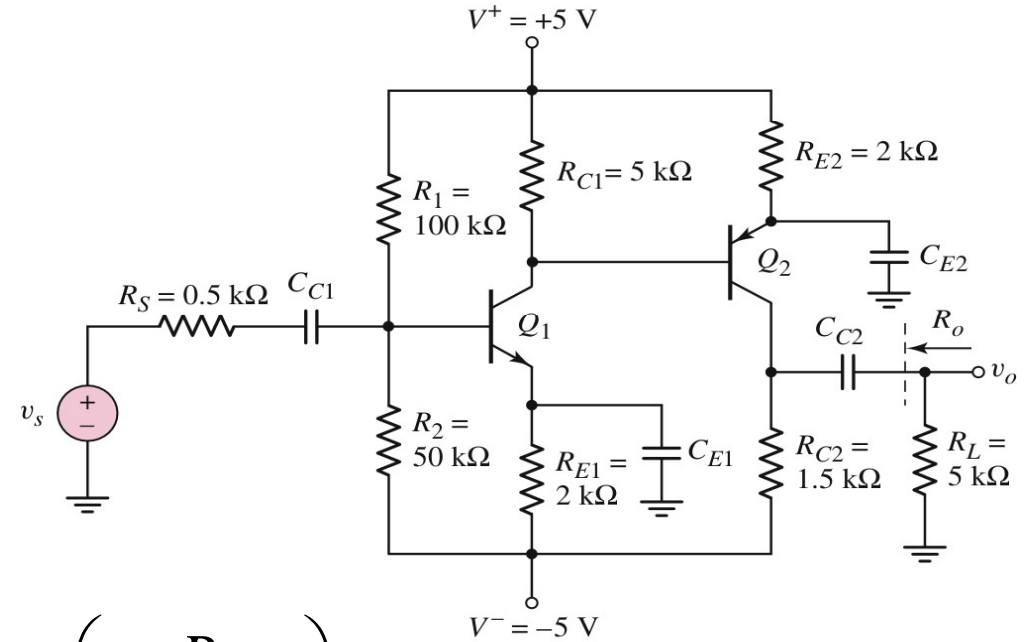
- Input resistance

$$R_i = R_1 \parallel R_2 \parallel r_{\pi 1}$$

- Output resistance

$$v_s \Rightarrow 0, R_o = R_{c2}$$

$$A_v = \frac{v_o}{v_s} = g_{m1} g_{m2} (R_{c1} \parallel r_{\pi 2}) (R_{c2} \parallel R_L) \left( \frac{R_i}{R_i + R_s} \right)$$



Copyright © The McGraw-Hill Companies, Inc.  
Permission required for reproduction or display.

# Darlington Pair Configuration

$$v_{\pi 1} = I_i r_{\pi 1}$$

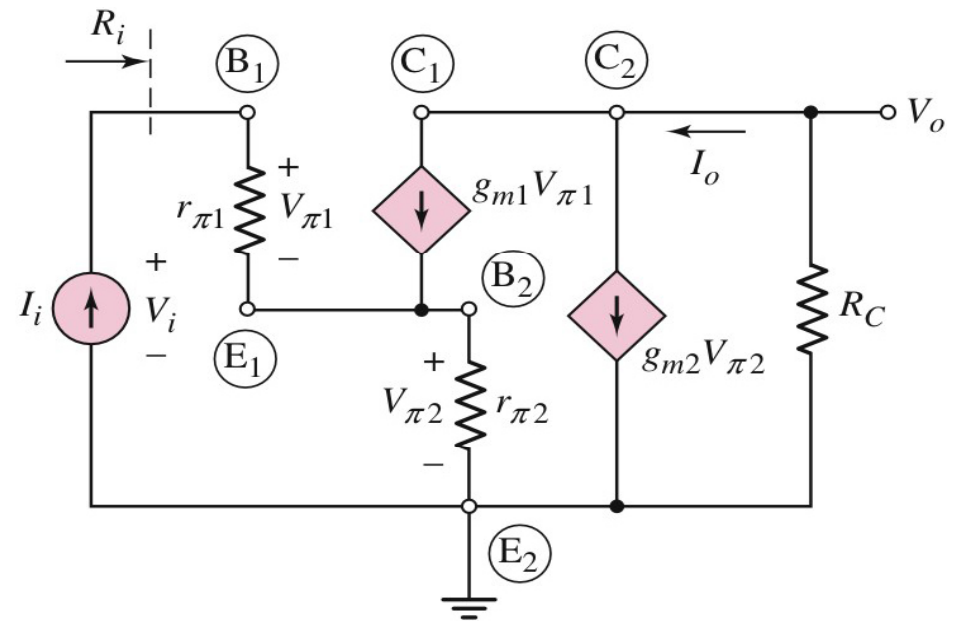
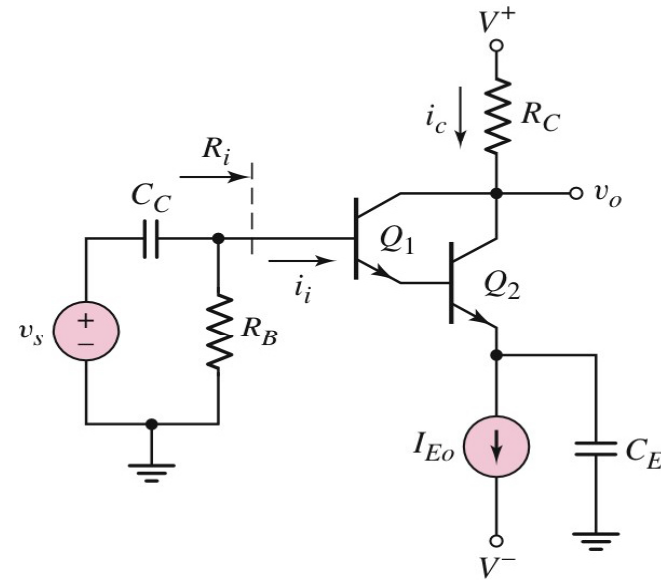
$$g_m v_{\pi 1} = g_{m1} r_{\pi 1} I_i = \beta_1 I_i$$

$$v_{\pi 2} = (I_i + \beta_1 I_i) r_{\pi 2}$$

$$I_o = g_{m1} v_{\pi 1} + g_{m2} v_{\pi 2}$$

$$= \beta_1 I_i + \beta_2 (I_i + \beta_1 I_i)$$

$$A_i = \frac{I_o}{I_i} = \beta_1 + \beta_2 (1 + \beta_1) \cong \beta_1 \beta_2$$



$$v_i = I_i r_{\pi 1} + I_i (1 + \beta_1) r_{\pi 2}$$

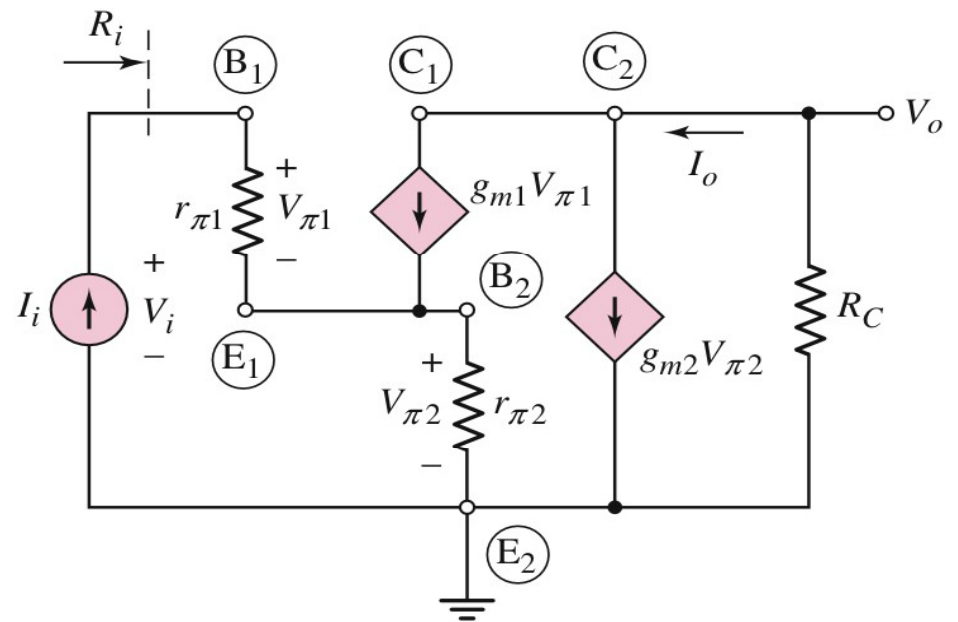
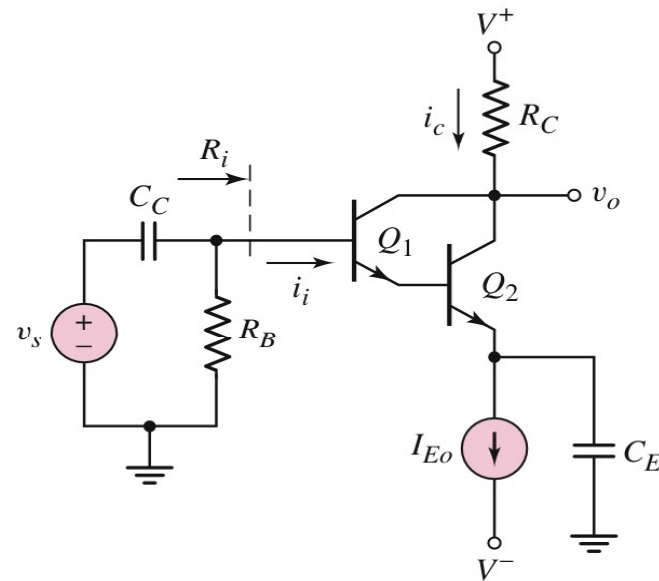
$$R_i = \frac{v_i}{I_i} = r_{\pi 1} + (1 + \beta_1) r_{\pi 2}$$

In another way,

$$r_{\pi 1} = \frac{\beta_1 v_T}{I_{CQ1}} \quad I_{CQ1} \cong \frac{I_{CQ2}}{\beta_2}$$

$$r_{\pi 1} = \beta_1 \left( \frac{\beta_2 v_T}{I_{CQ2}} \right) = \beta_1 r_{\pi 2}$$

$$R_i \cong 2\beta_1 r_{\pi 2}$$



# Cascode Configuration

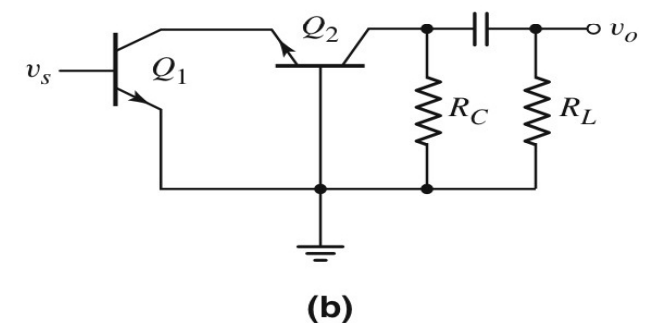
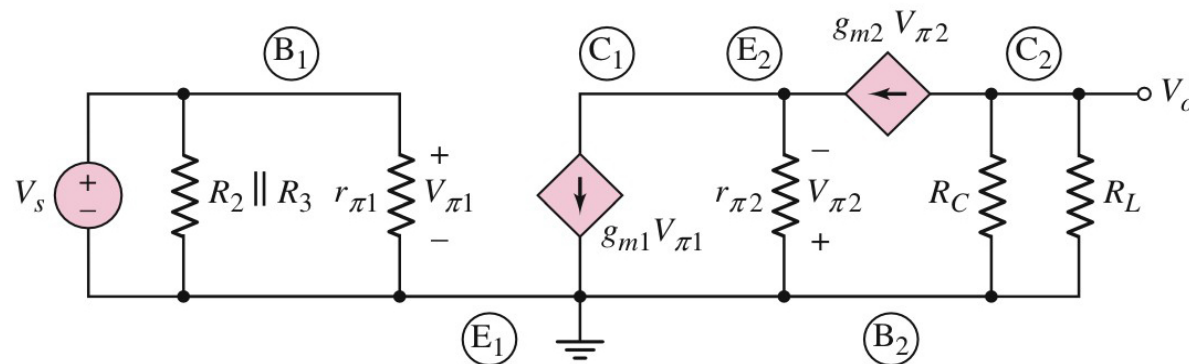
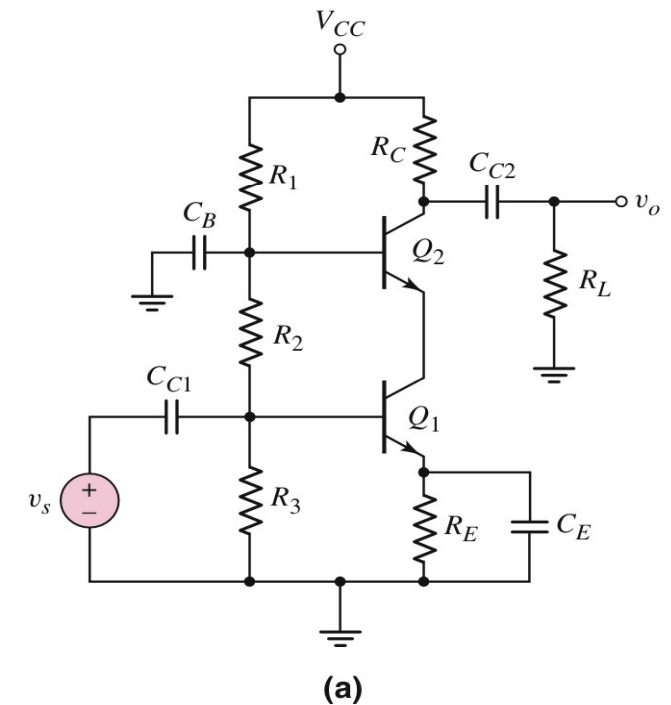
- $Q_1$  drives  $Q_2$
- Output resistance is much larger
- The small signal gain

$$V_o = -(g_{m2} V_{\pi 2})(R_C \parallel R_L)$$

or

$$V_o = -g_{m1} g_{m2} \left( \frac{r_{\pi 2}}{1 + \beta_2} \right) (R_C \parallel R_L) V_S$$

$$A_v = \frac{V_o}{V_S} = -g_{m1} g_{m2} \left( \frac{r_{\pi 2}}{1 + \beta_2} \right) (R_C \parallel R_L)$$





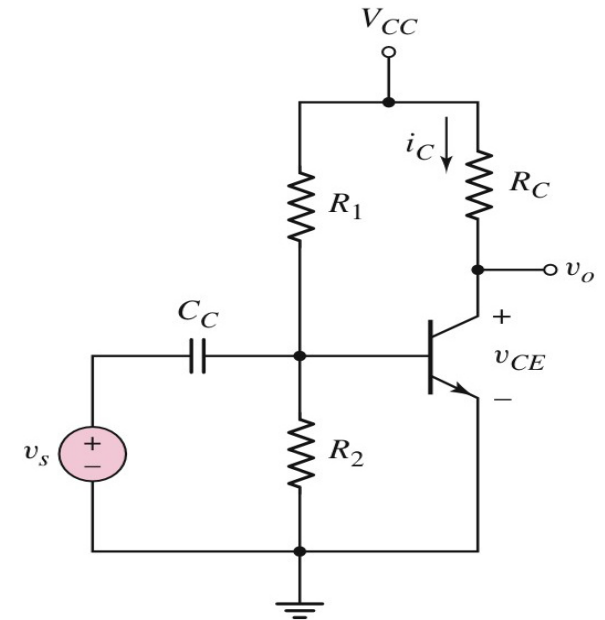
# Power Considerations

- Energy must be conserved
- DC power

$$P_{CC} = I_{CQ}V_{CC} + P_{\text{Bias}}$$

$$P_{RC} = I_{CQ}^2 R_C$$

$$P_Q = I_{CQ}V_{CEQ} + I_{BQ}V_{BEQ} \approx I_{CQ}V_{CEQ}$$



Copyright © The McGraw-Hill Companies, Inc.  
Permission required for reproduction or display.

- Power supplied by the voltage source

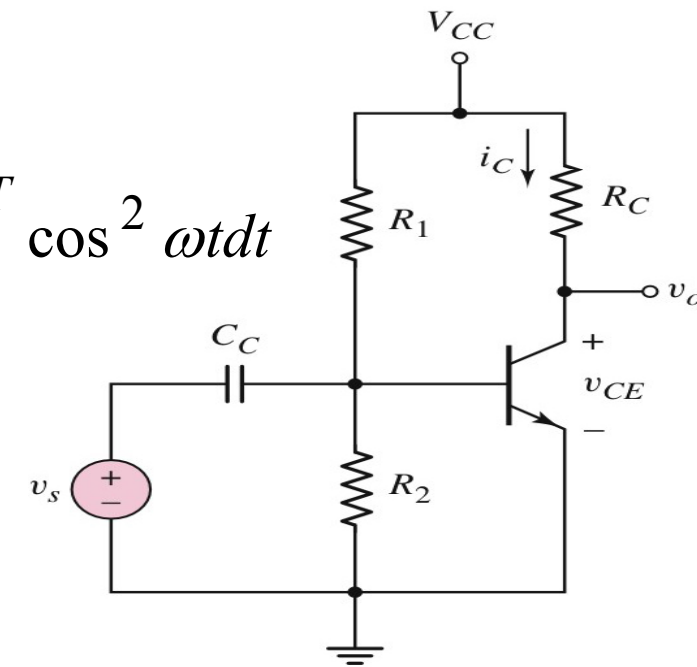
$$\bar{P}_{cc} = \frac{1}{T} \int_0^T V_{CC} i_C dt + P_{\text{Bias}} = \frac{1}{T} \int_0^T V_{CC} [I_{CQ} + I_c \cos \omega t] dt + P_{\text{Bias}}$$

$$= V_{CC} I_{CQ} + \frac{V_{CC} I_c}{T} \int_0^T \cos \omega t dt + P_{\text{Bias}}$$

$$= I_{CQ} V_{CC} + P_{\text{Bias}} = P_{CC}$$

- Power delivered to the load  $R_C$

$$\begin{aligned} \bar{P}_{RC} &= \frac{1}{T} \int_0^T i_C^2 R_C dt = \frac{R_C}{T} \int_0^T [I_{CQ} + I_c \cos \omega t]^2 dt \\ &= \frac{I_{CQ}^2 R_C}{T} \int_0^T dt + \frac{2I_{CQ} I_c R_C}{T} \int_0^T \cos \omega t dt + \frac{I_c^2 R_C}{T} \int_0^T \cos^2 \omega t dt \\ &= I_{CQ}^2 R_C + \frac{I_c^2 R_C}{2} = P_{RC} + \frac{I_c^2 R_C}{2} \end{aligned}$$



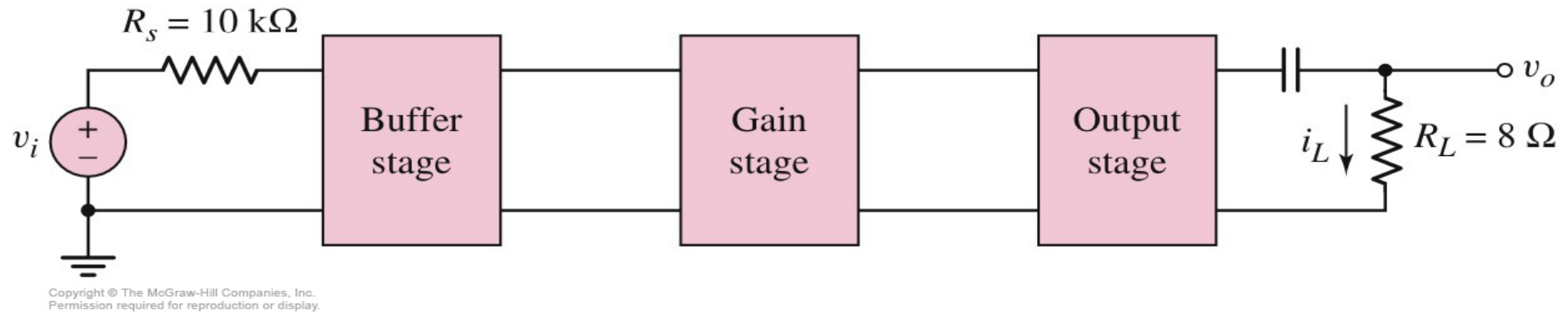
Copyright © The McGraw-Hill Companies, Inc.  
Permission required for reproduction or display.

- Power dissipated in the transistor

$$\begin{aligned} \bar{P}_Q &= \frac{1}{T} \int_0^T i_C v_{CE} dt = \frac{1}{T} \int_0^T [I_{CQ} + I_c \cos \omega t][V_{CEQ} - I_c R_C \cos \omega t] dt \\ &= I_{CQ} V_{CEQ} - \frac{I_c^2 R_C}{T} \int_0^T \cos^2 \omega t dt \\ &= I_{CQ} V_{CEQ} - \frac{I_c^2 R_C}{2} = P_Q - \frac{I_c^2 R_C}{2} \end{aligned}$$

# Design Application : Audio Amp

## ● Design Approach



- ❑ Input : C-C circuit
  - Reduce loading effect
- ❑ Output : C-C circuit
  - Provide output current and output signal power
- ❑ Gain stage : 2-stage C-E
  - Provide voltage gain

# Input buffer stage

$$\beta_1 = 100, I_{CQ1} = 1mA, V_{CEQ} = 6V, R_1 \parallel R_2 = 100k\Omega$$

$$R_{E1} \cong \frac{V_{CC} - V_{CEQ1}}{I_{CQ1}} = 6k\Omega$$

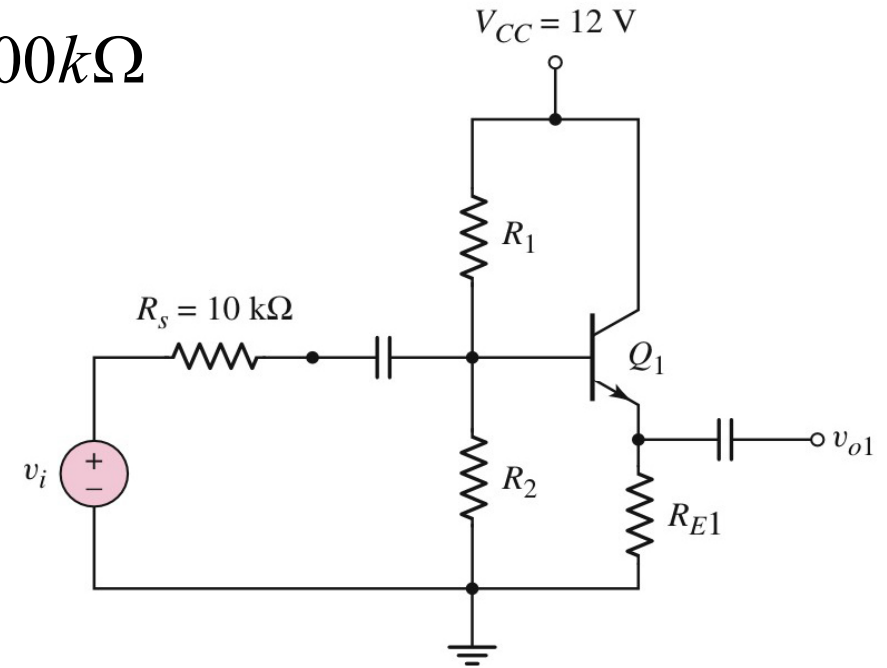
$$r_{\pi1} = \frac{\beta_1 V_T}{I_{CQ1}} = 2.6k\Omega$$

$$R_{i1} = R_1 \parallel R_2 \parallel \left[ r_{\pi1} + (1 + \beta_1) R_{E1} \right]$$

$$A_{v1} = \frac{v_{o1}}{v_i} = \frac{(1 + \beta_1) R_{E1}}{r_{\pi1} + (1 + \beta_1) R_{E1}} \cdot \left( \frac{R_{i1}}{R_{i1} + R_s} \right) = 0.892$$

for input signal  $10mV \rightarrow V_{o1} = 8.92mV$

$$\Rightarrow R_1 = 155k\Omega, R_2 = 282k\Omega$$



# Output stage

$$R_L = 8\Omega, P_L = 0.1W, \beta_4 = 50, I_{EQ4} = 0.3A, V_{CEQ4} = 6V$$

$$P_L = i_L^2 (rms) \cdot R_L \rightarrow i_L (rms) = 0.112A$$

$$i_L (peak) = 0.158A$$

$$V_o (peak) = (0.158)(8) = 1.26V$$

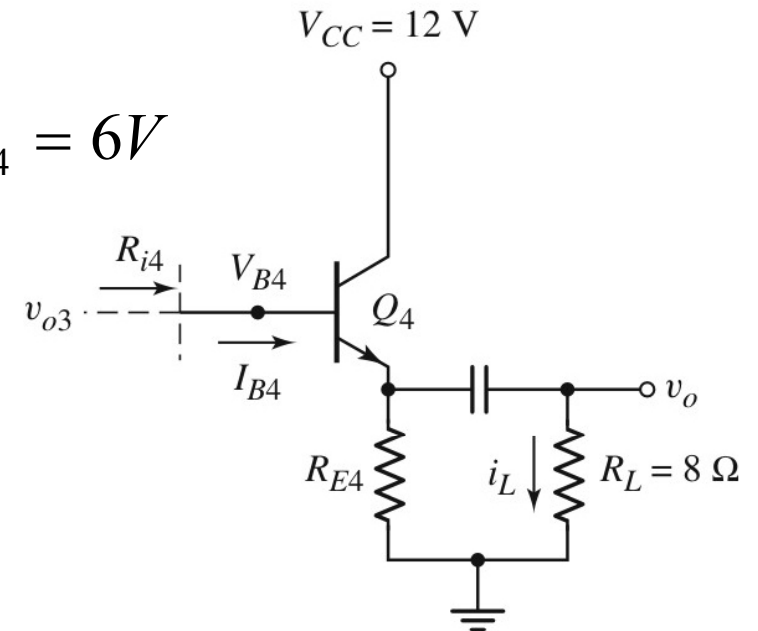
$$R_{E4} = \frac{V_{CC} - V_{CEQ4}}{I_{EQ4}} = 20\Omega$$

$$I_{CQ4} = \left( \frac{\beta_4}{1 + \beta_4} \right) \cdot I_{EQ4} = 0.294A$$

$$r_{\pi 4} = \frac{\beta_4 V_T}{I_{CQ4}} = 4.42\Omega$$

$$A_{V4} = \frac{v_o}{v_{o3}} = \frac{(1 + \beta_4)(R_{E4} \parallel R_L)}{r_{\pi 4} + (1 + \beta_4)(R_{E4} \parallel R_L)}$$

$$\because v_o = 1.26V \rightarrow v_{o3} = 1.28V$$



Copyright © The McGraw-Hill Companies, Inc.  
Permission required for reproduction or display.

## Gain stage

$$\beta = 100, \left| \frac{v_{o3}}{v_{o1}} \right| = \frac{1.28}{0.00892} = 144, |A_{v3}| = \left| \frac{v_{o3}}{v_{o2}} \right| = 5, |A_{v2}| = \left| \frac{v_{o2}}{v_{o1}} \right| = 28.8,$$

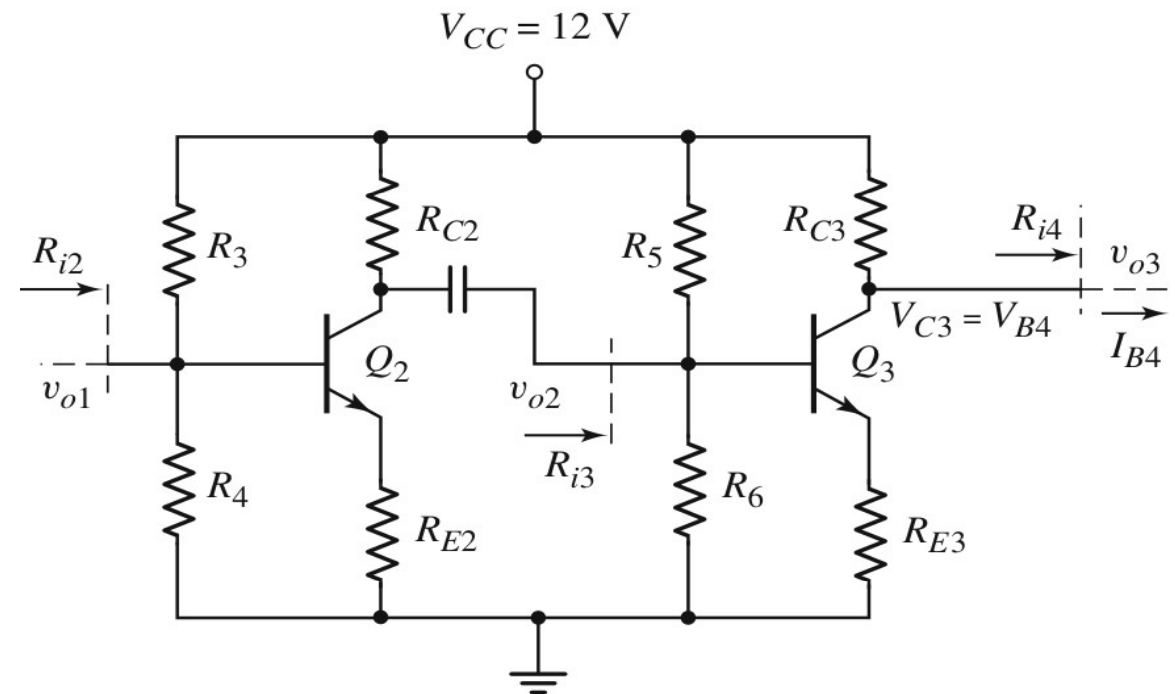
$$R_5 \parallel R_6 = 50k, R_3 \parallel R_4 = 50k, V_{C2} = 6V, I_{CQ2} = 5mA$$

$$|A_{v3}| = \frac{\beta_3 (R_{C3} \parallel R_{i4})}{r_{\pi 3} + (1 + \beta_3) R_{E3}}$$

$$\rightarrow R_{E3} = 25.4\Omega$$

$$|A_{v2}| = \frac{\beta_2 (R_{C2} \parallel R_{i3})}{r_{\pi 2} + (1 + \beta_2) R_{E2}}$$

$$\rightarrow R_{E2} = 23.1\Omega$$



Copyright © The McGraw-Hill Companies, Inc.  
Permission required for reproduction or display.